



**GCSE
GEOGRAPHY**

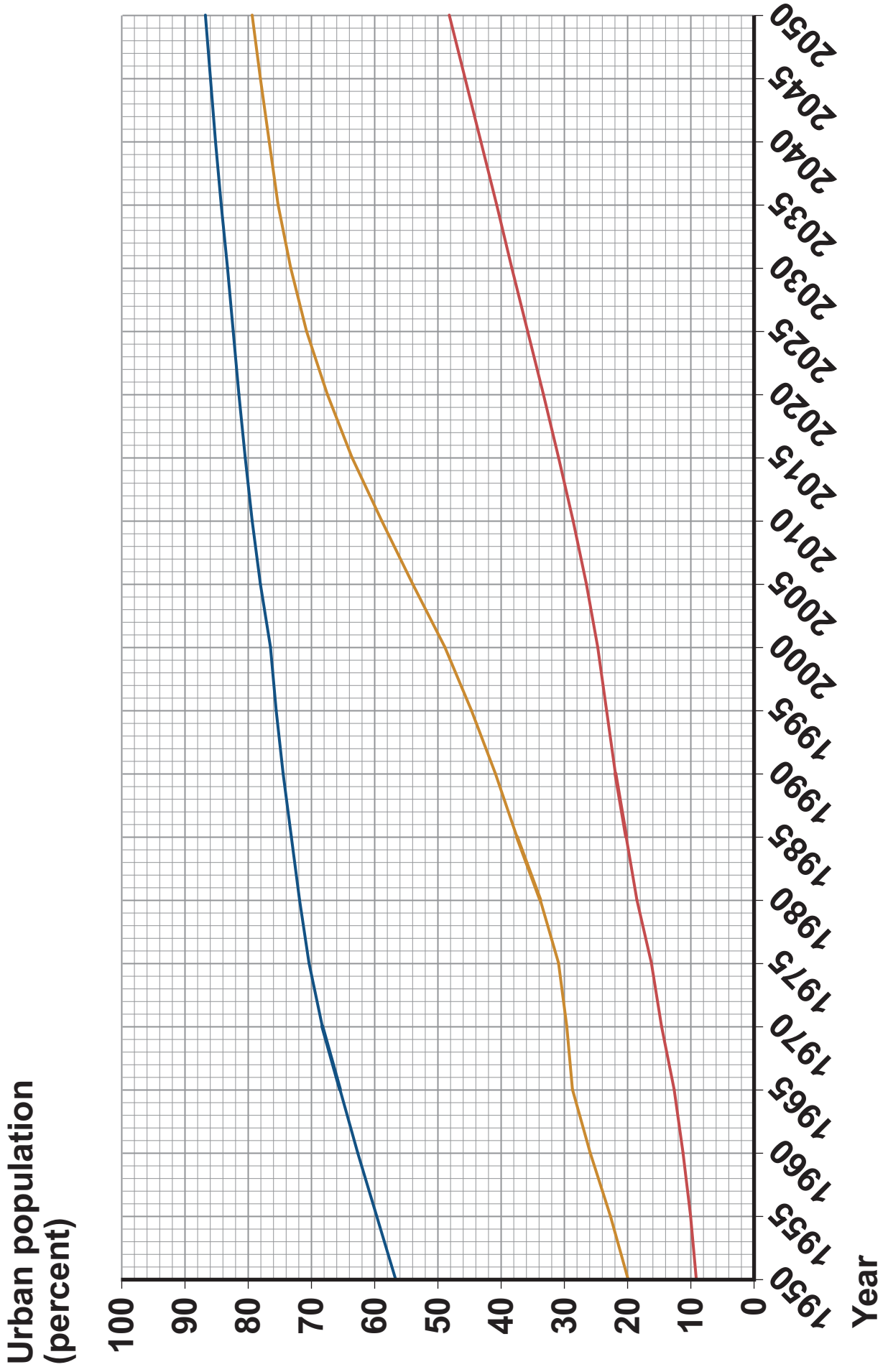
Paper 2 Challenges in the Human Environment

8035/2

Insert

[Turn over]

FIGURE 1 – For use with Question 1



KEY

-  Higher income countries (HICs)
-  Newly emerging economies (NEEs)
-  Lower income countries (LICs)

[Turn over]

FIGURE 2 – For use with Question 1

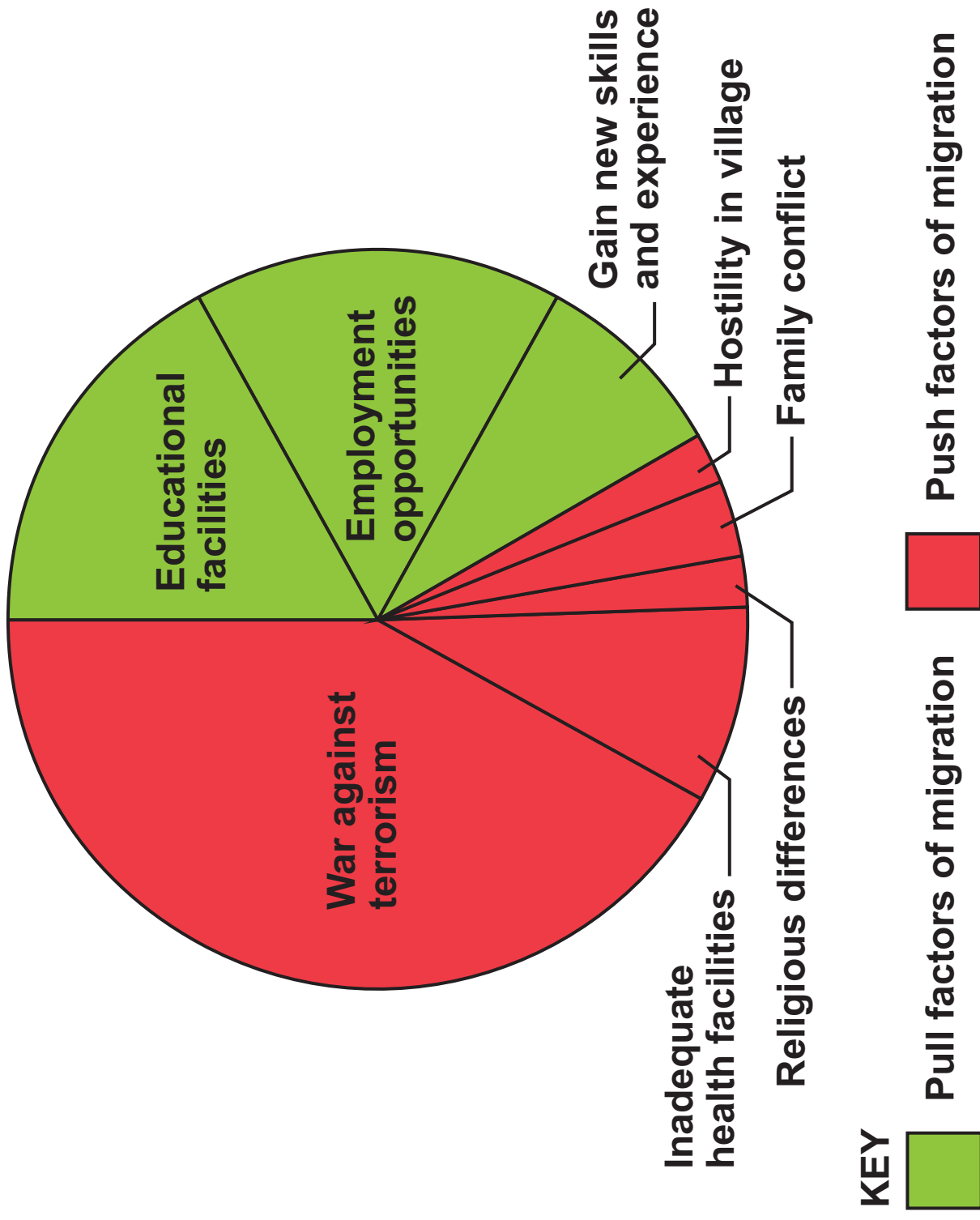


FIGURE 3 – For use with Question 1



What is the main reason for traffic getting worse in Bangalore?
Opinions please...

#RoadsPoorQuality 62%

#InsufficientPublicTransport 28%

#RoadsNeverRepaired 10%

[Turn over]

10 miles to go...SatNav says....1h30mins
That's **#BangaloreCongestion** 😞

Turned down lift home yesterday – I was in
a hurry! **#BangaloreCongestion**

FIGURE 4 – For use with Question 1

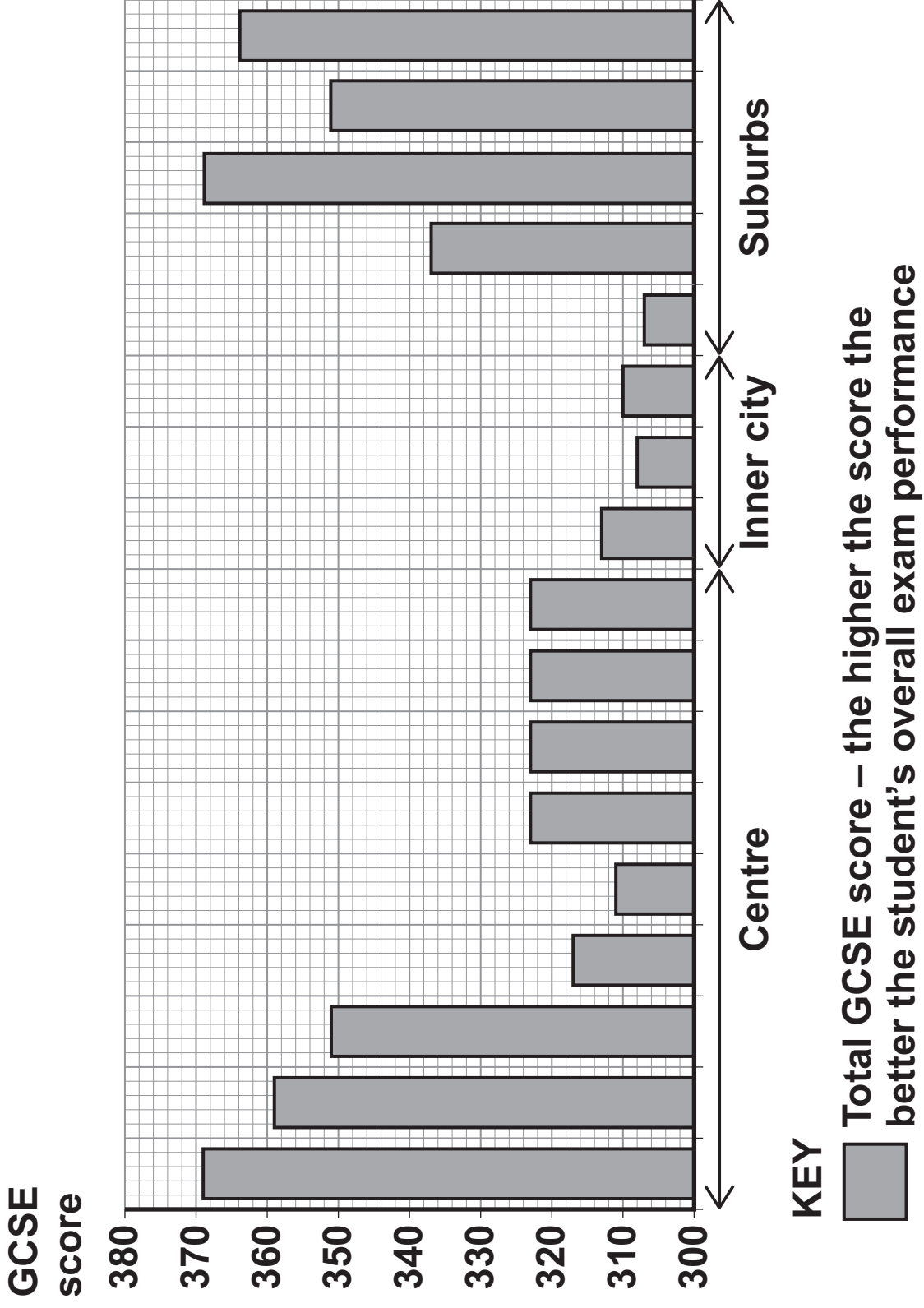
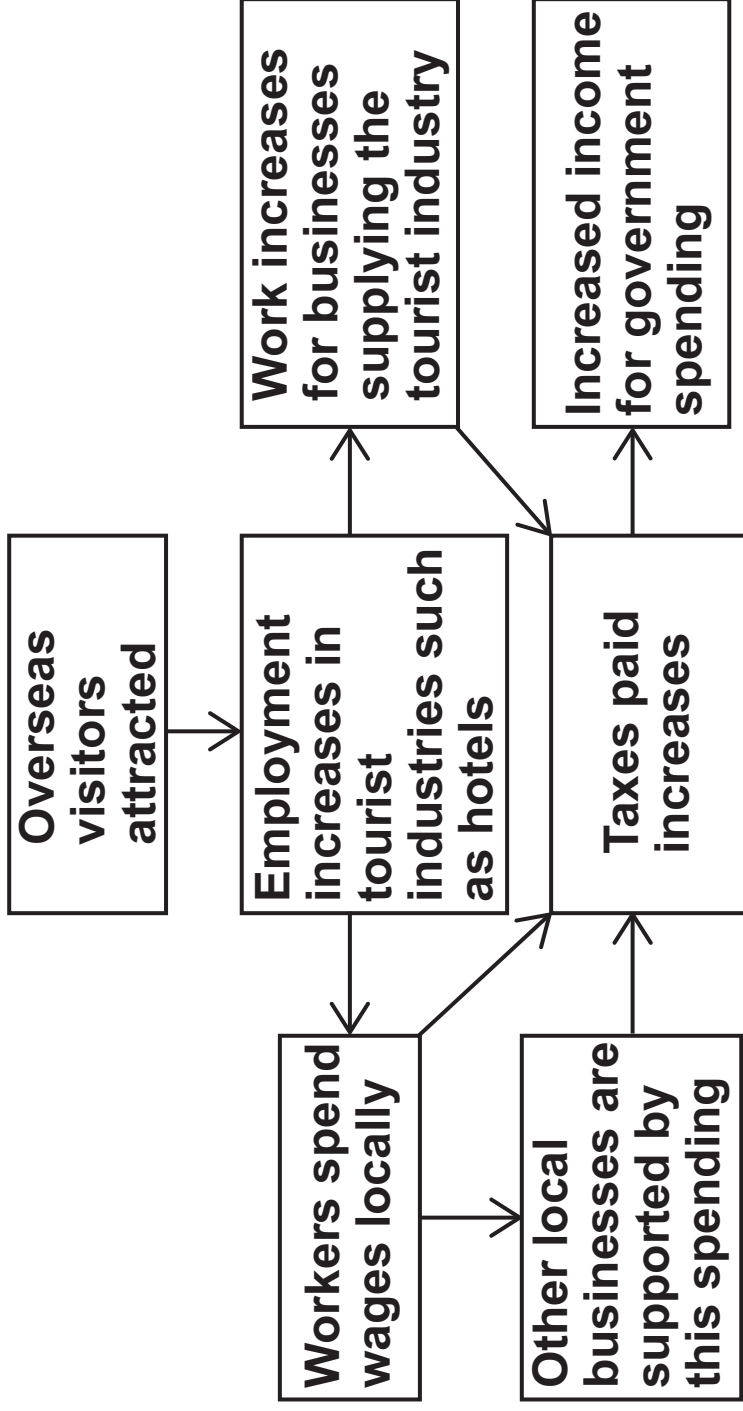


FIGURE 6 – For use with Question 2



[Turn over]

FIGURE 7 – For use with Question 2



The image shows a row of bicycles parked outside a building. Each bicycle has a two-wheeled stretcher attached to it.

BICYCLE AMBULANCES

There are two small Health Centres in the area serving 45 000 people. 1 in 6 women die in childbirth.

People have to travel vast distances to be seen by a nurse or doctor. Travel to the clinics is usually by ox and cart but this is an expensive and slow mode of transport.

A project was started to build bicycle ambulances and to provide training to the people in the area so more patients can make their way to a health centre. It is hoped that these bicycle ambulances will help save many lives.

[Turn over]

FIGURE 8 – For use with Question 2



| Region | £ per person per year |
|---------------------------------|------------------------------|
| North East | 222 |
| North West | 682 |
| Yorkshire and the Humber | 190 |
| East Midlands | 221 |
| West Midlands | 254 |
| East of England | 413 |
| London | 1943 |
| South East | 226 |
| South West | 212 |

[Turn over]

FIGURE 9 – For use with Question 3

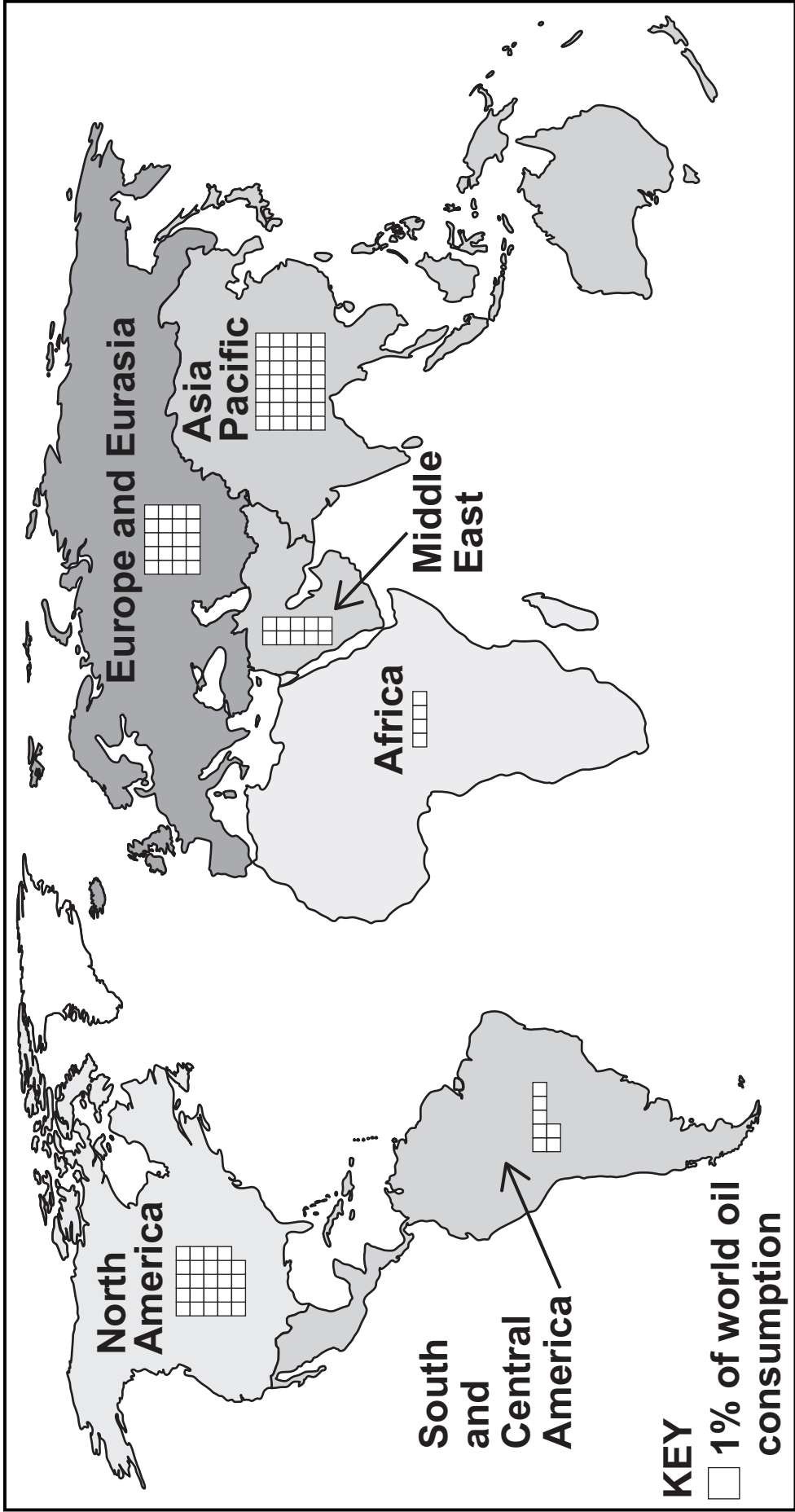
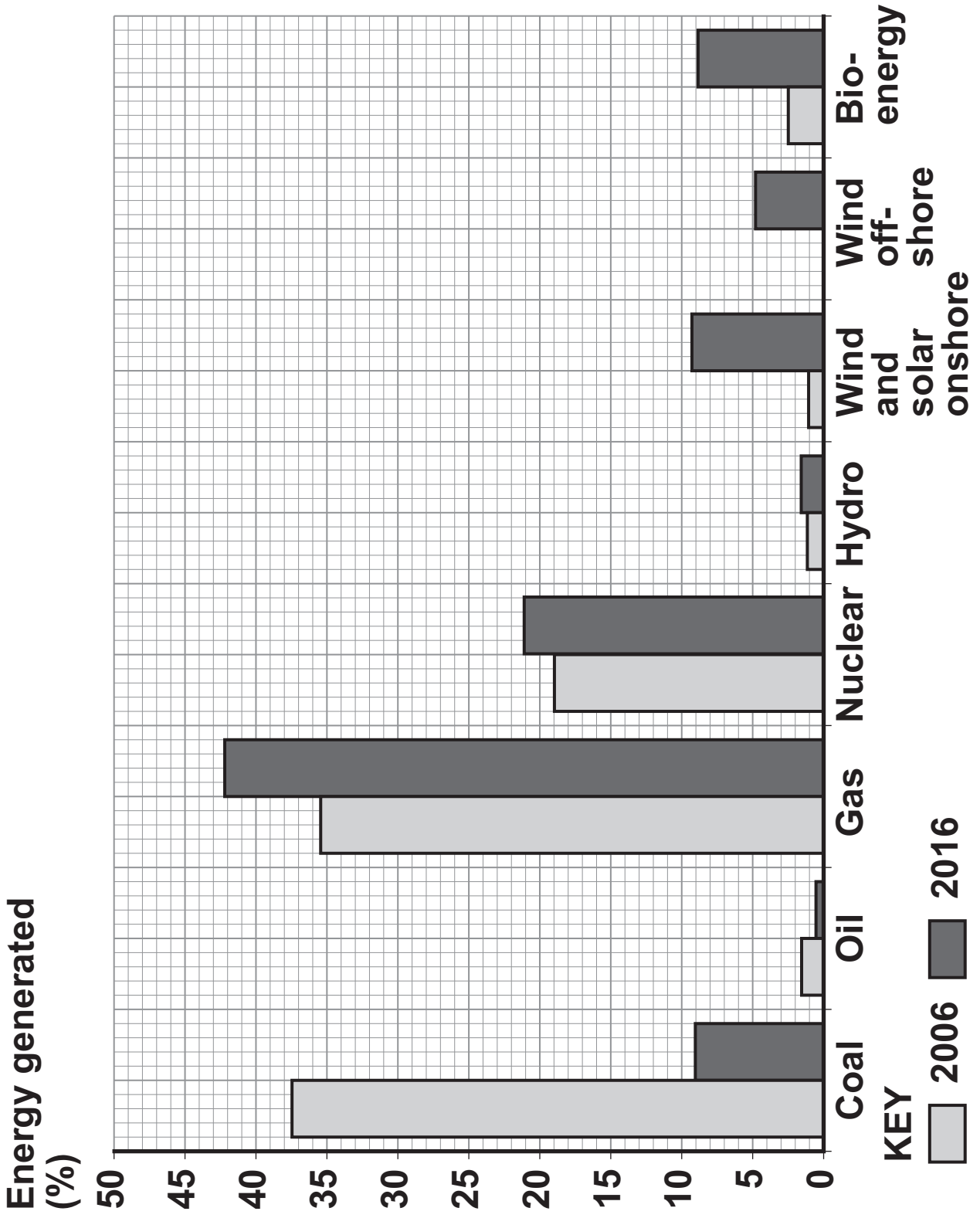
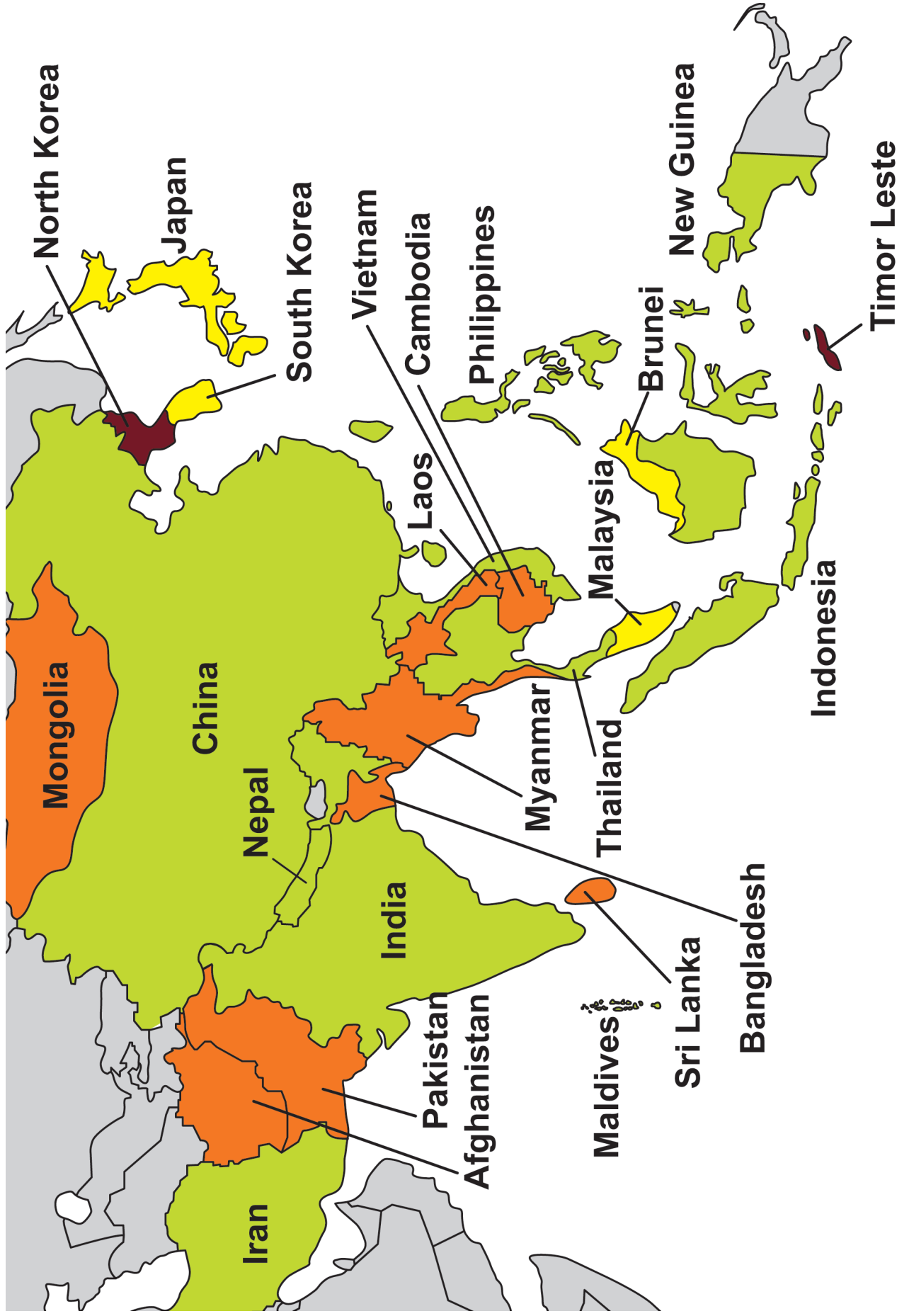


FIGURE 10 – For use with Question 3



[Turn over]

FIGURE 11 – For use with Question 4



KEY

**Percentage of the population
who were undernourished
2014–2016**

 **25.0 or more**

 **15.0 – 24.9**

 **5.0 – 14.9**

 **Less than 5.0**

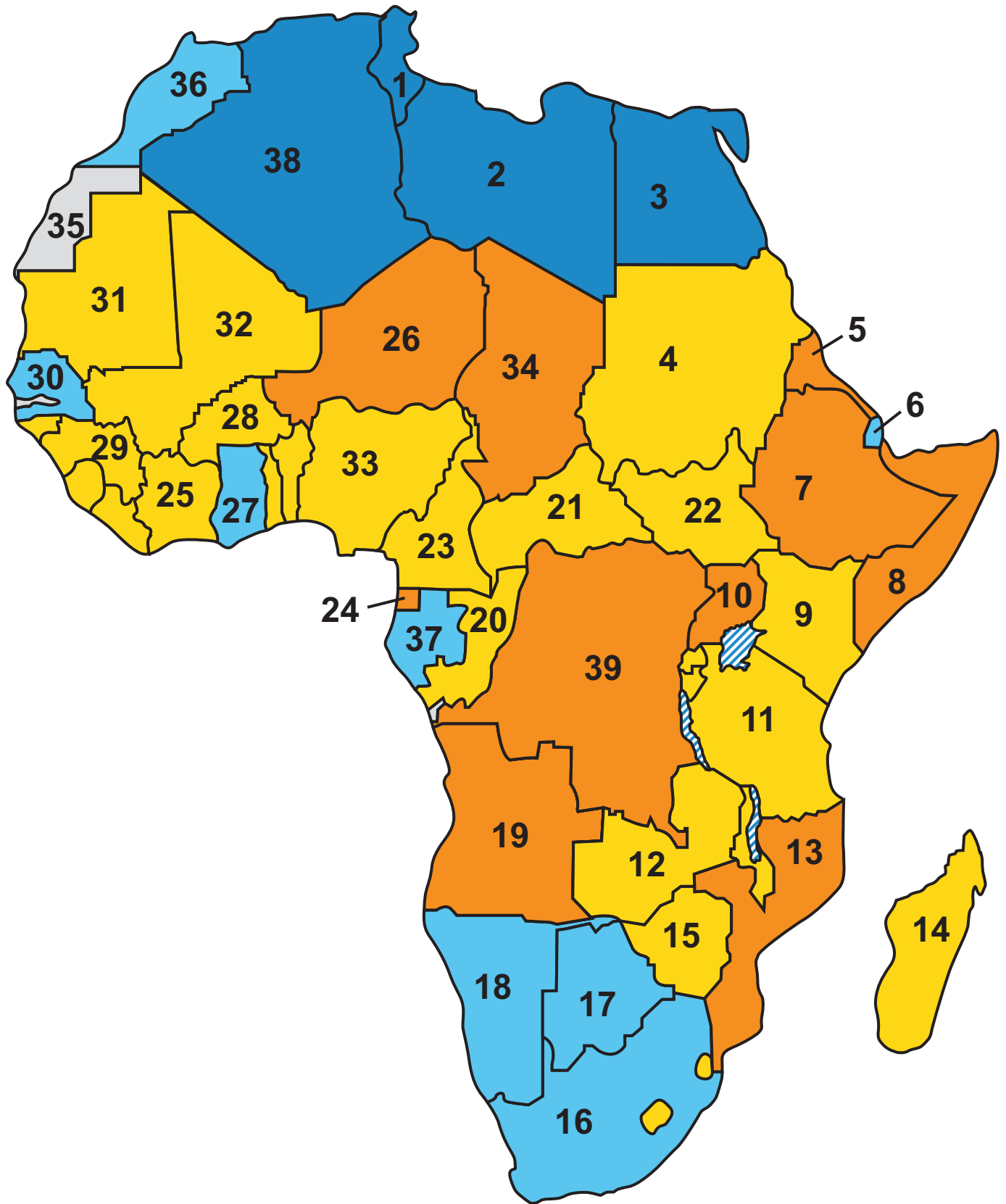
 **No data**

N ↑

0  **1000 km**

[Turn over]

FIGURE 12 – For use with Question 5



KEY

Percentage access to basic drinking water services in 2015

0 1000 km

 91 – 100

 Less than 50

 76 – 90

 No data

 50 – 75

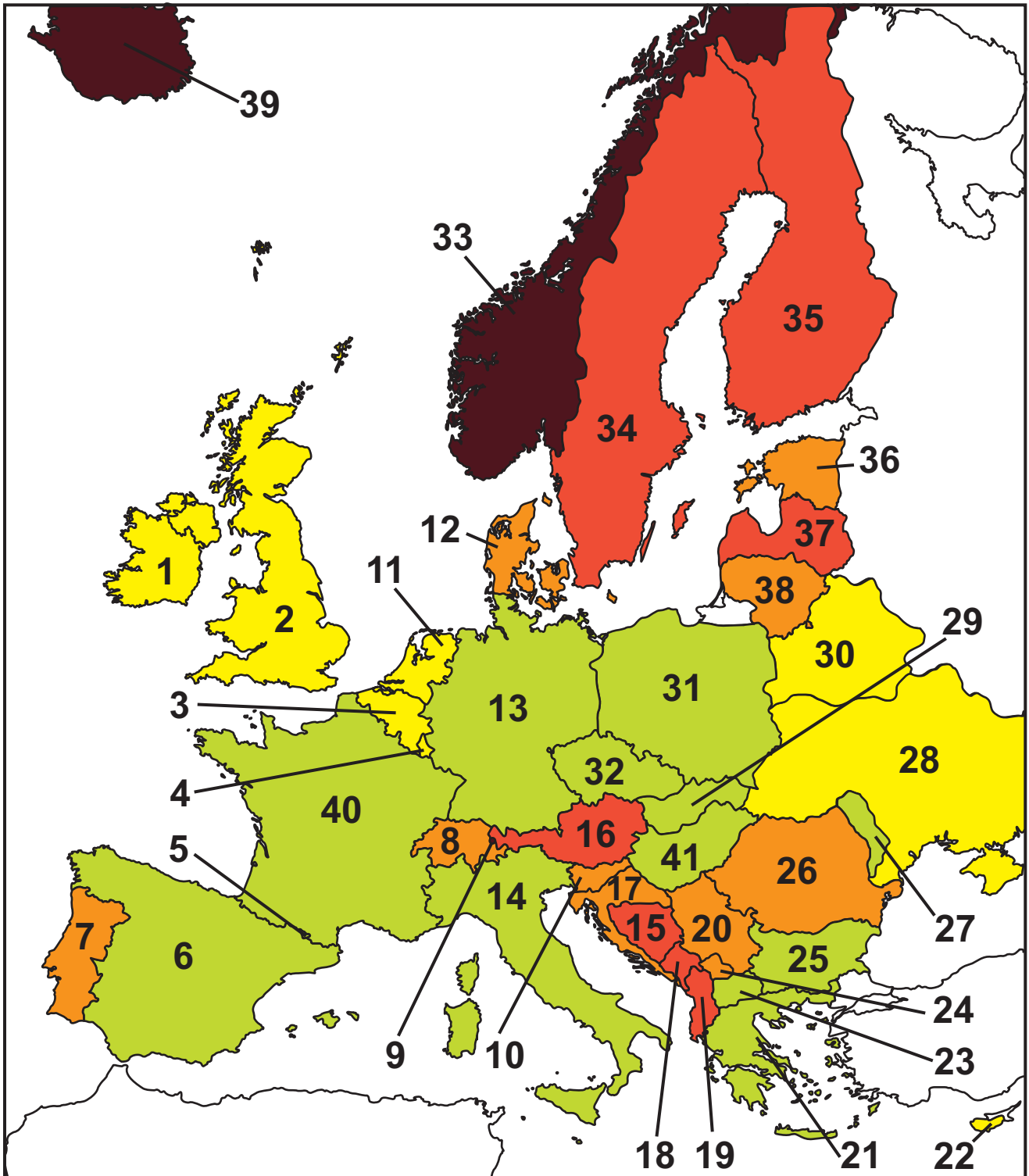
 Lake



| | | | |
|----|--------------|----|------------------------------|
| 1 | Tunisia | 20 | Congo |
| 2 | Libya | 21 | Central African Republic |
| 3 | Egypt | 22 | South Sudan |
| 4 | Sudan | 23 | Cameroon |
| 5 | Eritrea | 24 | Equatorial Guinea |
| 6 | Djibouti | 25 | Cote D'Ivoire |
| 7 | Ethiopia | 26 | Niger |
| 8 | Somalia | 27 | Ghana |
| 9 | Kenya | 28 | Burkina Faso |
| 10 | Uganda | 29 | Guinea |
| 11 | Tanzania | 30 | Senegal |
| 12 | Zambia | 31 | Mauritania |
| 13 | Mozambique | 32 | Mali |
| 14 | Madagascar | 33 | Nigeria |
| 15 | Zimbabwe | 34 | Chad |
| 16 | South Africa | 35 | Western Sahara |
| 17 | Botswana | 36 | Morocco |
| 18 | Namibia | 37 | Gabon |
| 19 | Angola | 38 | Algeria |
| | | 39 | Democratic Republic of Congo |

[Turn over]

FIGURE 13 – For use with Question 6



KEY

**Percentage energy consumption
from renewable sources**



0 500 km




| | | | |
|----|------------------------|----|-----------------|
| 1 | Ireland | 22 | Cyprus |
| 2 | UK | 23 | Macedonia |
| 3 | Belgium | 24 | Kosovo |
| 4 | Luxembourg | 25 | Bulgaria |
| 5 | Andorra | 26 | Romania |
| 6 | Spain | 27 | Moldova |
| 7 | Portugal | 28 | Ukraine |
| 8 | Switzerland | 29 | Slovak Republic |
| 9 | Liechtenstein | 30 | Belarus |
| 10 | Slovenia | 31 | Poland |
| 11 | Netherlands | 32 | Czech Republic |
| 12 | Denmark | 33 | Norway |
| 13 | Germany | 34 | Sweden |
| 14 | Italy | 35 | Finland |
| 15 | Bosnia and Herzegovina | 36 | Estonia |
| 16 | Austria | 37 | Latvia |
| 17 | Croatia | 38 | Lithuania |
| 18 | Montenegro | 39 | Iceland |
| 19 | Albania | 40 | France |
| 20 | Serbia | 41 | Hungary |
| 21 | Greece | | |

END OF FIGURES

BLANK PAGE**Copyright information**

For confidentiality purposes, from the November 2015 examination series, acknowledgements of third party copyright material will be published in a separate booklet rather than including them on the examination paper or support materials. This booklet is published after each examination series and is available for free download from www.aqa.org.uk after the live examination series.

Permission to reproduce all copyright material has been applied for. In some cases, efforts to contact copyright-holders may have been unsuccessful and AQA will be happy to rectify any omissions of acknowledgements. If you have any queries please contact the Copyright Team, AQA, Stag Hill House, Guildford, GU2 7XJ.

Copyright © 2018 AQA and its licensors. All rights reserved.

G/KL/Jun18/8035/2/Insert/E3