

MATHEMATICS

9709/42

Paper 4 Mechanics 1 (M1)

October/November 2015

1 hour 15 minutes

Additional Materials: Answer Booklet/Paper
Graph Paper
List of Formulae (MF9)

* 2 6 9 3 7 8 3 0 6 7 *

READ THESE INSTRUCTIONS FIRST

If you have been given an Answer Booklet, follow the instructions on the front cover of the Booklet.

Write your Centre number, candidate number and name on all the work you hand in.

Write in dark blue or black pen.

You may use an HB pencil for any diagrams or graphs.

Do not use staples, paper clips, glue or correction fluid.

DO **NOT** WRITE IN ANY BARCODES.

Answer **all** the questions.

Give non-exact numerical answers correct to 3 significant figures, or 1 decimal place in the case of angles in degrees, unless a different level of accuracy is specified in the question.

Where a numerical value for the acceleration due to gravity is needed, use 10 m s^{-2} .

The use of an electronic calculator is expected, where appropriate.

You are reminded of the need for clear presentation in your answers.

At the end of the examination, fasten all your work securely together.

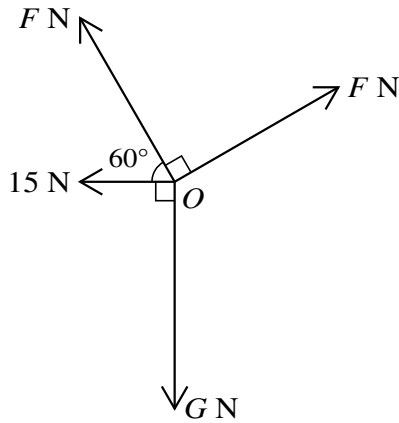
The number of marks is given in brackets [] at the end of each question or part question.

The total number of marks for this paper is 50.

Questions carrying smaller numbers of marks are printed earlier in the paper, and questions carrying larger numbers of marks later in the paper.

This document consists of 4 printed pages.

1



Four horizontal forces act at a point O and are in equilibrium. The magnitudes of the forces are F N, G N, 15 N and F N, and the forces act in directions as shown in the diagram.

(i) Show that $F = 41.0$, correct to 3 significant figures. [3]

(ii) Find the value of G . [2]

2 A particle is released from rest at a point H m above horizontal ground and falls vertically. The particle passes through a point 35 m above the ground with a speed of $(V - 10)$ m s⁻¹ and reaches the ground with a speed of V m s⁻¹. Find

(i) the value of V , [3]

(ii) the value of H . [2]

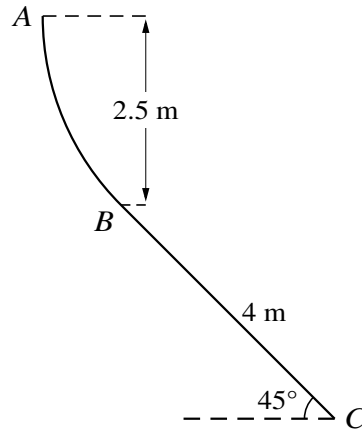
3 A particle P moves along a straight line for 100 s. It starts at a point O and at time t seconds after leaving O the velocity of P is v m s⁻¹, where

$$v = 0.000\,04t^3 - 0.006t^2 + 0.288t.$$

(i) Find the values of t at which the acceleration of P is zero. [3]

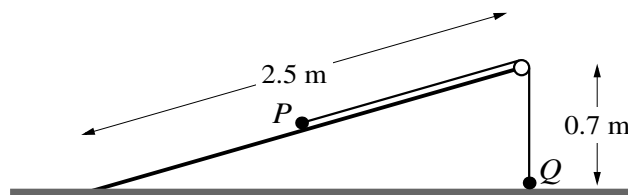
(ii) Find the displacement of P from O when $t = 100$. [3]

4



The diagram shows a vertical cross-section ABC of a surface. The part of the surface containing AB is smooth and A is 2.5 m above the level of B . The part of the surface containing BC is rough and is at 45° to the horizontal. The distance BC is 4 m (see diagram). A particle P of mass 0.2 kg is released from rest at A and moves in contact with the curve AB and then with the straight line BC . The coefficient of friction between P and the part of the surface containing BC is 0.4. Find the speed with which P reaches C . [6]

5



A smooth inclined plane of length 2.5 m is fixed with one end on the horizontal floor and the other end at a height of 0.7 m above the floor. Particles P and Q , of masses 0.5 kg and 0.1 kg respectively, are attached to the ends of a light inextensible string which passes over a small smooth pulley fixed at the top of the plane. Particle Q is held at rest on the floor vertically below the pulley. The string is taut and P is at rest on the plane (see diagram). Q is released and starts to move vertically upwards towards the pulley and P moves down the plane.

- (i) Find the tension in the string and the magnitude of the acceleration of the particles before Q reaches the pulley. [5]

At the instant just before Q reaches the pulley the string breaks; P continues to move down the plane and reaches the floor with a speed of 2 m s^{-1} .

- (ii) Find the length of the string. [3]

[Questions 6 and 7 are printed on the next page.]

6

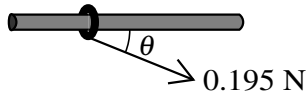


Fig. 1

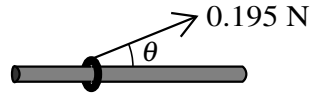


Fig. 2

A small ring of mass 0.024 kg is threaded on a fixed rough horizontal rod. A light inextensible string is attached to the ring and the string is pulled with a force of magnitude 0.195 N at an angle of θ with the horizontal, where $\sin \theta = \frac{5}{13}$. When the angle θ is below the horizontal (see Fig. 1) the ring is in limiting equilibrium.

- (i) Find the coefficient of friction between the ring and the rod. [6]

When the angle θ is above the horizontal (see Fig. 2) the ring moves.

- (ii) Find the acceleration of the ring. [4]

- 7 A car of mass 1600 kg moves with constant power 14 kW as it travels along a straight horizontal road. The car takes 25 s to travel between two points A and B on the road.

- (i) Find the work done by the car's engine while the car travels from A to B . [2]

The resistance to the car's motion is constant and equal to 235 N . The car has accelerations at A and B of 0.5 m s^{-2} and 0.25 m s^{-2} respectively. Find

- (ii) the gain in kinetic energy by the car in moving from A to B , [5]
 (iii) the distance AB . [3]

Permission to reproduce items where third-party owned material protected by copyright is included has been sought and cleared where possible. Every reasonable effort has been made by the publisher (UCLES) to trace copyright holders, but if any items requiring clearance have unwittingly been included, the publisher will be pleased to make amends at the earliest possible opportunity.

To avoid the issue of disclosure of answer-related information to candidates, all copyright acknowledgements are reproduced online in the Cambridge International Examinations Copyright Acknowledgements Booklet. This is produced for each series of examinations and is freely available to download at www.cie.org.uk after the live examination series.

Cambridge International Examinations is part of the Cambridge Assessment Group. Cambridge Assessment is the brand name of University of Cambridge Local Examinations Syndicate (UCLES), which is itself a department of the University of Cambridge.