



Cambridge O Level

CANDIDATE
NAME


--

CENTRE
NUMBER

--	--	--	--	--

CANDIDATE
NUMBER

--	--	--	--



MATHEMATICS (SYLLABUS D)

4024/11

Paper 1

October/November 2021

2 hours

You must answer on the question paper.

You will need: Geometrical instruments

INSTRUCTIONS

- Answer **all** questions.
- Use a black or dark blue pen. You may use an HB pencil for any diagrams or graphs.
- Write your name, centre number and candidate number in the boxes at the top of the page.
- Write your answer to each question in the space provided.
- Do **not** use an erasable pen or correction fluid.
- Do **not** write on any bar codes.
- Calculators must **not** be used in this paper.
- You may use tracing paper.
- You must show all necessary working clearly.

INFORMATION

- The total mark for this paper is 80.
- The number of marks for each question or part question is shown in brackets [].

This document has **20** pages. Any blank pages are indicated.

ELECTRONIC CALCULATORS MUST NOT BE USED IN THIS PAPER

1 (a) Work out $\frac{7}{8} - \frac{1}{4}$.

..... [1]

(b) Work out 0.08×0.2 .

..... [1]

2 Write these numbers in order of size, starting with the smallest.

$\frac{3}{4}$

0.83

$\frac{17}{20}$

82%


0.8

.....,,,, [2]
smallest

3 Work out 45% of 30.

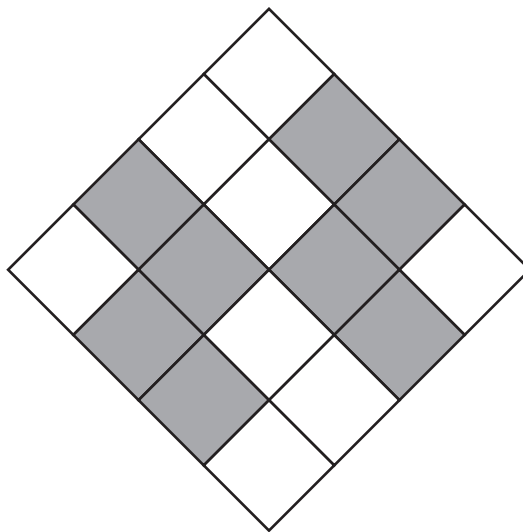
..... [2]

- 4 (a) Shade **one** more small square so the diagram has rotational symmetry of order 4.



[1]

- (b) Shade **two** more small squares so the diagram has 2 lines of symmetry.



[1]

- 5 Simplify $3a - a + 2a$.

..... [1]

6 ABC is a triangle with $AC = 5$ cm and $BC = 7$ cm.

- (a) **Using ruler and compasses only**, construct triangle ABC .
Side AB has been drawn for you.



- [2]
- (b) **Using a straight edge and compasses only**, construct the perpendicular bisector of AB . [2]
- (c) A point W lies inside triangle ABC .
The point W is closer to A than to B . [1]
- On your diagram, shade the region in which W lies. [1]

7 (a) Evaluate 4^0 .

..... [1]

(b) Simplify $m^3 \times m^5$.

..... [1]

8 (a) Write 6300 m in kilometres.

..... km [1]

(b) Convert 1 cm^2 to mm^2 .

..... mm^2 [1]

- 9 The interior angle of a regular polygon is 156° .

Find the number of sides of this regular polygon.

..... [2]

- 10 A triangle has one angle of 55° .
The other two angles in the triangle are in the ratio 3 : 2 .

Calculate the size of the smallest angle in the triangle.

..... [3]

- 11 By writing each number correct to 1 significant figure, estimate the value of

$$\frac{58.24}{32.5 \times 0.126}$$

..... [2]

- 12 Solve the simultaneous equations.
Show all your working.

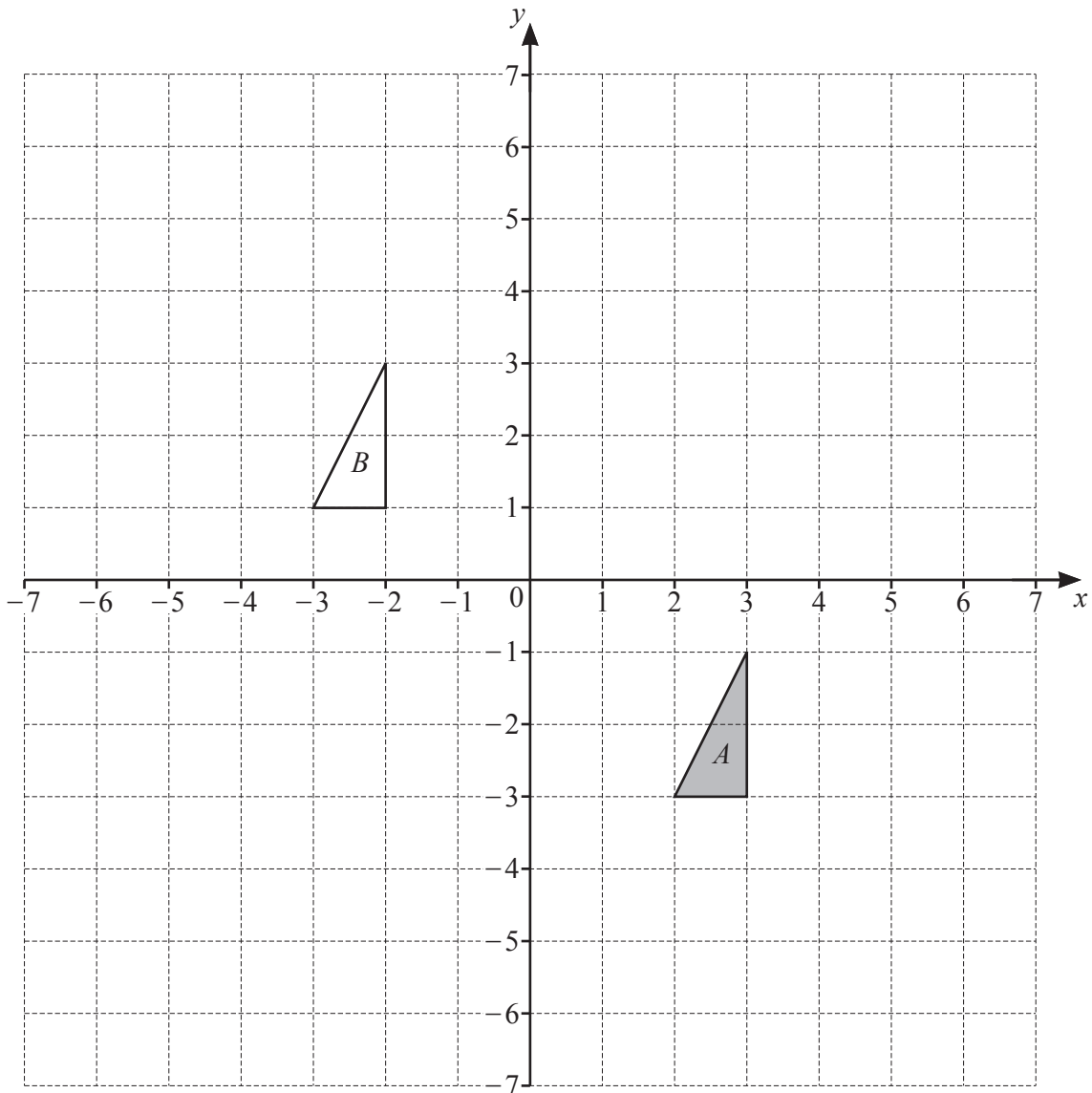
$$2x - y = 12$$

$$7x + 3y = 29$$

$x =$

$y =$ [3]

13 The diagram shows triangle A and triangle B .



(a) Describe fully the **single** transformation that maps triangle A onto triangle B .

.....
 [2]

(b) Triangle A is mapped onto triangle C by an enlargement, centre $(0, -1)$ and scale factor 2.

Draw triangle C . [2]

14 (a) Express 60 as the product of its prime factors.

..... [2]

- (b) A school buys packs of pens and packs of rulers.
There are 60 pens in each pack of pens.
There are 42 rulers in each pack of rulers.

The school wants to buy exactly the same number of pens and rulers.

Work out the smallest number of each pack the school should buy.

..... packs of pens

..... packs of rulers [3]

15 The point A has position vector $\begin{pmatrix} 3 \\ -7 \end{pmatrix}$ and $\vec{AB} = \begin{pmatrix} -5 \\ 12 \end{pmatrix}$.

(a) Find the coordinates of point B .

(..... ,) [2]

(b) Find $|\vec{AB}|$.

$|\vec{AB}| = \dots\dots\dots$ units [2]

- 16 A 4-sided spinner numbered 1 to 4 is spun many times.
The table shows the results of the spins.

Number	Frequency
1	6
2	5
3	13
4	p

- (a) The mean of the results is 3.

Calculate the value of p .

$$p = \dots\dots\dots [3]$$

- (b) Find the relative frequency of the spinner landing on 2.

$$\dots\dots\dots [1]$$

17 (a) Factorise.

$$4b^2 - c^2$$

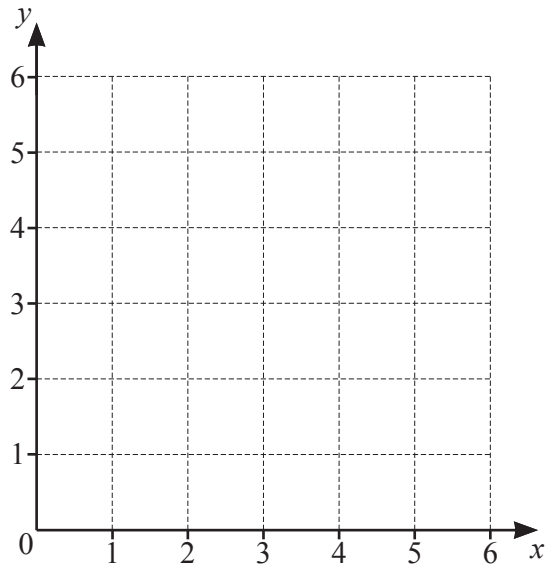
..... [1]

(b) Factorise.

$$x^2 + 5x - 6$$

..... [2]

18



The region R is defined by these inequalities.

$$\begin{aligned}1 &\leq x \leq 5 \\ 0 &\leq y \leq 4 \\ y &\geq 3 - x\end{aligned}$$

Find and label region R .

[4]

- 19 (a) $\mathcal{E} = \{1, 2, 3, 4, 5, 6, 7, 8, 9, 10, 11, 12\}$
 $X = \{2, 3, 5, 7, 11\}$
 $Y = \{1, 2, 3, 4, 5, 6\}$

(i) Find $X \cap Y$.

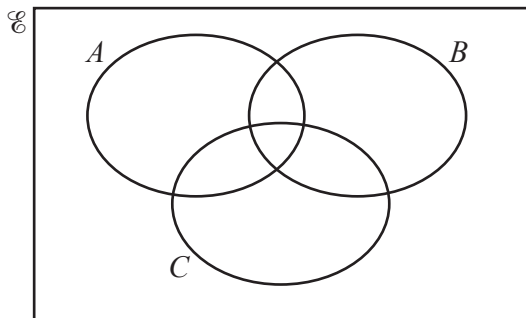
{.....} [1]

(ii) A number, k , is chosen at random from \mathcal{E} .

Find the probability that $k \notin (X \cup Y)$.

..... [1]

(b) On the Venn diagram, shade the set $A \cap (B \cup C)'$.



[1]

20 These are the first five terms of a sequence.

4 8 16 32 64

(a) Find the next number in the sequence.

..... [1]

(b) The n th term of the sequence above is 2^{n+1} .

Write down an expression, in terms of n , for the n th term of these sequences.

(i) 1 5 13 29 61 ...

..... [1]

(ii) 10 19 32 53 90 ...

..... [2]

21 $f(x) = \frac{6}{2-x}$

(a) Find $f(-1)$.

..... [1]

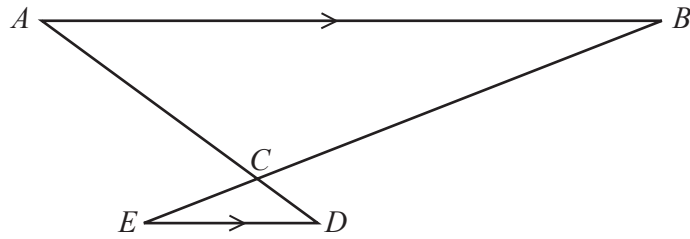
(b) Find $f^{-1}(x)$.

$f^{-1}(x) =$ [3]

(c) $f(t) = f(5t+2)$

Find the value of t .

$t =$ [3]



NOT TO SCALE

ACD and BCE are straight lines.
 AB is parallel to ED .

- (a) Prove that triangle ABC is similar to triangle DEC .
 Give a reason for each statement that you make.

.....

.....

.....

..... [3]

- (b) $AB = 6$ cm and $ED = 2$ cm.
 The area of triangle ABC is 45 cm².

Calculate the area of triangle DEC .

..... cm² [2]

23 (a) Expand and simplify.

$$(x+5)(x-2)$$

..... [2]

(b) Write as a single fraction in its simplest form.

$$\frac{3}{x-4} + \frac{2}{x+5}$$

..... [3]

24 (a) $\mathbf{A} = \begin{pmatrix} -6 & 2 \\ 1 & 4 \end{pmatrix}$
Find \mathbf{A}^2 .

$$\begin{pmatrix} & \\ & \end{pmatrix} [2]$$

(b) $\mathbf{B} = \begin{pmatrix} x & -5 \\ 2 & -3 \end{pmatrix}$

Find the value of x when $|\mathbf{B}| = -2$.

$$x = \dots\dots\dots [2]$$

BLANK PAGE

Permission to reproduce items where third-party owned material protected by copyright is included has been sought and cleared where possible. Every reasonable effort has been made by the publisher (UCLES) to trace copyright holders, but if any items requiring clearance have unwittingly been included, the publisher will be pleased to make amends at the earliest possible opportunity.

To avoid the issue of disclosure of answer-related information to candidates, all copyright acknowledgements are reproduced online in the Cambridge Assessment International Education Copyright Acknowledgements Booklet. This is produced for each series of examinations and is freely available to download at www.cambridgeinternational.org after the live examination series.

Cambridge Assessment International Education is part of the Cambridge Assessment Group. Cambridge Assessment is the brand name of the University of Cambridge Local Examinations Syndicate (UCLES), which itself is a department of the University of Cambridge.