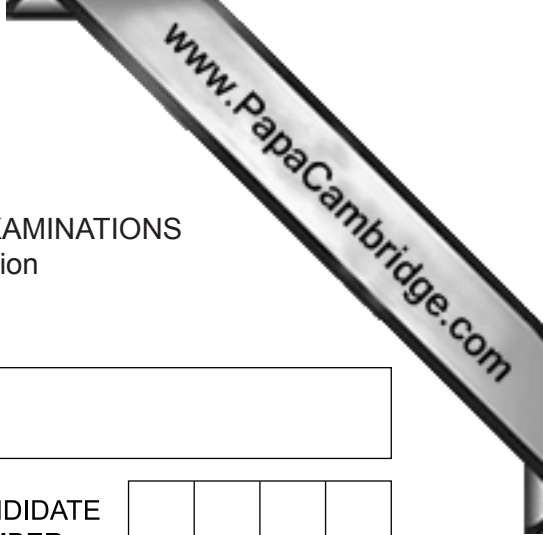




UNIVERSITY OF CAMBRIDGE INTERNATIONAL EXAMINATIONS  
International General Certificate of Secondary Education



CANDIDATE  
NAME

CENTER  
NUMBER

--	--	--	--	--

CANDIDATE  
NUMBER

--	--	--	--



**CHEMISTRY (US)**

**0439/33**

Paper 3 (Extended)

**May/June 2013**

**1 hour 15 minutes**

Candidates answer on the Question Paper.

No Additional Materials are required.

**READ THESE INSTRUCTIONS FIRST**

Write your Center number, candidate number and name on all the work you hand in.  
Write in dark blue or black pen.  
You may use a pencil for any diagrams, graphs or rough working.  
Do not use staples, paper clips, highlighters, glue or correction fluid.  
DO **NOT** WRITE IN ANY BARCODES.

Answer **all** questions.  
Electronic calculators may be used.  
A copy of the Periodic Table is printed on page 12.  
You may lose marks if you do not show your working or if you do not use appropriate units.

At the end of the examination, fasten all your work securely together.  
The number of marks is given in brackets [ ] at the end of each question or part question.

This document consists of **11** printed pages and **1** blank page.



1 Substances can be classified as:

elements      mixtures      compounds

Elements can be divided into:

metals      non-metals

(a) Define each of the following terms.

(i) *element*

.....  
..... [2]

(ii) *compound*

.....  
..... [2]

(iii) *mixture*

.....  
..... [1]

(b) Classify each of the following as either an element, compound or mixture.

(i) brass ..... [1]

(ii) carbon dioxide ..... [1]

(iii) copper ..... [1]

(c) Which physical property is used to distinguish between metals and non-metals?

It is possessed by all metals but by only one non-metal.

..... [1]

[Total: 9]

2 One of the factors which determine the reaction rate of solids is particle size.

(a) A mixture of finely powdered aluminum and air may explode when ignited. An explosion is a very fast exothermic reaction. This causes a large and sudden increase in temperature.

Explain each of the following in terms of collisions between reacting particles.

(i) Why is the reaction between finely powdered aluminum and air very fast?

.....  
..... [2]

(ii) Explain why for most reactions the rate of reaction decreases with time.

.....  
..... [2]

(iii) Suggest an explanation why the rate of reaction in an explosion could increase rather than decrease with time.

.....  
.....  
..... [3]

(b) (i) Give another example of a substance other than a metal which, when finely powdered, might explode when ignited in air.

..... [1]

(ii) Describe a simple test-tube reaction which shows the effect of particle size on the rate at which a solid reacts with a solution.

.....  
.....  
..... [3]

[Total: 11]

3 Iron from the blast furnace is impure. It contains 5% of impurities, mainly carbon, silicon and phosphorus. Almost all of this impure iron is converted into the alloy, mild steel.

(a) (i) State a use of mild steel.

..... [1]

(ii) Name and give a use of another iron-containing alloy.

name .....

use ..... [2]

(b) The oxides of carbon and sulfur are gases. The oxides of silicon and phosphorus are not. Explain how these impurities are removed from the impure iron when it is converted into mild steel.

.....  
 .....  
 .....  
 .....  
 ..... [5]

[Total: 8]

4 Germanium is an element in Group IV. The electron distribution of a germanium atom is 2 + 8 + 18 + 4. It has oxidation states of +2 and +4.

(a) Germanium forms a series of saturated hydrides similar to the alkanes.

(i) Draw the structural formula of the hydride which contains three germanium atoms per molecule.

[1]

(ii) Predict the general formula of the germanium hydrides.

..... [1]

- (b) Draw a diagram showing the arrangement of the valency electrons in one molecule of the covalent compound germanium(IV) chloride,  $\text{GeCl}_4$ .

Use o to represent an electron from a chlorine atom.  
Use x to represent an electron from a germanium atom.

[2]

- (c) Describe the structure of the giant covalent compound germanium(IV) oxide,  $\text{GeO}_2$ . It has a similar structure to that of silicon(IV) oxide.

.....  
.....  
..... [3]

- (d) Is the change  $\text{GeCl}_2$  to  $\text{GeCl}_4$  reduction, oxidation or neither? Give a reason for your choice.

.....  
..... [2]

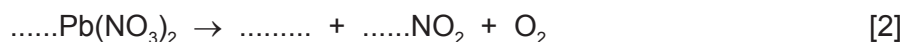
[Total: 9]

- 5 All metal nitrates decompose when heated. A few form a nitrite and oxygen. Most form the metal oxide, oxygen and a brown gas called nitrogen dioxide.

- (a) (i) Name a metal whose nitrate decomposes to form the metal nitrite and oxygen.

..... [1]

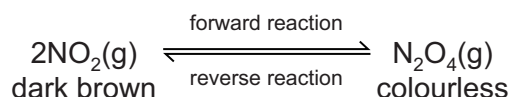
- (ii) Complete the equation for the action of heat on lead(II) nitrate.



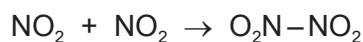
- (iii) Suggest why the nitrate of the metal, named in (a)(i), decomposes less readily than lead(II) nitrate.

.....  
..... [2]

- (b) Almost all samples of nitrogen dioxide are an equilibrium mixture of nitrogen dioxide,  $\text{NO}_2$ , and dinitrogen tetroxide,  $\text{N}_2\text{O}_4$ .



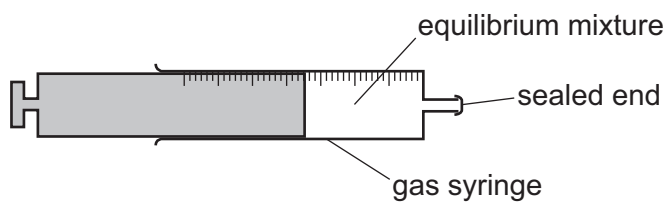
In the forward reaction, a bond forms between the two nitrogen dioxide molecules.



- (i) Explain the term *equilibrium mixture*.

.....  
 ..... [1]

- (ii) The syringe contains a sample of the equilibrium mixture. The plunger was pulled back reducing the pressure.  
 How would the color of the gas inside the syringe change? Give an explanation for your answer.



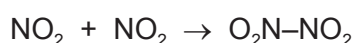
.....  
 .....  
 ..... [3]

- (iii) A sealed tube containing an equilibrium mixture of nitrogen dioxide and dinitrogen tetroxide was placed in a beaker of ice cold water.  
 The color of the mixture changed from brown to pale yellow.

Is the forward reaction exothermic or endothermic? Give an explanation for your choice.

.....  
 ..... [2]

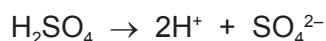
- (iv) What other piece of information given in the equation supports your answer to (iii)?



..... [1]

[Total: 12]

- 6 Sulfuric acid and malonic acid are both dibasic acids. One mole of a dibasic acid can react with two moles of hydrogen ions.



Dibasic acids can form salts of the type  $\text{Na}_2\text{X}$  and  $\text{CaX}$ .

- (a) Malonic acid is a white crystalline solid which is soluble in water. It melts at  $135^\circ\text{C}$ . The structural formula of malonic acid is given below. It forms salts called malonates.



- (i) How could you determine if a sample of malonic acid is pure?

technique used .....

result if pure ..... [2]

- (ii) What is the molecular formula of malonic acid?

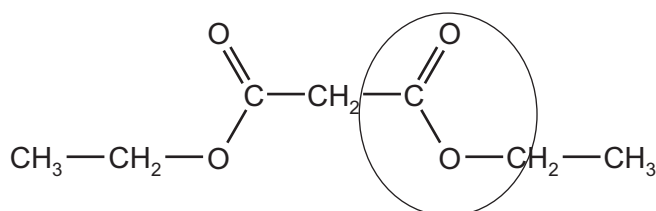
..... [1]

- (iii) When malonic acid is heated there are two products, carbon dioxide and a simpler carboxylic acid. Deduce the name and molecular formula of this acid.

.....

..... [2]

- (iv) Malonic acid reacts with ethanol to form a colorless liquid which has a 'fruity' smell. Its structural formula is given below.



What type of compound contains the group which is circled?

..... [1]

- (b) (i) Suggest why a solution of malonic acid, concentration  $0.2 \text{ mol/dm}^3$ , has a higher pH than one of sulfuric acid of the same concentration.


..... [1]

- (ii) Describe a test, other than measuring pH, which can be carried out on both acid solutions to confirm the explanation given in (b)(i) for the different pH values of the two acids.

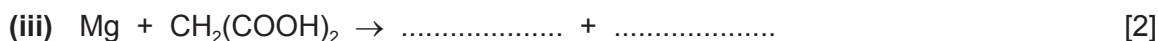

.....

..... [2]

- (c) Complete the following equations for reactions of these two acids.



.....



[Total: 16]

- 7 Alkanes and alkenes are both series of hydrocarbons.

- (a) (i) Explain the term *hydrocarbon*.

.....

..... [1]

- (ii) What is the difference between these two series of hydrocarbons?

.....

..... [2]

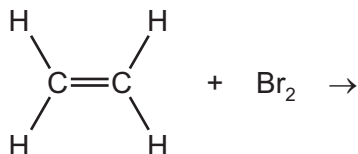
- (b) Alkenes and simpler alkanes are made from long-chain alkanes by cracking. Complete the following equation for the cracking of the alkane  $\text{C}_{20}\text{H}_{42}$ .





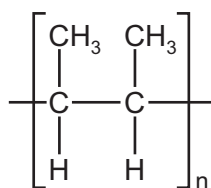
- (c) Alkenes such as butene and ethene are more reactive than alkanes. Alkenes are used in the petrochemical industry to make a range of products, which includes polymers and alcohols.

- (i) Dibromoethane is used as a pesticide. Complete the equation for its preparation from ethene.



[1]

- (ii) The structural formula of a poly(alkene) is given below.



Deduce the structural formula of its monomer.

[2]

- (iii) How is butanol made from butene,  $\text{CH}_3-\text{CH}_2-\text{CH}=\text{CH}_2$ ? Include an equation in your answer.

.....

..... [2]

- (iv) Cracking changes alkanes into alkenes. How could an alkene be converted into an alkane? Include an equation in your answer.

.....

..... [2]

(d) 20 cm<sup>3</sup> of a hydrocarbon was burnt in 175 cm<sup>3</sup> of oxygen. After cooling, the volume of the remaining gases was 125 cm<sup>3</sup>. The addition of aqueous sodium hydroxide removed carbon dioxide leaving 25 cm<sup>3</sup> of unreacted oxygen.

(i) volume of oxygen used = ..... cm<sup>3</sup> [1]

(ii) volume of carbon dioxide formed = ..... cm<sup>3</sup> [1]

(iii) Deduce the formula of the hydrocarbon and the balanced equation for the reaction.

.....  
.....  
.....  
..... [2]

[Total: 15]



**DATA SHEET**  
**The Periodic Table of the Elements**

		Group																	
I	II	III	IV	V	VI	VII	0												
		1 <b>H</b> Hydrogen 1					4 <b>He</b> Helium 2												
7 <b>Li</b> Lithium 3	9 <b>Be</b> Beryllium 4		12 <b>C</b> Carbon 6	14 <b>N</b> Nitrogen 7	16 <b>O</b> Oxygen 8	19 <b>F</b> Fluorine 9	20 <b>Ne</b> Neon 10												
23 <b>Na</b> Sodium 11	24 <b>Mg</b> Magnesium 12	27 <b>Al</b> Aluminium 13	28 <b>Si</b> Silicon 14	31 <b>P</b> Phosphorus 15	32 <b>S</b> Sulfur 16	35.5 <b>Cl</b> Chlorine 17	40 <b>Ar</b> Argon 18												
39 <b>K</b> Potassium 19	40 <b>Ca</b> Calcium 20	45 <b>Sc</b> Scandium 21	48 <b>Ti</b> Titanium 22	51 <b>V</b> Vanadium 23	52 <b>Cr</b> Chromium 24	55 <b>Mn</b> Manganese 25	56 <b>Fe</b> Iron 26	59 <b>Co</b> Cobalt 27	59 <b>Ni</b> Nickel 28	64 <b>Cu</b> Copper 29	65 <b>Zn</b> Zinc 30	70 <b>Ga</b> Gallium 31	73 <b>Ge</b> Germanium 32	75 <b>As</b> Arsenic 33	79 <b>Se</b> Selenium 34	80 <b>Br</b> Bromine 35	84 <b>Kr</b> Krypton 36		
85 <b>Rb</b> Rubidium 37	88 <b>Sr</b> Strontium 38	89 <b>Y</b> Yttrium 39	91 <b>Zr</b> Zirconium 40	93 <b>Nb</b> Niobium 41	96 <b>Mo</b> Molybdenum 42	101 <b>Ru</b> Ruthenium 44	101 <b>Rh</b> Rhodium 45	103 <b>Rh</b> Rhodium 45	106 <b>Pd</b> Palladium 46	108 <b>Ag</b> Silver 47	112 <b>Cd</b> Cadmium 48	115 <b>In</b> Indium 49	119 <b>Sn</b> Tin 50	122 <b>Sb</b> Antimony 51	128 <b>Te</b> Tellurium 52	127 <b>I</b> Iodine 53	131 <b>Xe</b> Xenon 54		
133 <b>Cs</b> Caesium 55	137 <b>Ba</b> Barium 56	139 <b>La</b> Lanthanum 57	178 <b>Hf</b> Hafnium * 72	181 <b>Ta</b> Tantalum 73	184 <b>W</b> Tungsten 74	190 <b>Os</b> Osmium 76	192 <b>Ir</b> Iridium 77	195 <b>Pt</b> Platinum 78	197 <b>Au</b> Gold 79	201 <b>Hg</b> Mercury 80	204 <b>Tl</b> Thallium 81	207 <b>Pb</b> Lead 82	209 <b>Bi</b> Bismuth 83	212 <b>Po</b> Polonium 84	210 <b>At</b> Astatine 85	222 <b>Rn</b> Radon 86			
87 <b>Fr</b> Francium	226 <b>Ra</b> Radium	227 <b>Ac</b> Actinium †																	

140 <b>Ce</b> Cerium 58	141 <b>Pr</b> Praseodymium 59	144 <b>Nd</b> Neodymium 60	150 <b>Sm</b> Samarium 62	152 <b>Eu</b> Europium 63	157 <b>Gd</b> Gadolinium 64	162 <b>Dy</b> Dysprosium 66	165 <b>Ho</b> Holmium 67	167 <b>Er</b> Erbium 68	169 <b>Tm</b> Thulium 69	173 <b>Yb</b> Ytterbium 70	175 <b>Lu</b> Lutetium 71	
232 <b>Th</b> Thorium 90	238 <b>U</b> Uranium 92	238 <b>Pa</b> Protactinium 91	238 <b>Pu</b> Plutonium 94	238 <b>Am</b> Americium 95	238 <b>Cm</b> Curium 96	238 <b>Bk</b> Berkelium 97	238 <b>Cf</b> Californium 98	238 <b>Es</b> Einsteinium 99	238 <b>Fm</b> Fermium 100	238 <b>Md</b> Mendelevium 101	238 <b>No</b> Nobelium 102	238 <b>Lr</b> Lawrencium 103

\*58-71 Lanthanoid series  
†90-103 Actinoid series

Key

a      X      b

a = relative atomic mass  
X = atomic symbol  
b = proton (atomic) number

The volume of one mole of any gas is 24 dm<sup>3</sup> at room temperature and pressure (r.t.p.).

Permission to reproduce items where third-party owned material protected by copyright is included has been sought and cleared where possible. Every reasonable effort has been made by the publisher (UCLES) to trace copyright holders, but if any items requiring clearance have unwittingly been included the publisher will be pleased to make amends at the earliest possible opportunity.

University of Cambridge International Examinations is part of the Cambridge Assessment Group. Cambridge Assessment is the brand name of University of Cambridge Local Examinations Syndicate (UCLES), which is itself a department of the University of Cambridge.