



UNIVERSITY OF CAMBRIDGE INTERNATIONAL EXAMINATIONS
International General Certificate of Secondary Education

CANDIDATE
NAME

CENTRE
NUMBER

--	--	--	--	--

CANDIDATE
NUMBER

--	--	--	--



CHEMISTRY

0620/32

Paper 3 (Extended)

October/November 2013

1 hour 15 minutes

Candidates answer on the Question Paper.

No Additional Materials are required.

READ THESE INSTRUCTIONS FIRST

Write your Centre number, candidate number and name on all the work you hand in.

Write in dark blue or black pen.

You may use a pencil for any diagrams, graphs or rough working.

Do not use staples, paper clips, highlighters, glue or correction fluid.

DO **NOT** WRITE IN ANY BARCODES.

Answer **all** questions.

Electronic calculators may be used.

A copy of the Periodic Table is printed on page 16.

You may lose marks if you do not show your working or if you do not use appropriate units.

At the end of the examination, fasten all your work securely together.

The number of marks is given in brackets [] at the end of each question or part question.

This document consists of **14** printed pages and **2** blank pages.



- 1 The table gives the melting points, the boiling points and the electrical properties of substances A to F.

substance	melting point /°C	boiling point /°C	electrical conductivity as a solid	electrical conductivity as a liquid
A	-210	-196	does not conduct	does not conduct
B	777	1627	does not conduct	good conductor
C	962	2212	good conductor	good conductor
D	-94	63	does not conduct	does not conduct
E	1410	2355	does not conduct	does not conduct
F	1064	2807	good conductor	good conductor

- (a) Which **two** substances could be metals? [1]
- (b) Which substance could be nitrogen? [1]
- (c) Which substance is an ionic solid? [1]
- (d) Which substance is a liquid at room temperature? [1]
- (e) Which substance has a giant covalent structure similar to that of diamond? [1]
- (f) Which **two** substances could exist as simple covalent molecules? [1]

[Total: 6]

2 The halogens are a collection of diatomic non-metals in Group VII.

(a) (i) Define the term *diatomic*.

..... [1]

(ii) What do the electron distributions of the halogens have in common?

..... [1]

(iii) How do their electron distributions differ?

..... [1]

(iv) Complete the table.

halogen	solid, liquid or gas at room temperature	colour
chlorine
bromine
iodine

[2]

(b) The halogens react with other non-metals to form covalent compounds.

Draw a diagram which shows the arrangement of the valency electrons in one molecule of the covalent compound arsenic trifluoride.

The electron distribution of an arsenic atom is $2 + 8 + 18 + 5$.

Use x to represent an electron from an arsenic atom.

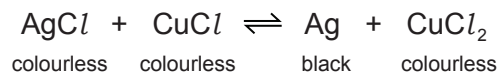
Use o to represent an electron from a fluorine atom.

[3]

- (c) Photochromic glass is used in sunglasses. In bright light, the glass darkens reducing the amount of light reaching the eye. When the light is less bright, the glass becomes colourless increasing the amount of light reaching the eye.

Photochromic glass contains very small amounts of the halides silver(I) chloride and copper(I) chloride.

The reaction between these two chlorides is photochemical.



How does photochromic glass work?

.....

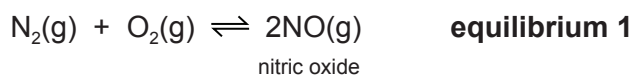
.....

..... [3]

[Total: 11]

- 3 (a) Nitric acid is now made by the oxidation of ammonia. It used to be made from water. This process used very large amounts of electricity.

Air was blown through an electric arc and heated to 3000 °C.



The equilibrium mixture leaving the arc contained 5% of nitric oxide. This mixture was cooled rapidly. At lower temperatures, nitric oxide will react with oxygen to form nitrogen dioxide.



Nitrogen dioxide reacts with oxygen and water to form nitric acid.

- (i) Suggest a reason why the yield of nitric oxide in **equilibrium 1** increases with temperature.

..... [1]

- (ii) What effect, if any, would increasing the pressure have on the percentage of nitric oxide in **equilibrium 1**? Explain your answer.

..... [2]

- (iii) Deduce why **equilibrium 2** is only carried out at lower temperatures.

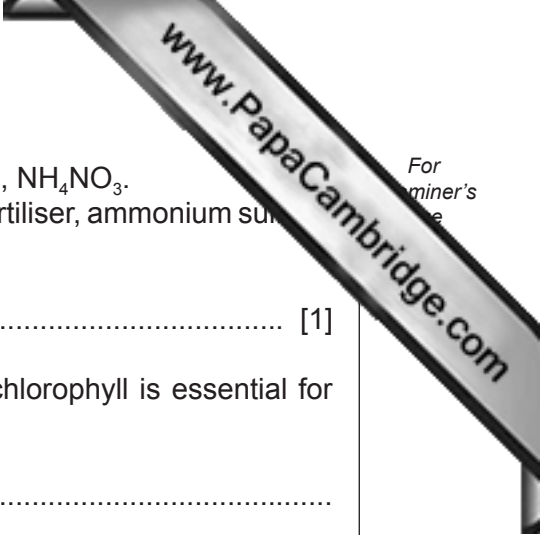
..... [2]

- (iv) Complete the equation for the reaction between nitrogen dioxide, water and oxygen to form nitric acid.



- (v) Ammonia is more expensive than water and air. Suggest a reason why the ammonia-based process is preferred to the electric arc process.

..... [1]



For
aminer's
e

(b) (i) Nitric acid is used to make the fertiliser ammonium nitrate, NH_4NO_3 .
What advantage has this fertiliser over another common fertiliser, ammonium sulphate, $(\text{NH}_4)_2\text{SO}_4$?

..... [1]

(ii) Plants need nitrogen to make chlorophyll. Explain why chlorophyll is essential for plant growth.

.....
.....
.....
.....
.....
..... [4]

[Total: 13]

4 For centuries, iron has been extracted from its ore in the blast furnace. The world production of pig iron is measured in hundreds of million tonnes annually.

(a) The following raw materials are supplied to a modern blast furnace.

- iron ore which is hematite, Fe_2O_3
- limestone which is calcium carbonate
- carbon in the form of coke
- air

Describe the essential reactions in the blast furnace. Each of the four raw materials must be mentioned at least once. Give the equation for the reduction of hematite.

.....
.....
.....
.....
.....
.....
.....
.....
.....
.....

[6]

(b) Each year, blast furnaces discharge millions of tonnes of carbon dioxide into the atmosphere. This will increase the percentage of atmospheric carbon dioxide.

(i) Explain why this increased percentage of carbon dioxide may cause problems in the future.

.....
.....

[2]

(ii) Until the early eighteenth century, charcoal, not coke, was used in the blast furnace. Charcoal is made from wood but coke is made from coal. Explain why the use of charcoal would have a smaller effect on the level of atmospheric carbon dioxide.

.....
.....
.....


[2]

- (iii) A method being developed to produce iron with lower emissions of carbon is by electrolysis. Hematite, Fe_2O_3 , is dissolved in molten lithium carbonate electrolysed. The ore is spilt into its constituent elements.

Write an equation for the reaction at the negative electrode (cathode).

.....

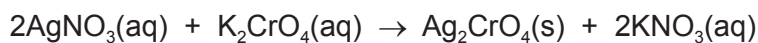
Complete the equation for the reaction at the positive electrode (anode).



[3]

[Total: 13]

5 Silver(I) chromate(VI) is an insoluble salt. It is prepared by precipitation. 20 cm³ of aqueous silver(I) nitrate, concentration 0.2 mol/dm³, was mixed with 20 cm³ of aqueous potassium chromate(VI), concentration 0.1 mol/dm³. After stirring, the mixture was filtered. The precipitate was washed several times with distilled water. The precipitate was then left in a warm oven for several hours.



(a) What difficulty arises if the name of a compound of a transition element does not include its oxidation state, for example iron oxide?

.....
..... [2]

(b) These questions refer to the preparation of the salt.

(i) Why is it necessary to filter the mixture after mixing and stirring?

..... [1]

(ii) What is the purpose of washing the precipitate?

..... [1]

(iii) Why leave the precipitate in a warm oven?

..... [1]

(c) (i) Explain why the concentrations of silver(I) nitrate and potassium chromate(VI) are different.

..... [1]

(ii) What mass of silver(I) nitrate is needed to prepare 100 cm³ of silver(I) nitrate solution, concentration 0.2 mol/dm³?

The mass of one mole of AgNO₃ is 170 g.

.....
..... [2]

(iii) What is the maximum mass of silver(I) chromate(VI) which could be obtained from 20 cm³ of aqueous silver(I) nitrate, concentration 0.2 mol/dm³?

number of moles of AgNO₃ used = [1]

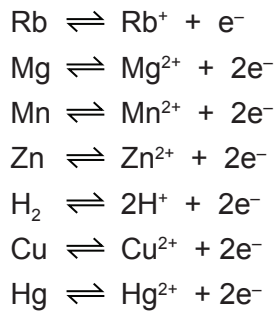
number of moles of Ag₂CrO₄ formed = [1]

mass of one mole of Ag₂CrO₄ = 332 g

mass of Ag₂CrO₄ formed = g [1]

[Total: 11]

6 The following reactivity series shows both familiar and unfamiliar elements in order of decreasing reactivity. Each element is represented by a redox equation.



Two of the uses of the series are to predict the thermal stability of compounds of the metals and to explain their redox reactions.

(a) Most metal hydroxides decompose when heated.

(i) Complete the equation for the thermal decomposition of copper(II) hydroxide.



(ii) Choose a metal from the above series whose hydroxide does not decompose when heated.

..... [1]

(b) (i) Define in terms of electron transfer the term *oxidation*.

..... [1]

(ii) Explain why the positive ions in the above equations are oxidising agents.

..... [1]

(c) (i) Which metals in the series above do not react with dilute acids to form hydrogen?

..... [1]

(ii) Describe an experiment which would confirm the prediction made in (c)(i).

..... [1]

(d) (i) Which metal in the series above can form a negative ion which gives a pink/purple solution in water?

..... [1]

(ii) Describe what you would observe when zinc, a reducing agent, is added to this pink/purple solution.

..... [1]

[Total: 8]

7 Plants can make complex molecules from simple starting materials, such as water, dioxide and nitrates. Substances produced by plants include sugars, more complex carbohydrates, esters, proteins, vegetable oils and fats.

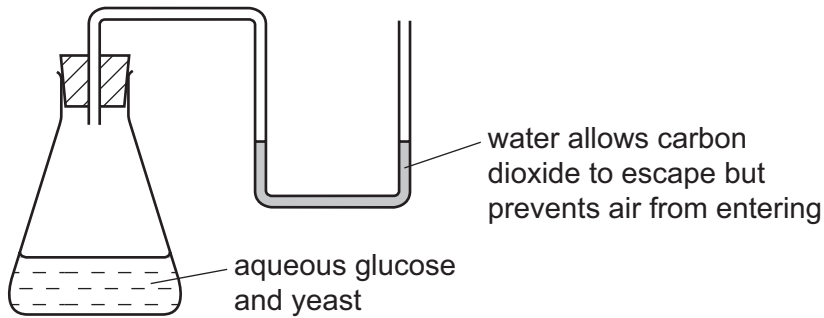
(a) (i) Describe how you could decide from its molecular formula whether a compound is a carbohydrate.

.....
..... [2]

(ii) Plants can change the sugar, glucose, into starch which is a more complex carbohydrate. What type of reaction is this?

..... [2]


(b) The fermentation of glucose can be carried out in the apparatus shown below. After a few days the reaction stops. A 12% aqueous solution of ethanol has been produced.



(i) The enzyme, zymase, catalyses the anaerobic respiration of the yeast. Explain the term *respiration*.

.....
..... [2]

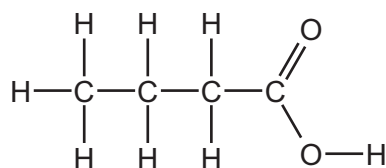
(ii) Complete the equation.



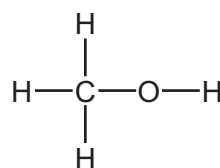
(iii) Why must air be kept out of the flask?

..... [1]

- (c) The ester methyl butanoate is found in apples. It can be made from butanoic acid and methanol. Their structural formulae are given below.



butanoic acid

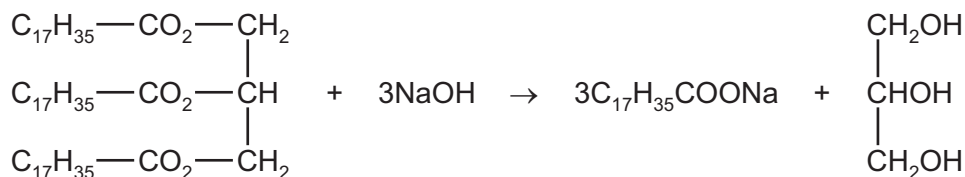


methanol

Use the information given above to deduce the structural formula of methyl butanoate showing all the bonds.

[2]

- (d) The equation represents the hydrolysis of a naturally occurring ester.

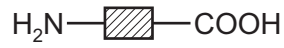


- (i) Which substance in the equation is an alcohol? Put a ring around this substance in the equation above. [1]
- (ii) Is the alkyl group, $\text{C}_{17}\text{H}_{35}$, in this ester saturated or unsaturated? Give a reason for your choice. [1]
-
- (iii) What type of compound is represented by the formula $\text{C}_{17}\text{H}_{35}\text{COONa}$?
What is the major use for compounds of this type?

type of compound

use [2]

- (e) Proteins are natural macromolecules. Draw the structural formula of a typical polypeptide chain. Include three monomer units. You may represent amino acids by formulae of the type drawn below.



[3]

[Total: 18]

DATA SHEET
The Periodic Table of the Elements

		Group																			
I	II	III	IV	V	VI	VII	0														
7 Li Lithium 3	9 Be Beryllium 4	1 H Hydrogen 1	11 B Boron 5	12 C Carbon 6	14 N Nitrogen 7	16 O Oxygen 8	19 F Fluorine 9	20 Ne Neon 10													
23 Na Sodium 11	24 Mg Magnesium 12	27 Al Aluminium 13	28 Si Silicon 14	31 P Phosphorus 15	32 S Sulfur 16	35.5 Cl Chlorine 17	40 Ar Argon 18														
39 K Potassium 19	40 Ca Calcium 20	45 Sc Scandium 21	48 Ti Titanium 22	51 V Vanadium 23	52 Cr Chromium 24	55 Mn Manganese 25	56 Fe Iron 26	59 Co Cobalt 27	59 Ni Nickel 28	64 Cu Copper 29	65 Zn Zinc 30	70 Ga Gallium 31	73 Ge Germanium 32	75 As Arsenic 33	79 Se Selenium 34	80 Br Bromine 35	84 Kr Krypton 36				
85 Rb Rubidium 37	88 Sr Strontium 38	89 Y Yttrium 39	91 Zr Zirconium 40	93 Nb Niobium 41	96 Mo Molybdenum 42	101 Ru Ruthenium 44	101 Rh Rhodium 45	103 Rh Rhodium 45	106 Pd Palladium 46	108 Ag Silver 47	112 Cd Cadmium 48	115 In Indium 49	119 Sn Tin 50	122 Sb Antimony 51	128 Te Tellurium 52	127 I Iodine 53	131 Xe Xenon 54				
133 Cs Caesium 55	137 Ba Barium 56	139 La Lanthanum 57	178 Hf Hafnium 72	181 Ta Tantalum 73	184 W Tungsten 74	186 Re Rhenium 75	190 Os Osmium 76	192 Ir Iridium 77	195 Pt Platinum 78	197 Au Gold 79	201 Hg Mercury 80	204 Tl Thallium 81	207 Pb Lead 82	209 Bi Bismuth 83	212 Po Polonium 84	210 At Astatine 85	222 Rn Radon 86				
87 Fr Francium	88 Ra Radium	89 Ac Actinium																			

140 Ce Cerium 58	141 Pr Praseodymium 59	144 Nd Neodymium 60	150 Sm Samarium 62	152 Eu Europium 63	157 Gd Gadolinium 64	162 Dy Dysprosium 66	165 Ho Holmium 67	167 Er Erbium 68	169 Tm Thulium 69	173 Yb Ytterbium 70	175 Lu Lutetium 71		
232 Th Thorium 90	238 U Uranium 92	238 Pa Protactinium 91	238 Pu Plutonium 94	238 Np Neptunium 93	238 Am Americium 95	238 Cm Curium 96	238 Bk Berkelium 97	238 Cf Californium 98	238 Es Einsteinium 99	238 Fm Fermium 100	238 Md Mendelevium 101	238 No Nobelium 102	238 Lr Lawrencium 103

a	X	b
Key	a = relative atomic mass	X = atomic symbol
	b = proton (atomic) number	

*58-71 Lanthanoid series
†90-103 Actinoid series

The volume of one mole of any gas is 24 dm³ at room temperature and pressure (r.t.p.).

Permission to reproduce items where third-party owned material protected by copyright is included has been sought and cleared where possible. Every reasonable effort has been made by the publisher (UCLES) to trace copyright holders, but if any items requiring clearance have unwittingly been included the publisher will be pleased to make amends at the earliest possible opportunity.

University of Cambridge International Examinations is part of the Cambridge Assessment Group. Cambridge Assessment is the brand name of University of Cambridge Local Examinations Syndicate (UCLES), which is itself a department of the University of Cambridge.