



UNIVERSITY OF CAMBRIDGE INTERNATIONAL EXAMINATIONS
International General Certificate of Secondary Education

CANDIDATE
NAME

CENTRE
NUMBER

--	--	--	--	--

CANDIDATE
NUMBER

--	--	--	--

* 7 7 8 6 1 5 0 7 3 9 *

COMPUTER STUDIES

0420/11

Paper 1

May/June 2011

2 hours 30 minutes

Candidates answer on the Question Paper.

No Additional Materials are required.

READ THESE INSTRUCTIONS FIRST

Write your Centre number, candidate number and name on all the work you hand in.

Write in dark blue or black pen.

You may use a soft pencil for any diagrams, graphs or rough working.

Do not use staples, paper clips, highlighters, glue or correction fluid.

DO NOT WRITE IN ANY BARCODES.

Answer **all** questions.

No marks will be awarded for using brand names of software packages or hardware.

At the end of the examination, fasten all your work securely together.

The number of marks is given in brackets [] at the end of each question or part question.

For Examiner's Use

--

This document consists of **24** printed pages.



1 Give **three** tasks carried out by an operating system.

1

.....

2

.....

3

..... [3]

2 A user decides to use an Internet search engine to help locate a hotel.

(a) What is a search engine?

.....

..... [1]

(b) Give **two** possible problems the user might encounter when using a search engine.

1

.....

.....

2

.....

..... [2]

(c) The search engine found the website of a suitable hotel.

Give **three** features you would expect to see on a hotel website.

1

.....

.....

2

.....

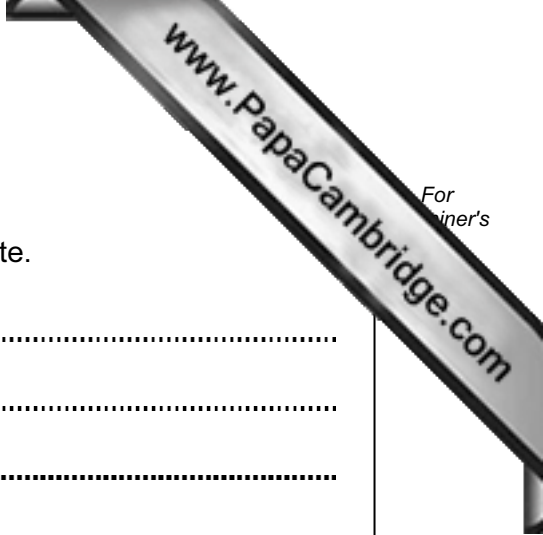
.....

3

.....

.....

[3]



3 A worker at a company has to go through a logon procedure to gain access to her computer system.

(a) The first thing she has to do is type in a *user name* and a *password*.

Why is this done?

.....
.....
..... [1]

(b) The *password* is typed in twice.

Why is this done?

.....
.....
..... [1]

A menu then appears on her screen. She chooses to connect to the Internet.

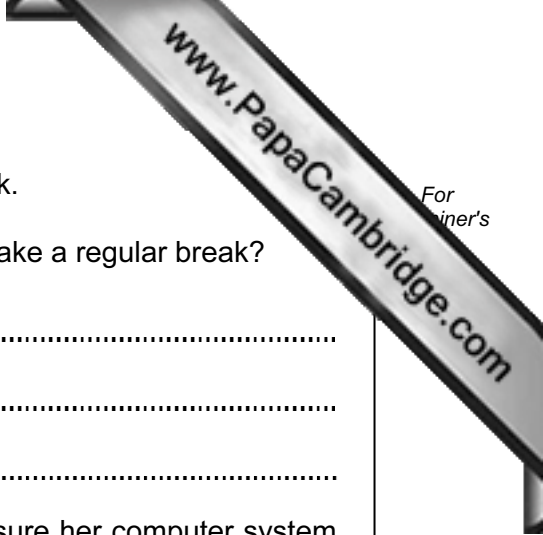
(c) Describe **two** ways her computer system is protected against loss or corruption of files once the computer system is connected to the Internet.

1

.....

2

..... [2]



(d) The worker leaves her computer system for a 10-minute break.

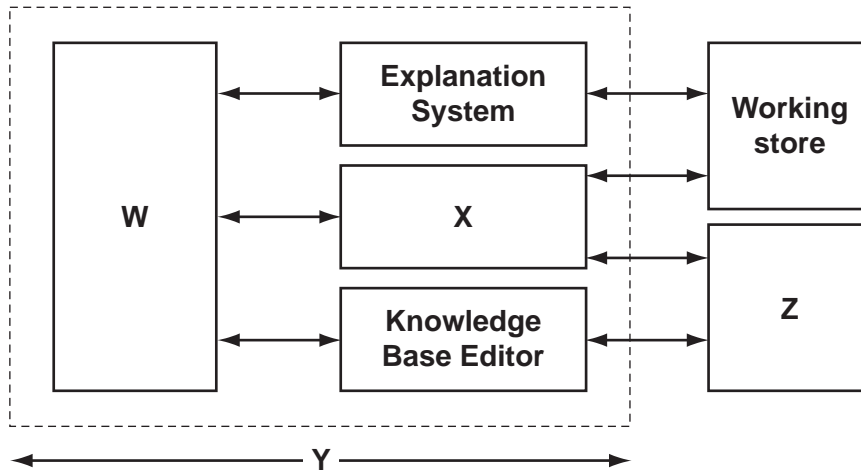
(i) From a health and safety aspect, why does she need to take a regular break?

.....
.....
.....

(ii) Apart from switching off her machine, how could she ensure her computer system was secure whilst taking her regular break?

.....
.....
..... [2]

4 The following diagram shows a typical expert system.



(a) Name the missing labels **W** to **Z** using the following list of possible options.

- Inference Engine
- Expert System Shell
- Knowledge Base
- User Interface

W

X

Y

Z [4]

(b) Name **one** of the components that makes up the knowledge base.

.....

..... [1]

(c) Give **one** advantage and **one** disadvantage of using expert systems.

Advantage:

.....

.....

Disadvantage:

.....

..... [2]

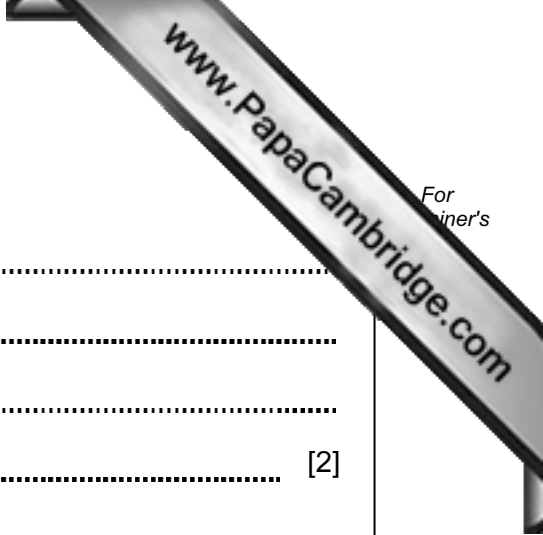
(d) Name **two** examples of the use of expert systems.

1

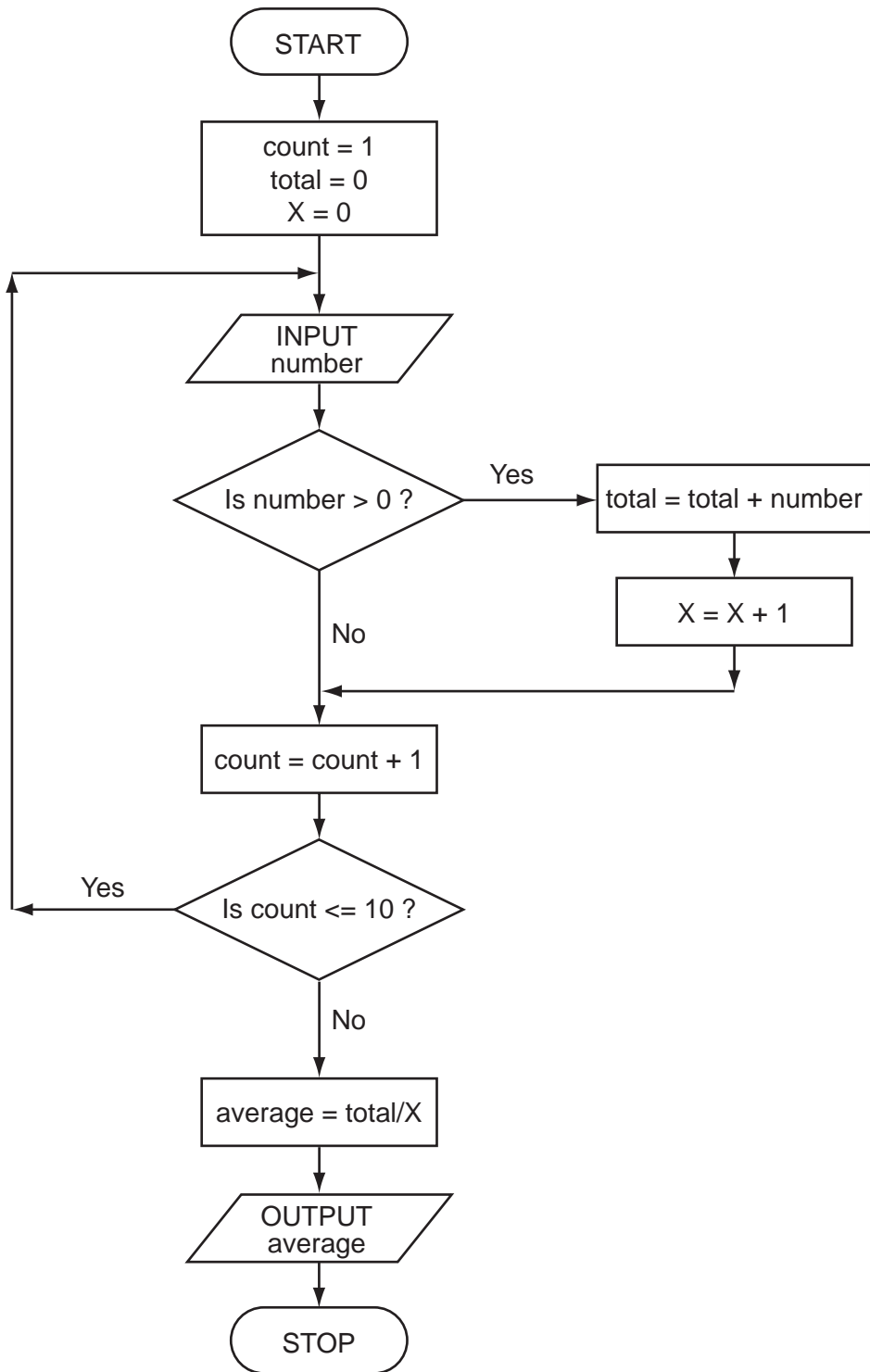
.....

2

..... [2]



5 Study the following flowchart very carefully:



6 Describe the role of computer software and hardware when producing animation en...
the television and film industry.

.....

 [3]

7 A spreadsheet has been set up to compare the costs of types of fruit juice sold by a shop.

	A	B	C	D
1	NAME OF FRUIT JUICE	NORMAL PRICE PER BOTTLE (\$)	VOLUME OF BOTTLE (LITRES)	COST PER LITRE (\$)
2	Apple	3.50	1.0	3.50
3	Orange	2.80	1.0	2.80
4	Pomegranate	4.55	0.7	6.50
5	Caju	2.00	2.0	1.00
6	Mango	1.05	0.7	1.50
7			Average cost:	3.06

(a) (i) What formula is in cell D5 to calculate the cost of *Caju juice* per litre?

.....

(ii) What formula is in cell D7 to calculate the mean (average) cost of fruit juice per litre?

..... [2]

(b) What validation check could be carried out on the data in cells B2 to B6?

.....
 [1]

(c) Three extra columns are to be added to this spreadsheet:

Column E will show a percent discount on the normal price of a bottle of fruit juice (as shown in column B);

Column F will show this discount in dollars (\$);

Column G will show the price of a bottle of fruit juice after discount.

Complete the spreadsheet by showing the **formulas** that need to be placed in cells F2 to F6 and G2 to G6.

	E	F	G
1	Percentage discount (%)	Discount amount (\$)	Discounted price per bottle (\$)
2	10		
3	20		
4	15		
5	10		
6	5		

[4]

8 Many computer-controlled systems use sensors to gather physical data. For example, temperature sensors are used in the control of central heating systems.

(a) Name **three** other sensors and give a different application for each named sensor.

Sensor 1:

Application:

.....

.....

Sensor 2:

Application:

.....

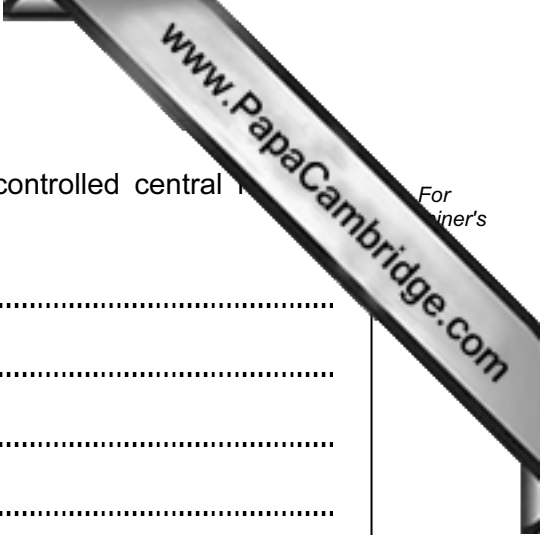
.....

Sensor 3:

Application:

.....

..... [6]



For
Trainer's

(b) Describe how temperature sensors are used in computer-controlled central heating systems.

.....

.....

.....

.....

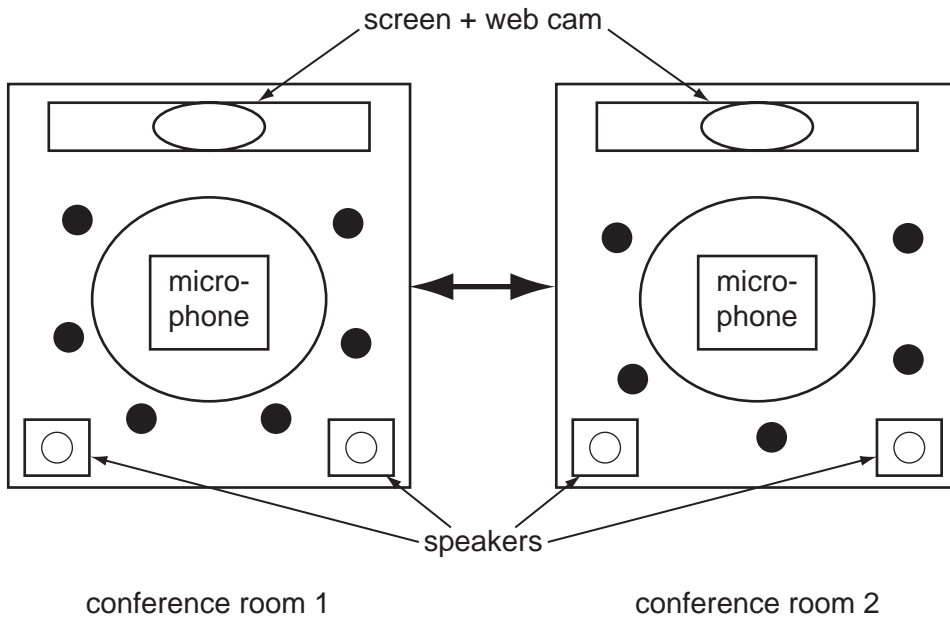
.....

.....

.....

[3]

9 An international company uses video-conferencing. The system is set up as follows:



(● represents a person at the meeting)

(a) Describe how the video-conferencing system works.

.....

.....

.....

.....

.....

.....

.....

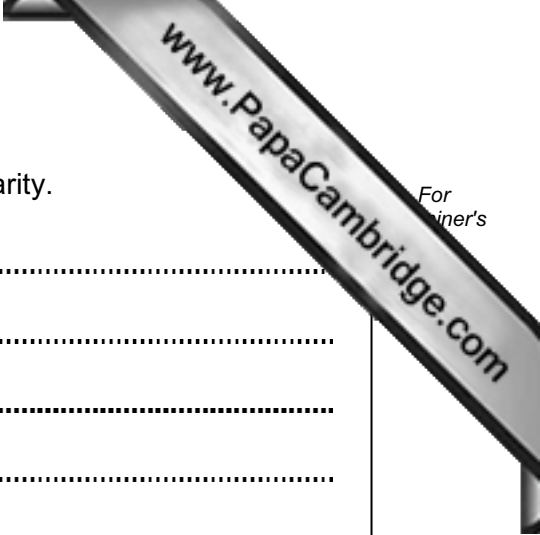
.....

.....

.....

.....

[4]



For
inert's

(b) Give **two** reasons why video-conferencing is gaining in popularity.

1

.....

.....

2

.....

..... [2]

10 (a) Two logic gates are the AND gate and the OR gate. Complete the truth tables for these two gates:

AND gate

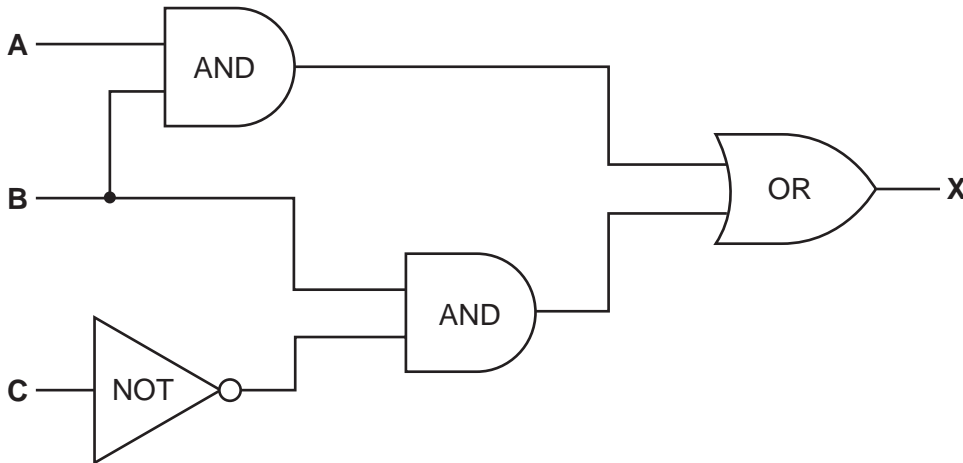
A	B	X
0	0	
0	1	
1	0	
1	1	

OR gate

A	B	X
0	0	
0	1	
1	0	
1	1	

[2]

(b) Complete the truth table for the following logic circuit:



A	B	C	X
0	0	0	
0	0	1	
0	1	0	
0	1	1	
1	0	0	
1	0	1	
1	1	0	
1	1	1	

[4]

11 (a) Describe **three** features you would expect to find in a Computer Aided Design package.

1

.....

.....

2

.....

.....

3

.....

..... [3]

(b) Give **three** different applications where CAD might be used.

1

.....

.....

2

.....

.....

3

.....

..... [3]



(d) Give **two** reasons why the GPS could take the driver to the wrong destination or give error messages.

1

.....

.....

.....

2

.....

.....

..... [2]

13 It has been decided to model the traffic flow at a busy road junction.

(a) Describe how data is gathered for this model.

.....

.....

.....

.....

.....

.....

.....

..... [3]

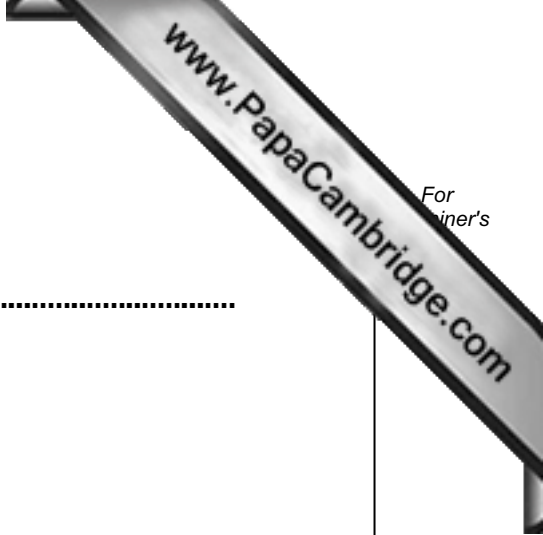
(b) Give **two** reasons why a model is used.

1

.....

2

..... [2]



14 (a) Name and draw **two** common types of network topology.

Type 1: Type 2:

[2]

(b) Give **two** advantages of networking computers.

1
.....
.....

2
.....
.....

[2]

15 A database showing the population of world cities has been produced. A section of the database is shown below.

Ref No	Name of City	Country	Area	City Population (m)	Urban Population (m)	Capital
1	Tokyo	Japan	Asia	33.2	34.1	Yes
2	New York	USA	America	17.8	21.9	No
3	Sao Paulo	Brazil	America	17.7	20.2	No
4	Seoul	S Korea	Asia	17.5	22.3	Yes
5	Mexico City	Mexico	America	17.4	22.7	Yes
6	Osaka	Japan	Asia	16.4	16.8	No
7	Manila	Philippines	Asia	14.8	14.9	Yes
8	Mumbai	India	Asia	14.4	19.7	No
9	Jakarta	Indonesia	Asia	14.3	17.2	Yes
10	Calcutta	India	Asia	12.7	15.6	No

(a) How many records are shown above?

..... [1]

(b) Using **Ref No** only, which records would be found if the following search condition was typed in

(Country = "India" OR Area = "America") AND (Capital = "No")

..... [2]

(c) Write a search condition to find the cities in Asia with a city population greater than 17 million OR an urban population greater than 20 million.

..... [2]

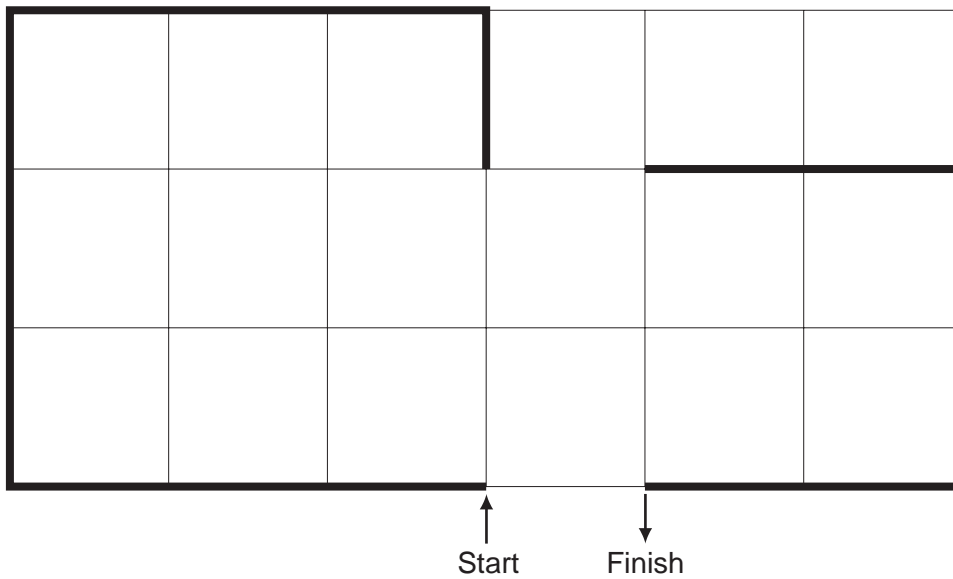
(d) Give **one** advantage of using Y or N rather than Yes or No in the **Capital** column.

..... [1]

16 A floor turtle can use the following instructions:

Instruction	Meaning
FORWARD d	Move d cm forward
BACKWARD d	Move d cm backward
LEFT t	Turn left t degrees
RIGHT t	Turn right t degrees
REPEAT n	Repeat the next set of instructions n times
ENDREPEAT	End of REPEAT loop
PENUP	Raise the pen
PENDOWN	Lower the pen

(Each square in the drawing below is 10 cm by 10 cm.)





Complete the set of instructions to draw the above shape (shown in bold lines).

PENDOWN

LEFT 90

REPEAT

.....
.....
.....
.....
.....
.....
.....
.....
.....
.....
.....
.....
.....
.....
.....
.....

[5]

17 Daniel lives in Italy and travels to Mexico, India and New Zealand. The times differences are:

<u>Country</u>	<u>Hours</u>	<u>Minutes</u>
Mexico	-7	0
India	+4	+30
New Zealand	+11	0

Thus, if it is 10:15 in Italy it will be 14:45 in India.

(a) Write an algorithm, using pseudocode or otherwise, which:

- Inputs the name of the country
- Inputs the time in Italy in hours (H) and minutes (M)
- Calculates the time in the country input using the data from the table
- Outputs the country and the time in hours and minutes

.....

 [4]

(b) Describe, with examples, **two** sets of test data you would use to test your algorithm.

1

 2
 [2]

Permission to reproduce items where third-party owned material protected by copyright is included has been sought and cleared where possible. Every reasonable effort has been made by the publisher (UCLES) to trace copyright holders, but if any items requiring clearance have unwittingly been included, the publisher will be pleased to make amends at the earliest possible opportunity.