

Centre Number	Candidate Number	Name
---------------	------------------	------

UNIVERSITY OF CAMBRIDGE INTERNATIONAL EXAMINATIONS
International General Certificate of Secondary Education

GEOGRAPHY

0460/02

Paper 2

May/June 2005

INSERT 1

1 hour 30 minutes

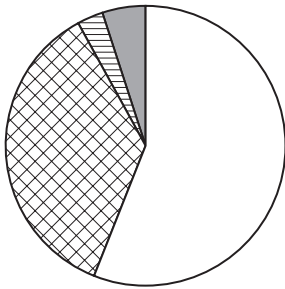
READ THESE INSTRUCTIONS FIRST

This insert contains Fig. 2 for Question 3 and Figs 6 and 7 for Question 6.

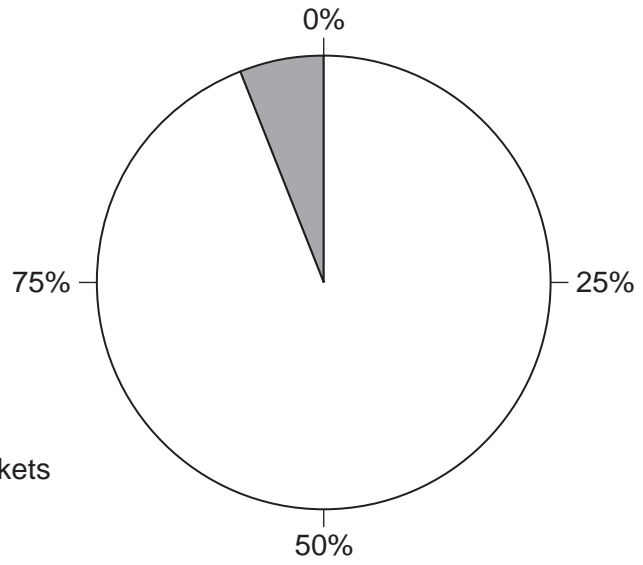
Write your Centre number, candidate number and name in the spaces provided and attach it to your answer paper/answer booklet.

Shopping in a Developed Country

1960s
Total sales \$20 billion



1990s
Total sales \$170 billion







- Key:**
-  Small local shops
 -  Superstores/hypermarkets
 -  Department stores
 -  Mail order (shopping by post)

Fig. 2 for Question 3

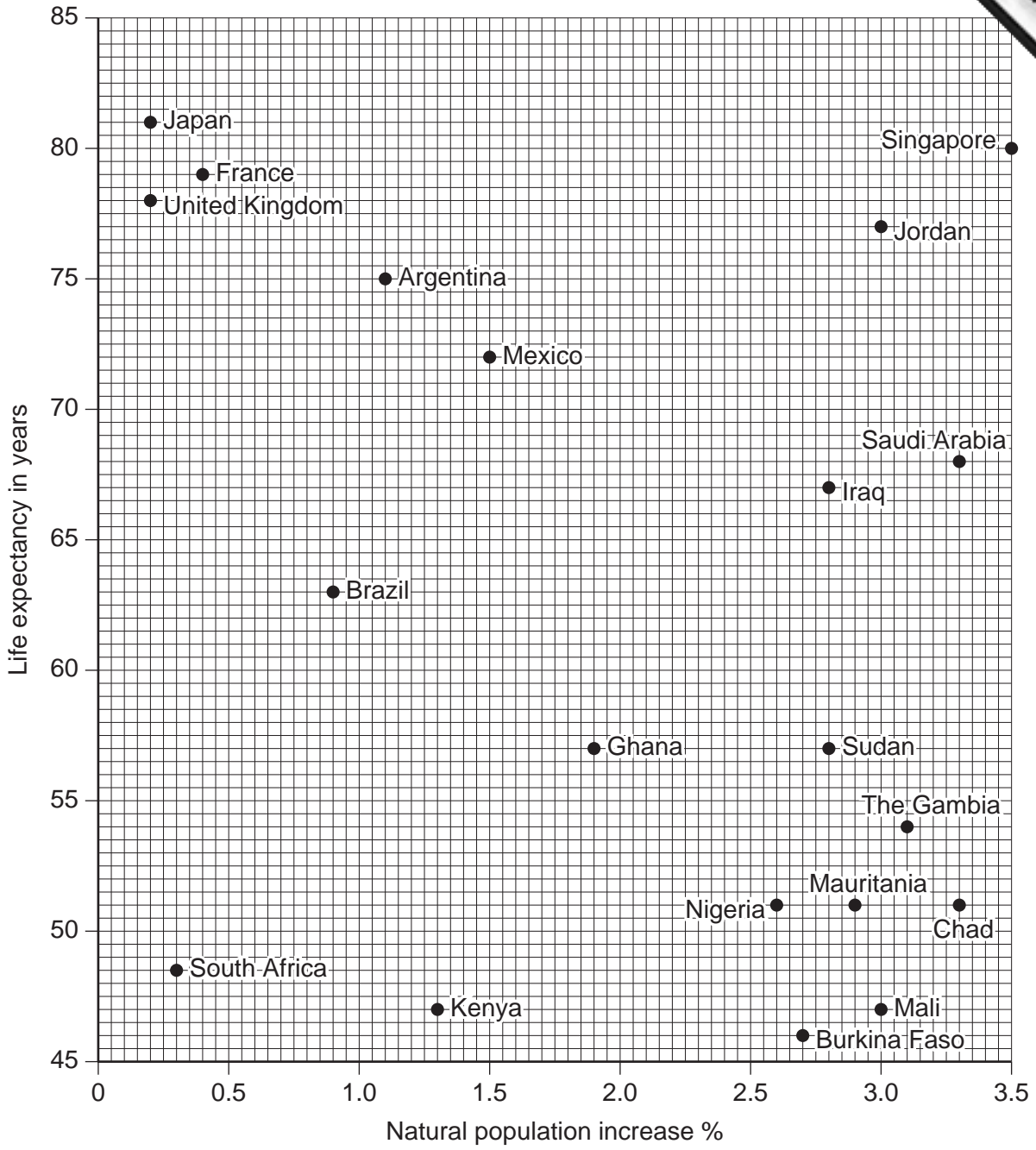
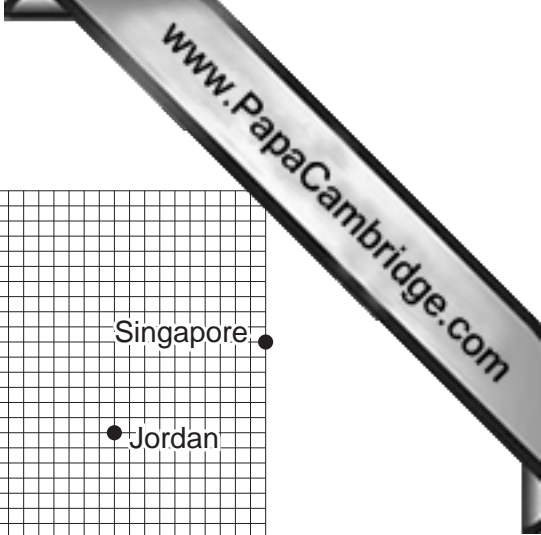


Fig. 6 for Question 6

(..... plus) minus (..... plus)

Fig. 7 for Question 6

UNIVERSITY OF CAMBRIDGE INTERNATIONAL EXAMINATIONS
International General Certificate of Secondary Education

GEOGRAPHY

0460/02

Paper 2

May/June 2005

INSERT 2

1 hour 30 minutes

www.PapaCambridge.com

READ THESE INSTRUCTIONS FIRST

This insert contains Photograph A for Question 7.

This document consists of 2 printed pages.

 UNIVERSITY OF CAMBRIDGE



Photograph A for Question 7