



UNIVERSITY OF CAMBRIDGE INTERNATIONAL EXAMINATIONS  
International General Certificate of Secondary Education

www.PapaCambridge.com

---

**GEOGRAPHY**

**0460/42**

Paper 4 Alternative to Coursework

**October/November 2010**

INSERT

**1 hour 30 minutes**

---

**READ THESE INSTRUCTIONS FIRST**

This Insert contains Figs 1 and 2 for Question 1, Figs 5 and 6 and Photographs A, B, C, D and E for Question 2.

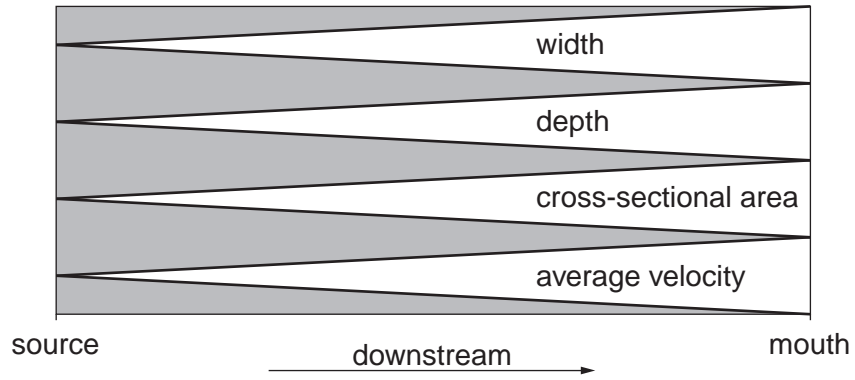
---

This document consists of **7** printed pages and **1** blank page.



Fig. 1 for Question 1

Characteristics of a textbook example of a river



Key

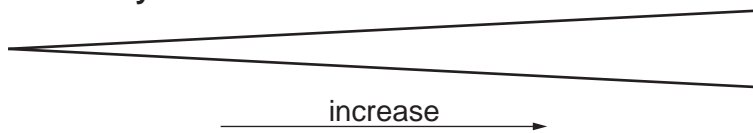
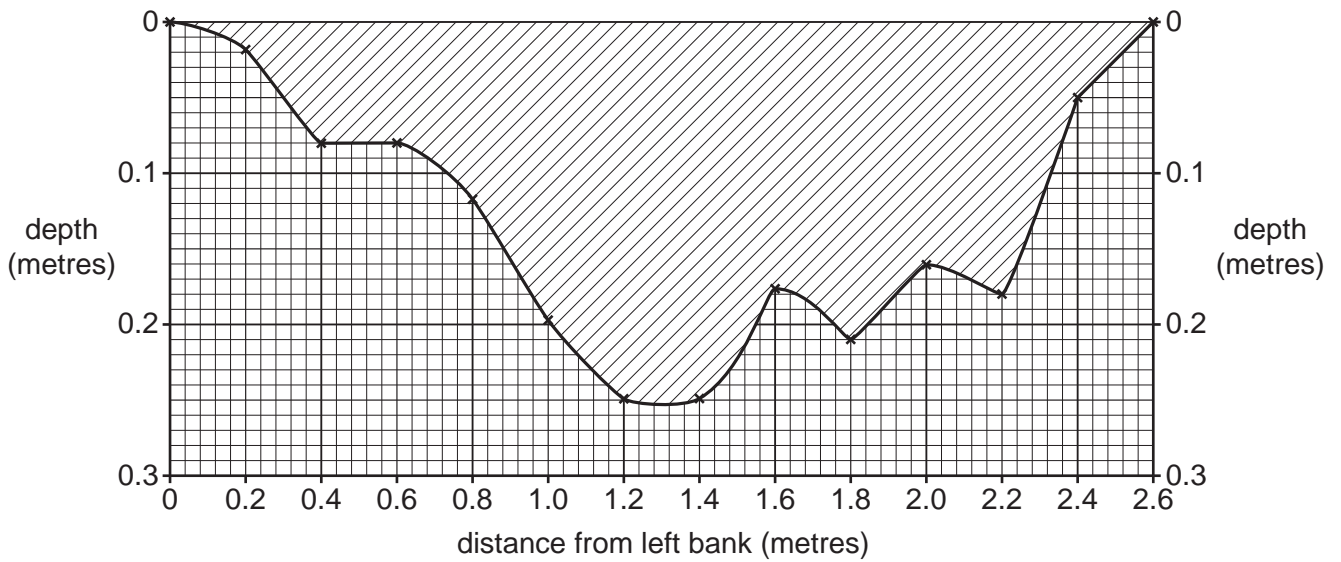


Fig. 2 for Question 1

Cross-section at Site 1



Key

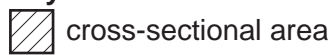
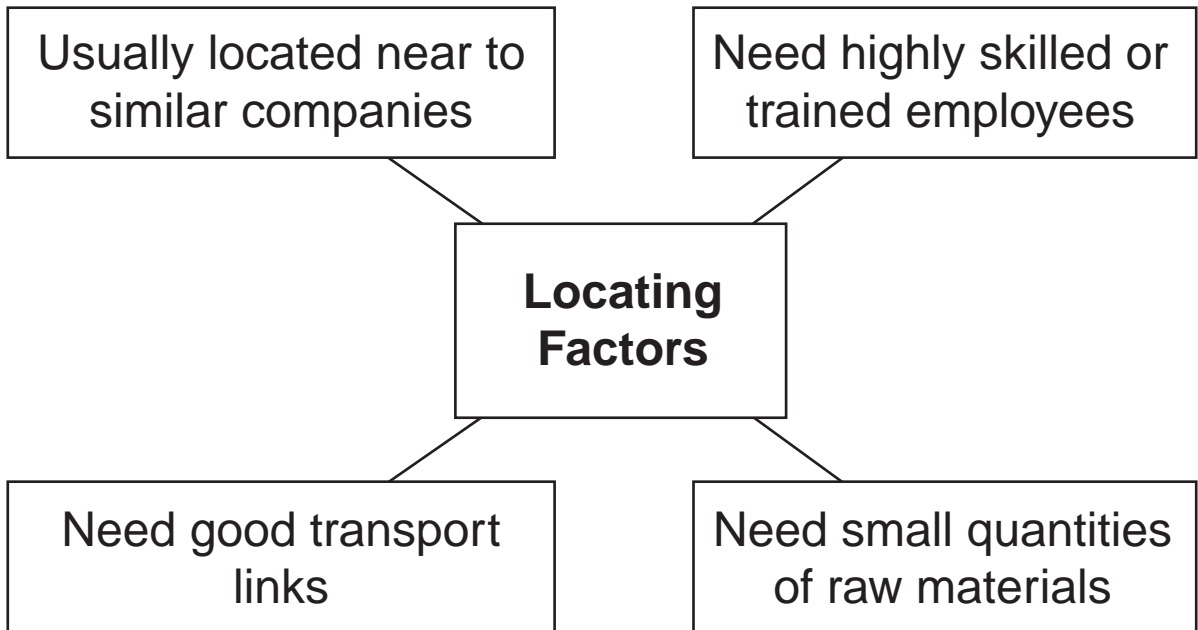


Fig. 5 for Question 2

Factors affecting the location of high-technology industries





X

Y



Photograph A for Question 2

Photograph B for Question 2



[www.PapaCambridge.com](http://www.PapaCambridge.com)

Photograph C for Question 2



Photograph D for Question 2



www.PapaCambridge.com

Photograph E for Question 2



