

- 1 Write 45% as a fraction in its simplest form.

Answer [1]

- 2 One January day in Munich, the temperature at noon was 3°C .
At midnight the temperature was -8°C .

Write down the difference between these two temperatures.

Answer $^{\circ}\text{C}$ [1]

- 3 (a) Calculate $\sqrt{5.7} - 1.03^2$.

Write down all the numbers displayed on your calculator.

Answer(a) [1]

- (b) Write your answer to **part (a)** correct to 3 decimal places.

Answer(b) [1]

- 4 Pedro and Eva do their homework.
Pedro takes 84 minutes to do his homework.

The ratio Pedro's time : Eva's time = 7 : 6.

Work out the number of minutes Eva takes to do her homework.

Answer min [2]

- 5 Write each of the following as a single vector.

(a) $\begin{pmatrix} 6 \\ 1 \end{pmatrix} + \begin{pmatrix} -4 \\ 2 \end{pmatrix}$

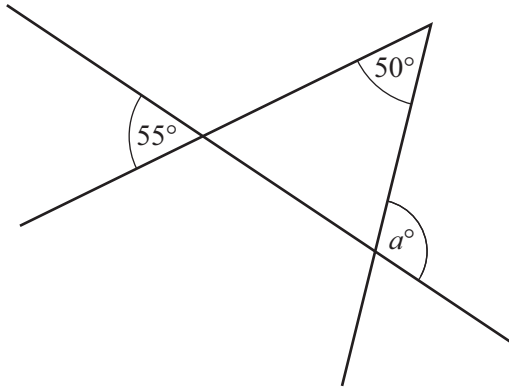
Answer(a) $\begin{pmatrix} \quad \\ \quad \end{pmatrix}$ [1]

(b) $4\begin{pmatrix} 2 \\ -3 \end{pmatrix}$

Answer(b) $\begin{pmatrix} \quad \\ \quad \end{pmatrix}$ [1]

3

6



NOT TO
SCALE

Use the information in the diagram to find the value of a .

Answer $a =$ [2]

7 Show that $1\frac{1}{2} \div \frac{3}{16} = 8$.

Do not use a calculator and show all the steps of your working.

Answer

[2]

8 Sebastian ran a race in 11.4 seconds, correct to 1 decimal place.

Complete the statement about the time, t seconds, that Sebastian took to run the race.

Answer $\leq t <$ [2]

4

9 Rearrange this equation to make b the subject.

$$a = \frac{b}{5} - 9$$

Answer $b =$ [2]

10 Here are the first four terms of a sequence.

4 11 18 25

Write down an expression for the n th term.

Answer [2]

11 x and y are integers.

(a) Find the value of x when $-7 < x < -5$.

Answer(a) $x =$ [1]

(b) Find the value of y when $\frac{3}{4} < \frac{y}{16} < \frac{7}{8}$.

Answer(b) $y =$ [2]

12 The probability of Sachin's team winning any match is 0.45.

(a) Write down the probability of Sachin's team **not** winning any match.

Answer(a) [1]


(b) In a season there are 40 matches.

How many matches should Sachin's team expect to win in a season?

Answer(b) [2]

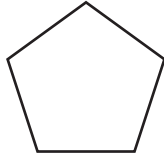
13 Complete each statement with the correct mathematical term.

(a)



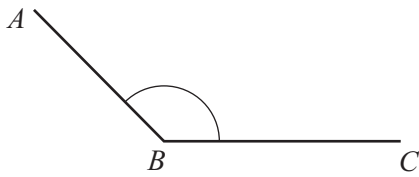
This solid is a [1]

(b)



This polygon is a regular [1]

(c)



Angle ABC is an angle [1]

14 (a) The perimeter of a square is 28 mm.

Work out the length of one side of the square.

Answer(a) mm [1]

(b) Calculate the volume of a cylinder with radius 5.2 cm and height 15 cm.

Answer(b) cm^3 [2]

15 Bruce invested \$420 at a rate of 4% per year compound interest.

Calculate the **total** amount Bruce has after 2 years.
Give your answer correct to 2 decimal places.

Answer \$ [3]

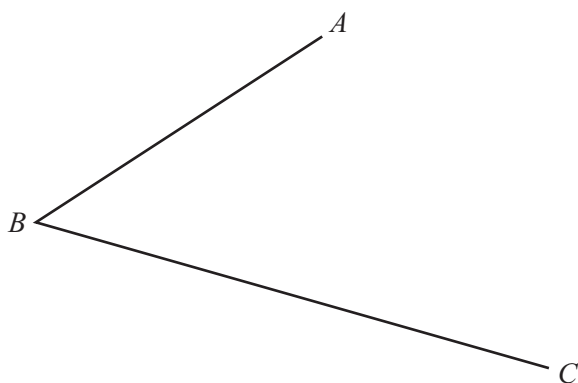
- 16 Martina changed 200 Swiss francs (CHF) into euros (€).
The exchange rate was $\text{€}1 = 1.14 \text{ CHF}$.

Calculate how much Martina received.
Give your answer correct to the nearest euro.

Answer €..... [3]


- 17 In this question use a straight edge and compasses only.
Leave in all your construction arcs.

- (a) Construct the bisector of angle ABC .



[2]

- (b) Construct the perpendicular bisector of the line DE .



[2]

18 (a) Which **two** of these have the same value?

5^{-2} $\frac{2}{5}$ $\left(\frac{1}{2}\right)^2$ $\left(\frac{2}{5}\right)^2$ 0.2^2

Answer(a) and [2]

(b) Simplify.

(i) $a^6 \times a^3$

Answer(b)(i) [1]

(ii) $24b^{16} \div 6b^4$

Answer(b)(ii) [2]

19 (a) Multiply out the brackets.

$5(x + 3)$

Answer(a) [1]

(b) Factorise completely.

$12xy - 3x^2$

Answer(b) [2]

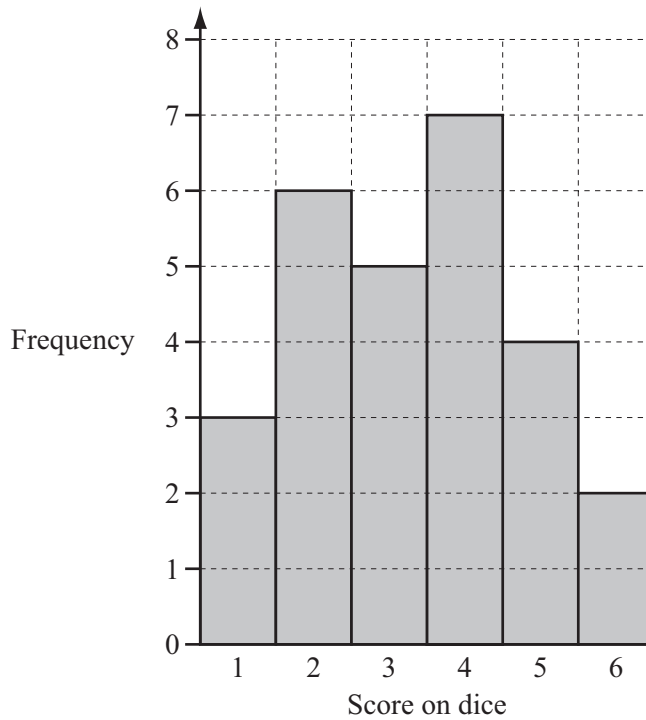
(c) Solve.

$5x - 24 = 51$

Answer(c) $x =$ [2]

Question 20 is printed on the next page.

- 20 Marco throws a six-sided dice 27 times.
The bar chart shows his results.



- (a) Write down the mode.

Answer(a) [1]

- (b) Work out the probability that Marco throws a number less than 5.

Answer(b) [2]

- (c) Calculate the mean.

Answer(c) [3]

Permission to reproduce items where third-party owned material protected by copyright is included has been sought and cleared where possible. Every reasonable effort has been made by the publisher (UCLES) to trace copyright holders, but if any items requiring clearance have unwittingly been included the publisher will be pleased to make amends at the earliest possible opportunity.

University of Cambridge International Examinations is part of the Cambridge Assessment Group. Cambridge Assessment is the brand name of University of Cambridge Local Examinations Syndicate (UCLES), which is itself a department of the University of Cambridge.