



# Cambridge IGCSE™

CANDIDATE  
NAME

--

CENTRE  
NUMBER

--	--	--	--	--

CANDIDATE  
NUMBER

--	--	--	--



**CAMBRIDGE INTERNATIONAL MATHEMATICS**

**0607/13**

Paper 1 (Core)

**October/November 2022**

**45 minutes**

You must answer on the question paper.

You will need: Geometrical instruments

## INSTRUCTIONS

- Answer **all** questions.
- Use a black or dark blue pen. You may use an HB pencil for any diagrams or graphs.
- Write your name, centre number and candidate number in the boxes at the top of the page.
- Write your answer to each question in the space provided.
- Do **not** use an erasable pen or correction fluid.
- Do **not** write on any bar codes.
- Calculators must **not** be used in this paper.
- You may use tracing paper.
- You must show all necessary working clearly and you will be given marks for correct methods even if your answer is incorrect.
- All answers should be given in their simplest form.

## INFORMATION

- The total mark for this paper is 40.
- The number of marks for each question or part question is shown in brackets [ ].

This document has **8** pages.

**Formula List**

Area,  $A$ , of triangle, base  $b$ , height  $h$ .  $A = \frac{1}{2}bh$

Area,  $A$ , of circle, radius  $r$ .  $A = \pi r^2$

Circumference,  $C$ , of circle, radius  $r$ .  $C = 2\pi r$

Curved surface area,  $A$ , of cylinder of radius  $r$ , height  $h$ .  $A = 2\pi rh$

Curved surface area,  $A$ , of cone of radius  $r$ , sloping edge  $l$ .  $A = \pi rl$

Curved surface area,  $A$ , of sphere of radius  $r$ .  $A = 4\pi r^2$

Volume,  $V$ , of prism, cross-sectional area  $A$ , length  $l$ .  $V = Al$

Volume,  $V$ , of pyramid, base area  $A$ , height  $h$ .  $V = \frac{1}{3}Ah$

Volume,  $V$ , of cylinder of radius  $r$ , height  $h$ .  $V = \pi r^2 h$

Volume,  $V$ , of cone of radius  $r$ , height  $h$ .  $V = \frac{1}{3}\pi r^2 h$

Volume,  $V$ , of sphere of radius  $r$ .  $V = \frac{4}{3}\pi r^3$

Answer **all** the questions.

1 Write the number twenty thousand eight hundred in figures.

..... [1]

2 Write down all the factors of 39.

..... [2]

3 Change  $3\frac{1}{2}$  years into months.

..... months [1]

4 A spool contains 100 m of thread.

Work out the total length of thread on 70 spools.  
Give your answer in kilometres.

..... km [2]

5 Dewi walks due East from his home.

Complete the statement.

Dewi walks on a bearing of ..... [1]

6 Write 368.276 correct to the nearest ten.

..... [1]

- 7 The table shows the time taken to soak and then sprout different seeds.

	Soak	Sprout
Mustard	6 hours	5 days
Radish	5 hours	4 days

Work out how much longer it takes to soak and sprout mustard seeds than to soak and sprout radish seeds.

Give your answer in hours.

..... hours [2]

- 8 Work out.

$$6 - 18 \div 2$$

..... [1]

- 9  $\frac{1}{4}$     20%    0.24    0.3

Write these numbers in order of size, starting with the smallest.

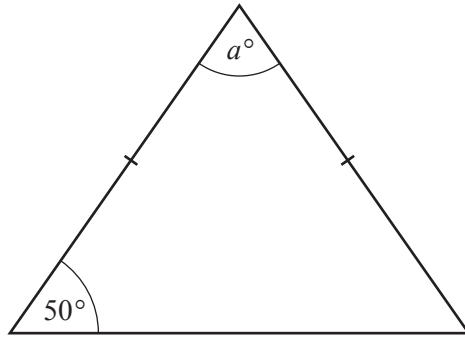
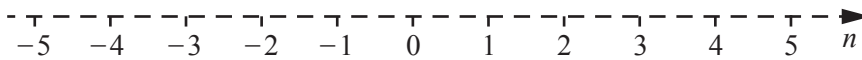
..... < ..... < ..... < ..... [2]  
*smallest*

- 10 Four pens cost \$1.

Work out the cost of five pens.

\$ ..... [2]

11

NOT TO  
SCALEWork out the value of  $a$ . $a = \dots\dots\dots$  [2]12 (a) Show the inequality  $n \leq -2$  on this number line.

[1]

(b) Write down the largest integer value,  $n$ , for which  $n \leq -2$ . $\dots\dots\dots$  [1]

13 Factorise fully.

$$6x^3 - 8x$$

 $\dots\dots\dots$  [2]

14 There are two prime numbers between 60 and 70.

Complete this statement about these prime numbers.

The difference between the prime numbers  $\dots\dots\dots$  and  $\dots\dots\dots$  is  $\dots\dots\dots$  [2]

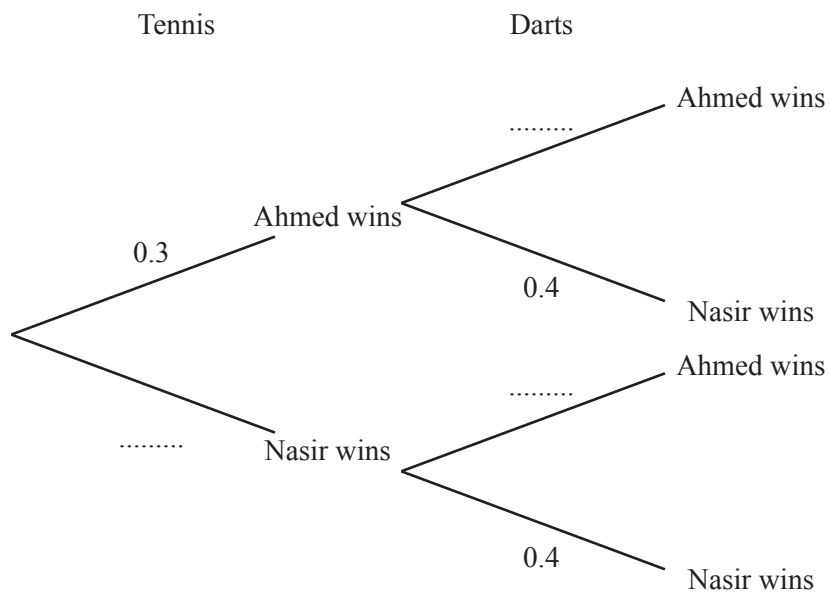
15  $g(x) = \sqrt[3]{3x}$

Work out  $g(9)$ .

..... [1]

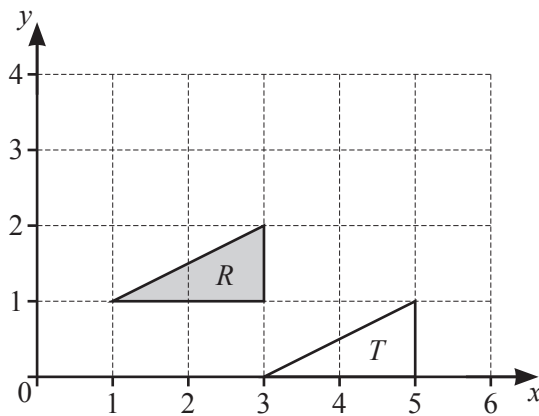
- 16 Ahmed and Nasir play a game of tennis followed by a game of darts. The probability of Ahmed winning the game of tennis is 0.3 . The probability of Nasir winning the game of darts is 0.4 .

Complete the tree diagram.



[1]

17



Describe fully the **single** transformation that maps triangle  $R$  onto triangle  $T$ .

.....  
 ..... [2]

- 18 Benji walks 20 km in 4 hours.  
Wynn's average speed is 1 km/h faster than Benji's average speed.

Work out the distance Wynn walks in 3 hours.

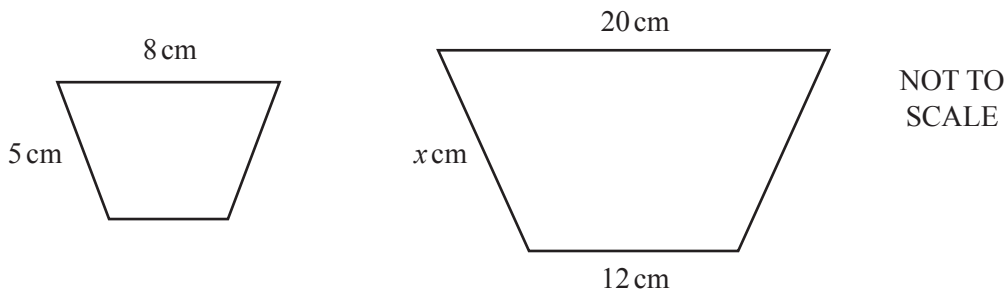
..... km [3]

- 19 Simplify fully.

$$5(x^2 - 3) - 2(x^2 + 5)$$

..... [2]

20



These two shapes are mathematically similar.

Find the value of  $x$ .

$x =$  ..... [2]

**Questions 21, 22 and 23 are printed on the next page.**

- 21 Find the value of  $x$  when  $\frac{8^9}{8^3} = 8^x$ .

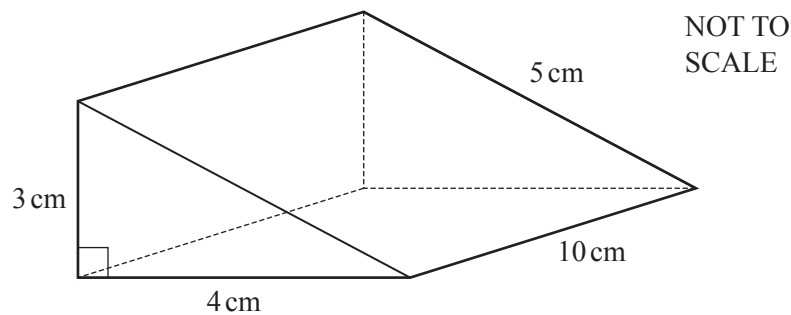
$x = \dots\dots\dots$  [1]

- 22 A bag contains 5 black counters and 6 white counters.  
Manjit takes one counter out of the bag at random, notes its colour and replaces it.  
She does this a second time.

Find the probability that both the counters are black.

$\dots\dots\dots$  [2]

- 23



The diagram shows a triangular prism.

Calculate its total surface area.

$\dots\dots\dots \text{cm}^2$  [3]

Permission to reproduce items where third-party owned material protected by copyright is included has been sought and cleared where possible. Every reasonable effort has been made by the publisher (UCLES) to trace copyright holders, but if any items requiring clearance have unwittingly been included, the publisher will be pleased to make amends at the earliest possible opportunity.

To avoid the issue of disclosure of answer-related information to candidates, all copyright acknowledgements are reproduced online in the Cambridge Assessment International Education Copyright Acknowledgements Booklet. This is produced for each series of examinations and is freely available to download at [www.cambridgeinternational.org](http://www.cambridgeinternational.org) after the live examination series.

Cambridge Assessment International Education is part of Cambridge Assessment. Cambridge Assessment is the brand name of the University of Cambridge Local Examinations Syndicate (UCLES), which is a department of the University of Cambridge.