



UNIVERSITY OF CAMBRIDGE INTERNATIONAL EXAMINATIONS  
International General Certificate of Secondary Education

CANDIDATE  
NAME

CENTRE  
NUMBER

--	--	--	--	--

CANDIDATE  
NUMBER

--	--	--	--

\* 3 5 8 3 1 5 3 4 8 0 \*

**CO-ORDINATED SCIENCES**

**0654/21**

Paper 2 (Core)

**October/November 2013**

**2 hours**

Candidates answer on the Question Paper.

No Additional Materials are required.

**READ THESE INSTRUCTIONS FIRST**

Write your Centre number, candidate number and name on all the work you hand in.

Write in dark blue or black pen.

You may use a pencil for any diagrams or graphs.

Do not use staples, paper clips, glue or correction fluid.

**DO NOT WRITE IN ANY BARCODES.**

Answer **all** questions.

Electronic calculators may be used.

You may lose marks if you do not show your working or if you do not use appropriate units.

A copy of the Periodic Table is printed on page 32.

At the end of the examination, fasten all your work securely together.

The number of marks is given in brackets [ ] at the end of each question or part question.

This document consists of **31** printed pages and **1** blank page.



1 Sodium chloride is obtained from underground deposits in the Earth's crust or from solutions such as sea water.

(a) (i) Explain why the Earth's crust contains the compound sodium chloride and not the uncombined elements sodium and chlorine.

.....  
..... [1]

(ii) State **one** difference between a compound and an element.

.....  
..... [1]

(iii) Describe how crystals of sodium chloride could be obtained from a salt solution.

.....  
..... [2]

(b) (i) Explain the following statements in terms of protons and electrons.

Atoms do **not** have an overall electrical charge.

.....  
.....

A potassium ion,  $K^+$ , has a single positive electrical charge.

.....  
..... [2]

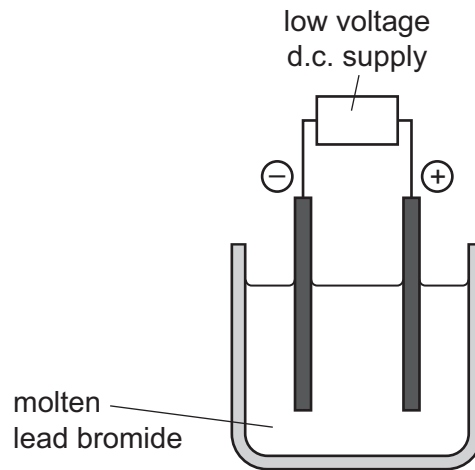
(ii) The chemical formula of the compound calcium nitride is  $Ca_3N_2$ .

Explain the meaning of the numbers in this formula.

.....  
..... [1]

- (c) Fig. 1.1 shows apparatus used to separate the element lead from the compound lead bromide.

For  
Examiner's  
Use



**Fig. 1.1**

- (i) Name the process shown in Fig. 1.1.

..... [1]

- (ii) Explain why an orange-coloured gas is observed rising from the molten lead bromide during the process.

.....  
 .....  
 ..... [2]

2 Fig. 2.1 shows the inside of a refrigerator.

The temperature inside the freezing compartment is  $-20\text{ }^{\circ}\text{C}$  and the temperature in the rest of the refrigerator is  $+5\text{ }^{\circ}\text{C}$ .

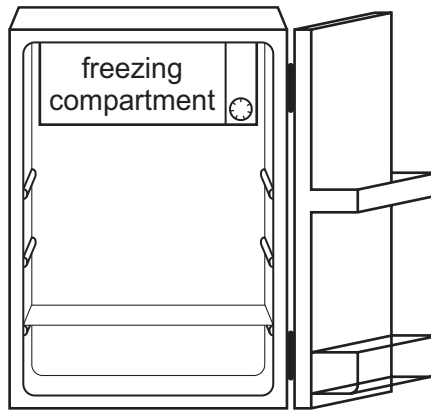


Fig. 2.1

(a) The air in the refrigerator is cooled by convection.

Draw **one** arrow on Fig. 2.1 to show the movement of the air cooled by the freezing compartment. [1]

(b) The volume of air in the refrigerator is  $0.15\text{ m}^3$ .

The density of air is  $1.26\text{ kg/m}^3$ .

Calculate the mass of air in the refrigerator.

State the formula that you use and show your working.

formula


working

..... kg [2]


- (c) (i) Complete the diagrams to show the arrangement of water molecules in solid ice and in liquid water.

For  
Examiner's  
Use

One molecule has been drawn for you in each box. Each diagram should contain at least twelve water molecules.



solid ice



liquid water

[2]

- (ii) Each sentence describes either a solid, a liquid or a gas.

In the right hand column write the letter **S** for solid, **L** for liquid or **G** for gas to match the description.

description	<b>S, L or G</b>
It cannot flow.	
It cannot transfer heat by convection.	
It contains particles which are widely separated.	
It expands the most when heated.	
It fills a closed container.	
It has a fixed volume but not a fixed shape.	

[3]

3 The concentration of glucose in the blood does not normally vary much. The hormone adrenaline causes blood glucose concentration to increase.

(a) (i) Define the term *hormone*.

.....  
 .....  
 ..... [2]

(ii) State **one** effect of adrenaline on the body, other than increasing the concentration of glucose in the blood.

..... [1]

(b) Researchers investigated how adding fibre to foods affected the concentration of glucose in the blood after eating.

Fig. 3.1 shows the results that they obtained for two different types of cornflakes. Cornflakes contain a lot of starch.

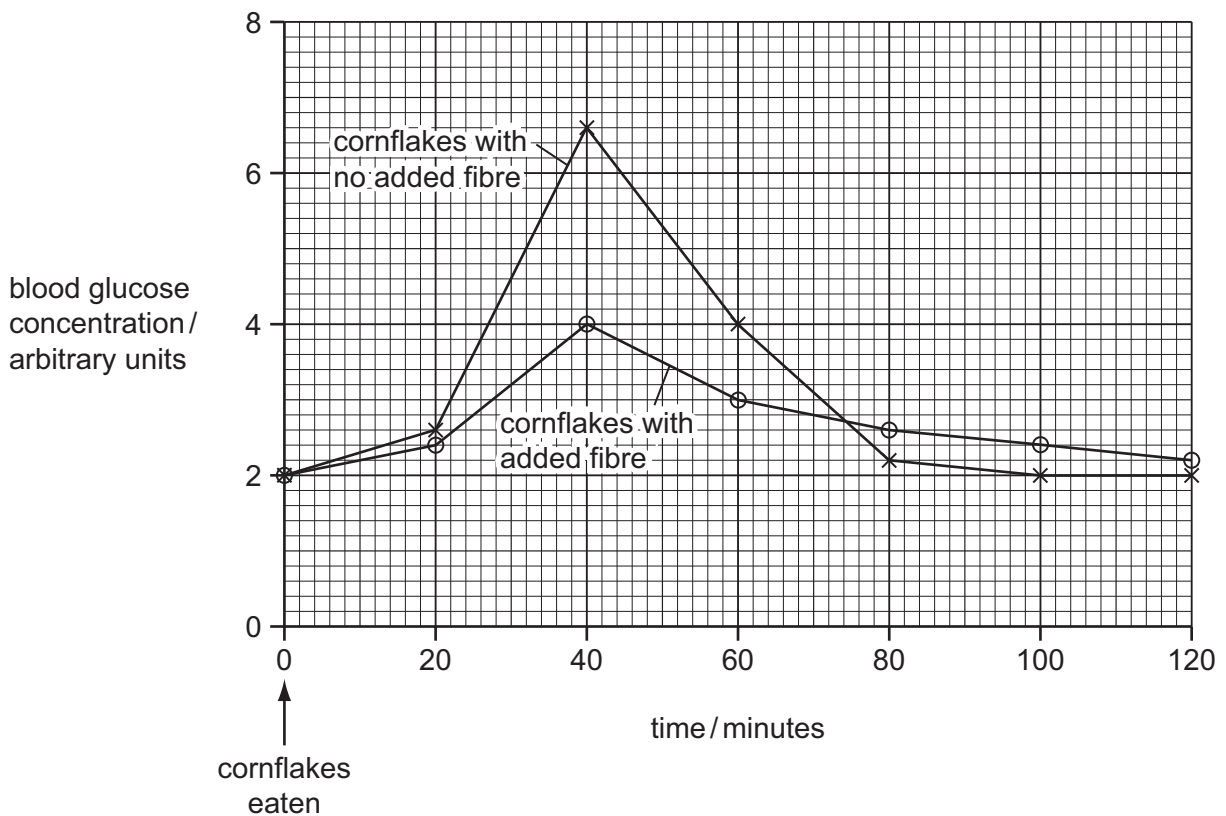


Fig. 3.1

Use the information in Fig. 3.1 to help you to answer the following questions.

For  
Examiner's  
Use

- (i) Describe how the blood glucose concentration changed after eating cornflakes with no added fibre.

.....  
.....  
.....  
..... [3]

- (ii) Suggest explanations for the changes in blood glucose concentration.

.....  
.....  
..... [3]

- (iii) Describe how adding fibre to the cornflakes affected the changes in blood glucose concentration after eating.

.....  
.....  
..... [3]

- (c) Outline **one** other way in which fibre in the diet affects health.

..... [1]

- 4 Fig. 4.1 shows a period in the Periodic Table. Four elements are represented by letters which are not their usual chemical symbols.

For  
Examiner's  
Use

group number	1	2	3	4	5	6	7	0
	W	X					Y	Z

Fig. 4.1

- (a) (i) State and explain which of the elements **W**, **X**, **Y** and **Z** are poor conductors of electricity.

element(s) .....

explanation .....

..... [2]

- (ii) One of the elements shown in Fig. 4.1 is **not** expected to form a compound with any of the others.

State and explain which **one** of the elements this is.

element .....

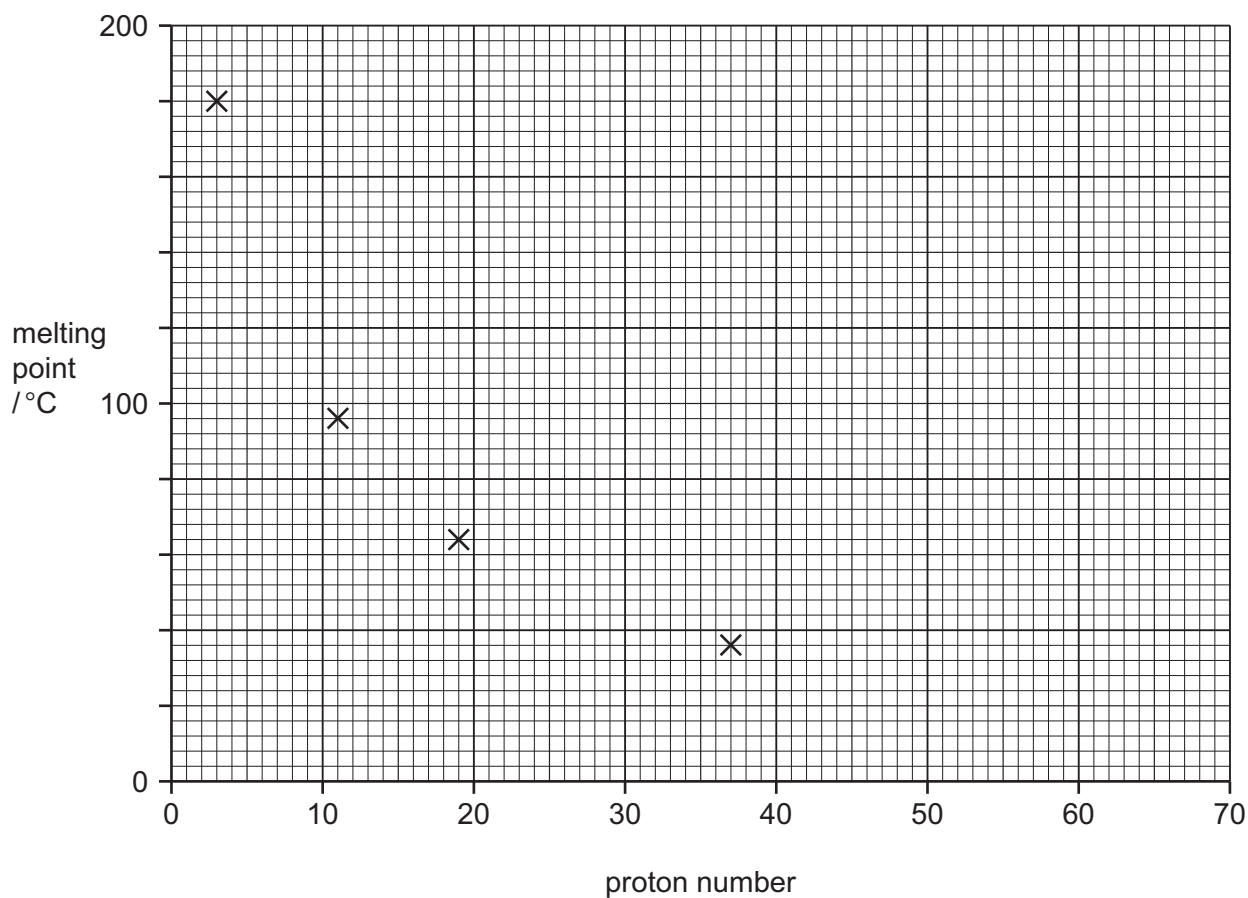
explanation .....

..... [2]



- (b) Fig. 4.2 shows the melting points of four metallic elements from the same group of the Periodic Table.

For  
Examiner's  
Use



**Fig. 4.2**

- (i) State the number of the group that contains the elements whose melting points are shown in Fig. 4.2.

Explain your answer briefly.

group number .....

explanation .....

..... [2]

- (ii) Use the Periodic Table on page 32 to name the element in Fig. 4.2 that has the lowest melting point.

..... [1]

(c) Many elements combine with oxygen to form oxides.

- (i) A student is given a soluble white solid which she knows is either an oxide of a metal or an oxide of a non-metal.

Describe how the student can use the apparatus and materials shown in Fig. 4.3 to find out whether the solid is a metal oxide or a non-metal oxide.

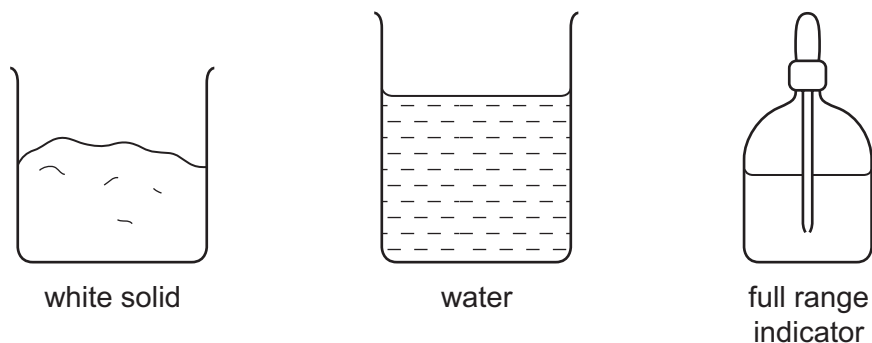


Fig. 4.3

.....  
 .....  
 ..... [2]

- (ii) Copper oxide is a black solid which is insoluble in water.


The student added excess dilute sulfuric acid to some copper oxide, and warmed the mixture.

The copper oxide disappeared and a clear blue solution remained.

State **one** observation which shows that a chemical change has occurred.

.....  
 ..... [1]

- (iii) Complete the **word** chemical equation for the reaction between copper oxide and dilute sulfuric acid.



[2]

**Please turn over for Question 5.**

5 Fig. 5.1 shows a solar-powered vehicle which travelled 3000 km in 30 hours.

For  
Examiner's  
Use

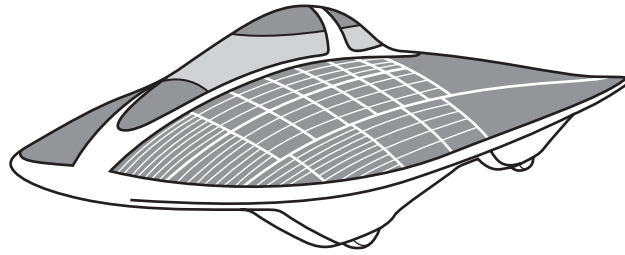


Fig. 5.1

(a) Calculate the average speed of the vehicle in km/hr.

State any formula that you use and show your working.

formula

working

..... km/hr [2]

(b) Fig. 5.2 shows a speed/time graph for part of the journey.

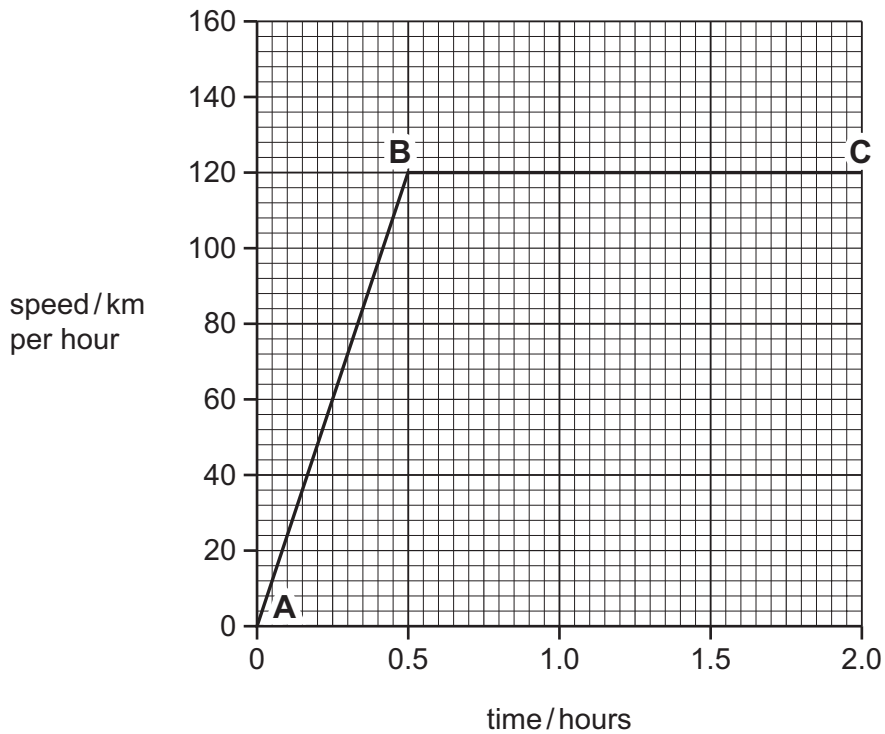


Fig. 5.2

(i) Describe the movement of the vehicle between **A** and **B**.

..... [1]

(ii) Calculate the distance travelled between **B** and **C**.

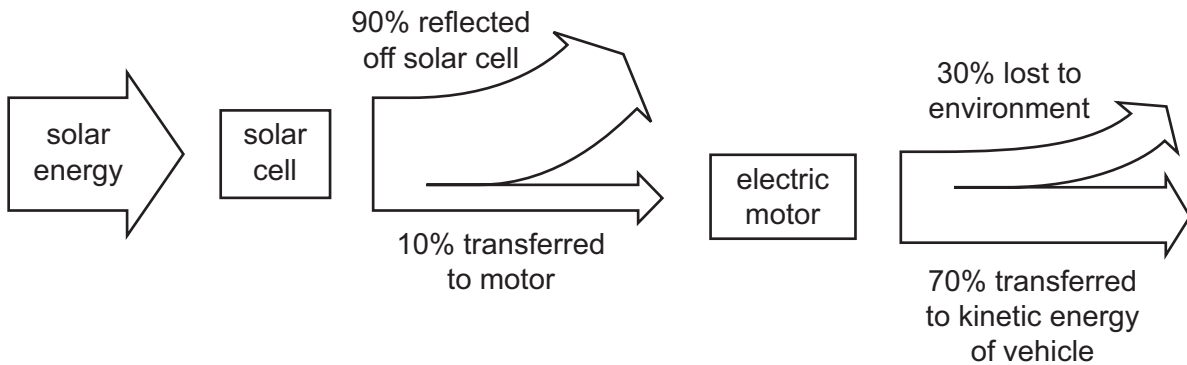
State the formula that you use and show your working.

formula

working

..... km [2]

(c) Fig. 5.3 shows the energy flow diagram for the solar-powered vehicle.



**Fig. 5.3**

(i) During part of the journey, the **solar cell** receives 1 000 000 joules of solar energy.

Calculate the number of joules transferred as kinetic energy to the **vehicle**.

Show your working.

..... J [2]

(ii) Write down the useful energy change which occurs in an electric motor.

..... energy to ..... energy [1]

(d) Solar energy is a renewable energy source.

(i) Name **one** other renewable energy source.

..... [1]

(ii) Describe **one** advantage to the environment of using solar energy as a renewable energy source.

.....  
..... [1]

(e) The vehicle has mirrors to help the driver see behind him. The driver sees a car in his mirror as shown on Fig. 5.4.

Use Fig. 5.4 to describe **two** characteristics of an image seen in this mirror that are similar to the characteristics of an image seen in a plane mirror.




Fig. 5.4

1 .....

2 .....

..... [2]

(f) Sunlight can be focused onto smaller areas of a solar panel to improve its efficiency.

Fig. 5.5 shows two parallel rays of sunlight being focused by a lens. The lens has a focal length of 5 cm.

Complete the diagram to show the rays of sunlight being focused by the lens.

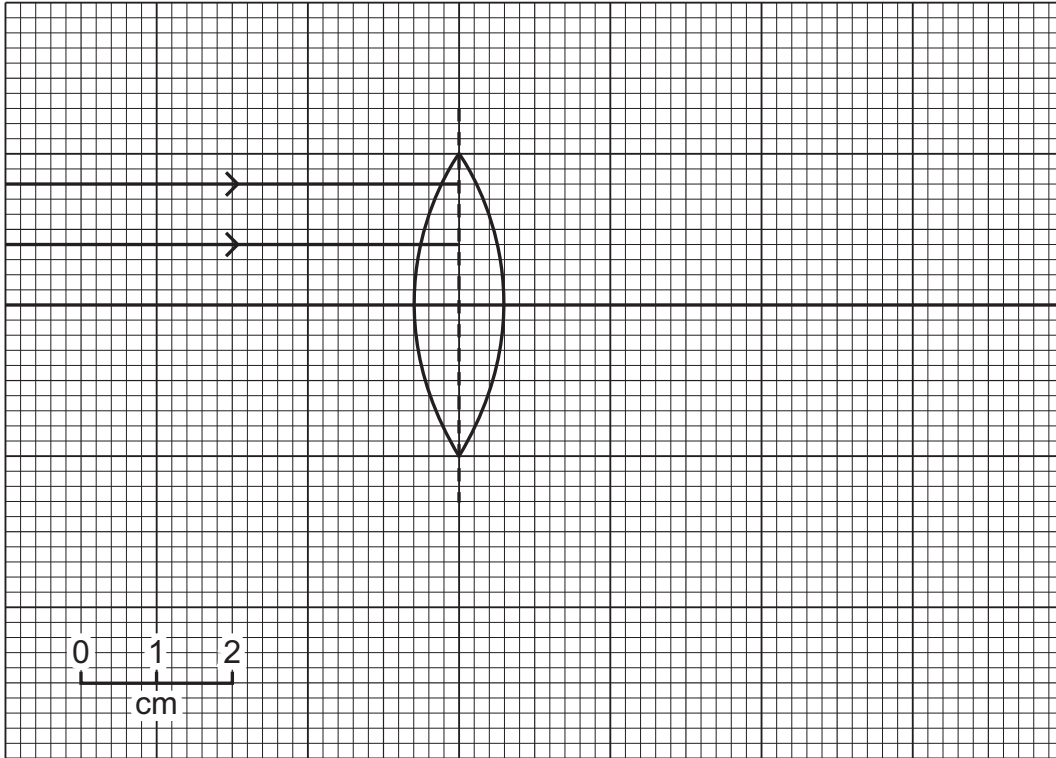


Fig. 5.5

[2]

For  
Examiner's  
Use

6 Fig. 6.1 shows a section through the heart.

For  
Examiner's  
Use

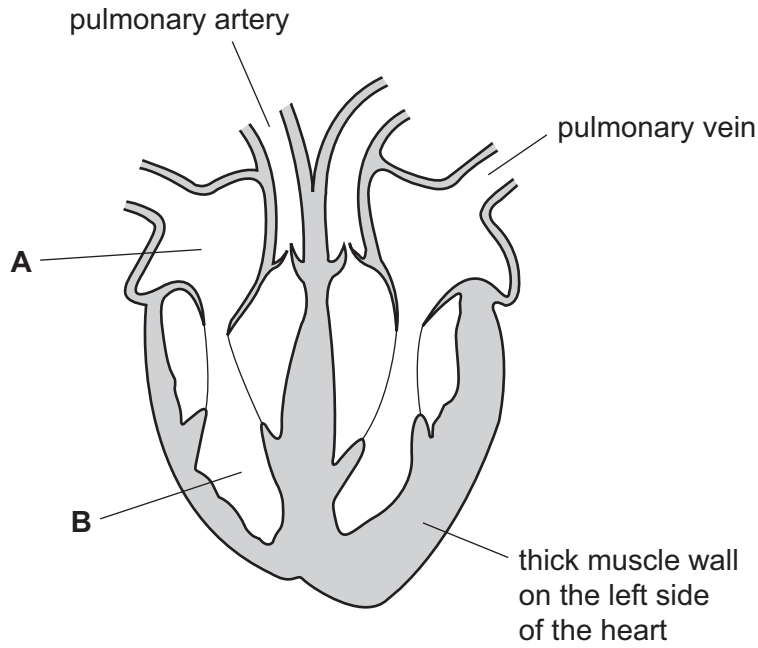


Fig. 6.1

(a) (i) Name the parts labelled **A** and **B**.

**A** .....

**B** ..... [2]

(ii) The walls of the heart are made of muscle.

Explain how this muscle pushes blood out of the heart.

.....  
.....  
..... [2]

(iii) Explain why the muscle wall on the left side of the heart, labelled on Fig. 6.1, is thicker than on the right side.

.....  
.....  
..... [2]



(b) (i) Describe **two** differences between the contents of a pulmonary artery and a pulmonary vein.

1 .....

.....

2 .....

..... [2]

(ii) Describe **two** differences between the structure of the wall of a pulmonary artery and the wall of a pulmonary vein.

1 .....

.....

2 .....

..... [2]

*For  
Examiner's  
Use*

7 Zirconium is a metallic element found in Period 5 of the Periodic Table.

(a) Zirconium metal is made into several different types of alloy.

State the meaning of the term *alloy*.

.....  
..... [1]

(b) A large piece of zirconium does not burn in air but zirconium powder burns rapidly, forming zirconium oxide.

(i) Suggest the **word** chemical equation for the reaction that occurs when zirconium burns in air.

..... [1]

(ii) The mass of zirconium oxide formed is greater than the mass of zirconium burned.

Explain this in terms of atoms.

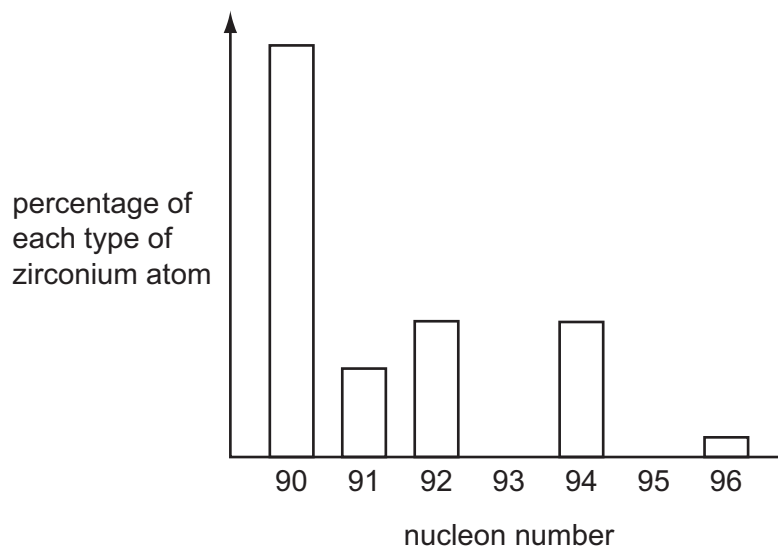
.....  
.....  
..... [2]

(iii) Suggest why zirconium powder burns rapidly but a large piece of zirconium does not.

.....  
.....  
..... [2]

(c) Fig. 7.1 shows information about five different types of zirconium atoms.

For  
Examiner's  
Use



**Fig. 7.1**

(i) Use the Periodic Table on page 32 to find the proton number of zirconium.

proton number of zirconium = ..... [1]

(ii) Complete Table 7.1 showing the numbers of protons and neutrons in two of the zirconium atoms in Fig. 7.1.

**Table 7.1**

atom	number of protons	number of neutrons
Zr-90		
Zr-96		

[2]

(iii) State the scientific word that is used to refer to atoms of the same element that have different numbers of neutrons.

..... [1]

8 (a) Complete Table 8.1 below by drawing the circuit symbol for each electrical component.

For  
Examiner's  
Use

Table 8.1

name of component	circuit symbol
open switch	
resistor	
voltmeter	
fuse	

[2]

(b) Fig. 8.1 shows an electrical hazard.

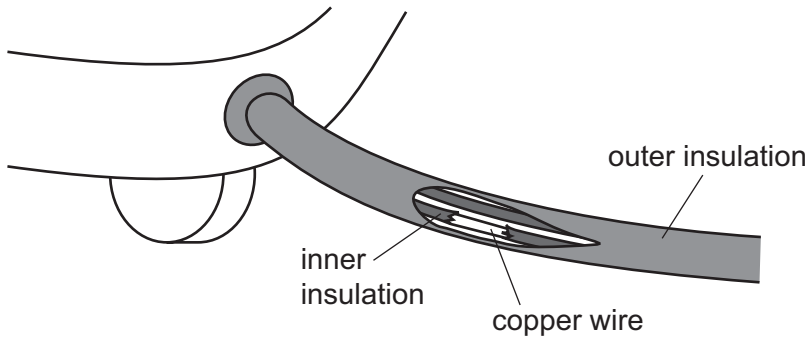


Fig. 8.1

State the hazard.

.....  
.....

Explain why this situation is dangerous.

.....  
.....

[2]

(c) In the circuit shown in Fig. 8.2 the reading on ammeter  $A_3$  is 0.5 A.

(i) State the current readings on ammeters  $A_1$  and  $A_2$ .

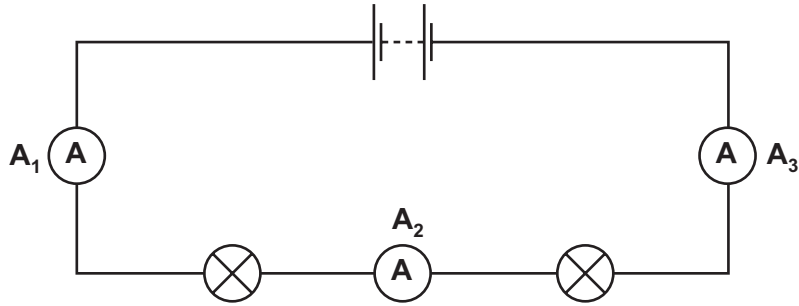


Fig. 8.2

$A_1$  ..... A

$A_2$  ..... A

[1]

(ii) Each lamp in the circuit has a resistance of  $5\ \Omega$ .

Calculate the combined resistance of the two lamps in the circuit.

State the formula that you use and show your working.

formula

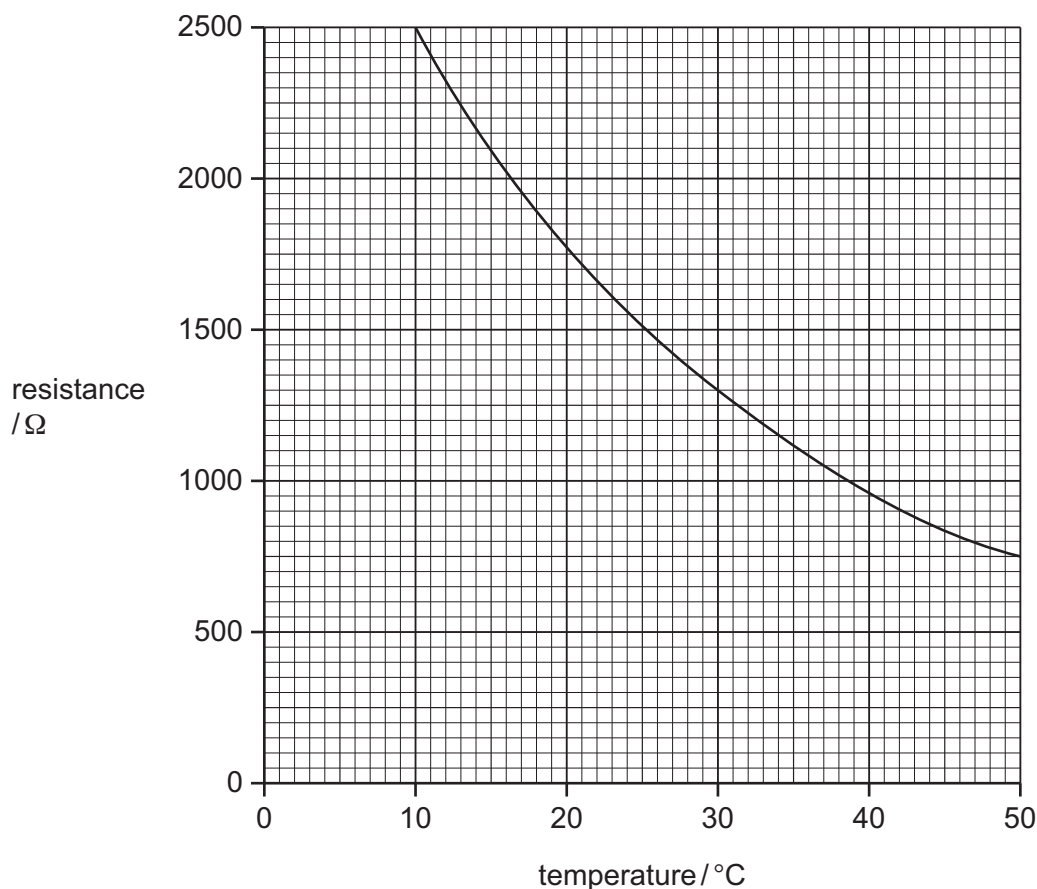
working

.....  $\Omega$  [2]

For  
Examiner's  
Use

- (d) Fig. 8.3 shows how the resistance of an electrical component in a circuit changes with temperature.

For  
Examiner's  
Use



**Fig. 8.3**

- (i) Write down the equation that shows how resistance is related to potential difference and current. .... [1]
- (ii) State the resistance of the component at  $30^{\circ}\text{C}$ . .....  $\Omega$  [1]
- (iii) Calculate the current that passes through the component at  $30^{\circ}\text{C}$  when it is connected to a 12 V power supply.

Show your working.

..... A [2]

**Please turn over for Question 9.**

- 9 Chinchillas are mammals with thick grey fur. Chinchillas are often kept as pets.

For  
Examiner's  
Use



People try to breed chinchillas with unusual fur.

- (a) A rare allele of the gene that determines fur colour, **A**, is dominant to the normal allele, **a**. Table 9.1 shows the possible fur colours arising from these two alleles.

**Table 9.1**

genotype	colour
<b>AA</b>	zygote does not develop
<b>Aa</b>	white
<b>aa</b>	normal grey

- (i) State the biological term for the observed effect produced by the genotype.

..... [1]

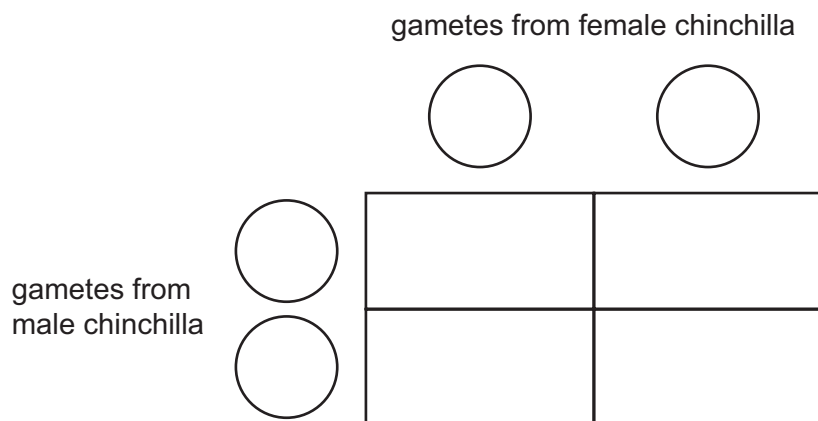


(ii) A breeder has two white chinchillas.

Complete the genetic diagram to show the genotypes of the offspring that would be produced when these two chinchillas are bred together.

genotype of parents ..... and .....

gametes  and   and 



[3]

(iii) State the ratio of fur colour that you would expect in the offspring resulting from this cross.

Explain your answer.

ratio of normal grey fur : white fur = ..... : .....

explanation .....

..... [2]

(b) Wild chinchillas live in rocky places in the Andes mountains, where it gets cold at night.

For  
Examiner's  
Use

(i) Suggest how the chinchilla's fur can help it to maintain a constant body temperature.

.....  
.....  
..... [2]

(ii) Suggest why almost all the chinchillas found in the wild have normal grey fur colour rather than white fur.

.....  
.....  
..... [2]

10 Ethene,  $C_2H_4$ , is a gaseous, unsaturated hydrocarbon.

(a) Explain the meanings of both words in the term *unsaturated hydrocarbon*.

.....

.....

.....

..... [2]

(b) A sample of ethene was bubbled through bromine solution.

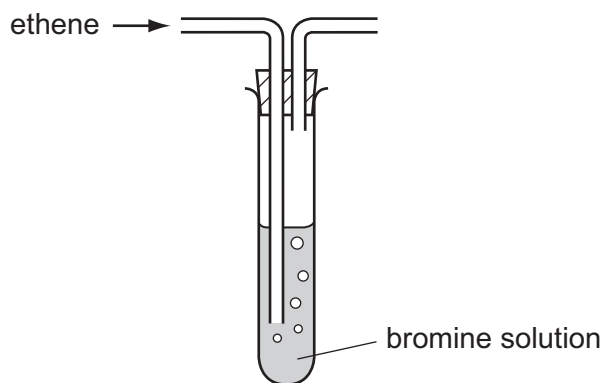


Fig. 10.1

Describe the colour change that is observed when ethene reacts with bromine.

from ..... to ..... [1]

For  
Examiner's  
Use

- (c) Propane,  $C_3H_8$ , is a gaseous hydrocarbon used as a fuel.

Fig. 10.2 shows a cross-section through a small furnace (kiln) in which items of pottery are being heated by a propane burner. The temperature inside the kiln is  $950^\circ C$ .

For  
Examiner's  
Use

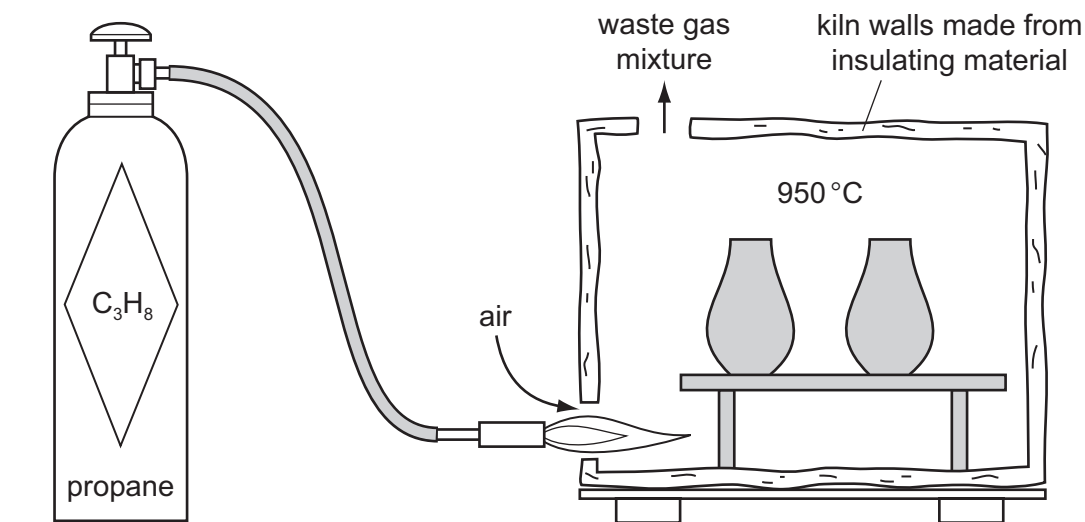


Fig. 10.2

- (i) State which information from Fig. 10.2 shows that the combustion of propane is exothermic.

Explain your answer.

.....  
 .....  
 ..... [2]

- (ii) Explain why the waste gas mixture contains high concentrations of carbon dioxide and water vapour.

.....  
 ..... [1]

- (iii) The waste gases may also contain some carbon monoxide.

Suggest a reason for this.

.....  
 ..... [1]

- (iv) Explain why it is much safer to use a kiln like the one in Fig. 10.2 outside in the open air.

.....  
 ..... [1]

11 X-rays and  $\gamma$ (gamma)–rays are both forms of electromagnetic radiation. They are also both forms of ionising radiation and are used in the treatment of cancer.

For  
Examiner's  
Use

(a) State the meaning of the term *ionising radiation*.

.....  
..... [1]

(b) Name the radiation that comes between X-rays and visible light in the electromagnetic spectrum. Give **one** use for this radiation.

radiation .....

use .....

..... [2]

(c) (i) Electromagnetic waves are transverse waves. Water waves are also transverse.

Draw a diagram of a transverse wave on the axes below.

Label the amplitude and wavelength on your diagram.



[3]

(ii) Sound waves are **not** transverse waves.

State the type of wave motion demonstrated by sound waves.

..... [1]

12 (a) Fig. 12.1 shows a plant cell.

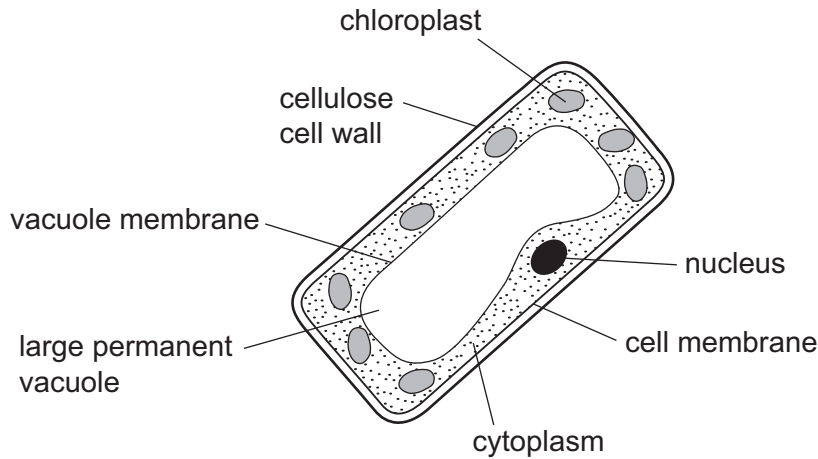


Fig. 12.1

(i) Name the tissue in the leaf in which this type of cell is found.

..... [1]

(ii) Describe how photosynthesis is carried out in this cell.

.....

.....

.....

.....

.....

.....

..... [3]

(b) About one tenth of the Earth's surface is covered by forests in which much photosynthesis takes place.

Explain how extensive deforestation could harm the environment.

.....

.....

.....

.....

.....

..... [3]



**DATA SHEET**  
**The Periodic Table of the Elements**

		Group											
		I	II	III	IV	V	VI	VII	VIII	IX	X	XI	
		1 <b>H</b> Hydrogen 1											
7	9	2 <b>He</b> Helium 2											
3	4	7	8	9	10	11	12	13	14	15	16	17	18
<b>Li</b> Lithium	<b>Be</b> Beryllium	<b>B</b> Boron	<b>C</b> Carbon	<b>N</b> Nitrogen	<b>O</b> Oxygen	<b>F</b> Fluorine	<b>Ne</b> Neon	<b>Al</b> Aluminium	<b>Si</b> Silicon	<b>P</b> Phosphorus	<b>S</b> Sulfur	<b>Cl</b> Chlorine	<b>Ar</b> Argon
11	12	13	14	15	16	17	18	19	20	21	22	23	24
<b>Na</b> Sodium	<b>Mg</b> Magnesium	<b>Al</b> Aluminium	<b>Si</b> Silicon	<b>P</b> Phosphorus	<b>S</b> Sulfur	<b>Cl</b> Chlorine	<b>Ar</b> Argon	<b>K</b> Potassium	<b>Ca</b> Calcium	<b>Sc</b> Scandium	<b>Ti</b> Titanium	<b>V</b> Vanadium	<b>Cr</b> Chromium
19	20	21	22	23	24	25	26	27	28	29	30	31	32
<b>K</b> Potassium	<b>Ca</b> Calcium	<b>Sc</b> Scandium	<b>Ti</b> Titanium	<b>V</b> Vanadium	<b>Cr</b> Chromium	<b>Mn</b> Manganese	<b>Fe</b> Iron	<b>Co</b> Cobalt	<b>Ni</b> Nickel	<b>Cu</b> Copper	<b>Zn</b> Zinc	<b>Ga</b> Gallium	<b>Ge</b> Germanium
37	38	39	40	41	42	43	44	45	46	47	48	49	50
<b>Rb</b> Rubidium	<b>Sr</b> Strontium	<b>Y</b> Yttrium	<b>Zr</b> Zirconium	<b>Nb</b> Niobium	<b>Mo</b> Molybdenum	<b>Tc</b> Technetium	<b>Ru</b> Ruthenium	<b>Rh</b> Rhodium	<b>Pd</b> Palladium	<b>Ag</b> Silver	<b>Cd</b> Cadmium	<b>In</b> Indium	<b>Sn</b> Tin
55	56	57	58	59	60	61	62	63	64	65	66	67	68
<b>Cs</b> Caesium	<b>Ba</b> Barium	<b>La</b> Lanthanum	<b>Hf</b> Hafnium	<b>Ta</b> Tantalum	<b>W</b> Tungsten	<b>Re</b> Rhenium	<b>Os</b> Osmium	<b>Ir</b> Iridium	<b>Pt</b> Platinum	<b>Au</b> Gold	<b>Hg</b> Mercury	<b>Tl</b> Thallium	<b>Pb</b> Lead
87	88	89	90	91	92	93	94	95	96	97	98	99	100
<b>Fr</b> Francium	<b>Ra</b> Radium	<b>Ac</b> Actinium	<b>Th</b> Thorium	<b>Pa</b> Protactinium	<b>U</b> Uranium	<b>Np</b> Neptunium	<b>Pu</b> Plutonium	<b>Am</b> Americium	<b>Cm</b> Curium	<b>Bk</b> Berkelium	<b>Cf</b> Californium	<b>Es</b> Einsteinium	<b>Fm</b> Fermium
103	104	105	106	107	108	109	110	111	112	113	114	115	116
<b>Lr</b> Lawrencium	<b>Rf</b> Rutherfordium	<b>Db</b> Dubnium	<b>Sg</b> Seaborgium	<b>Bh</b> Bohrium	<b>Hs</b> Hassium	<b>Mt</b> Meitnerium	<b>Ds</b> Darmstadtium	<b>Rg</b> Roentgenium	<b>Cn</b> Copernicium	<b>Nh</b> Nihonium	<b>Fl</b> Flerovium	<b>Mc</b> Moscovium	<b>Lv</b> Livermorium
121	122	123	124	125	126	127	128	129	130	131	132	133	134
<b>Uue</b> Ununennium	<b>Uub</b> Unbibium	<b>Uut</b> Ununtrium	<b>Uuq</b> Ununquadium	<b>Uup</b> Ununpentium	<b>Uuq</b> Ununhexium	<b>Uus</b> Ununseptium	<b>Uuq</b> Ununoctium	<b>Uuh</b> Ununhennium	<b>Uuu</b> Ununium	<b>Uuq</b> Ununquadrum	<b>Uup</b> Ununpentium	<b>Uus</b> Ununseptium	<b>Uuq</b> Ununoctium
151	152	153	154	155	156	157	158	159	160	161	162	163	164
<b>Uut</b> Ununtrium	<b>Uuq</b> Ununquadium	<b>Uup</b> Ununpentium	<b>Uuq</b> Ununhexium	<b>Uus</b> Ununseptium	<b>Uuq</b> Ununoctium	<b>Uuh</b> Ununhennium	<b>Uuu</b> Ununium	<b>Uuq</b> Ununquadrum	<b>Uup</b> Ununpentium	<b>Uus</b> Ununseptium	<b>Uuq</b> Ununoctium	<b>Uuh</b> Ununhennium	<b>Uuu</b> Ununium
171	172	173	174	175	176	177	178	179	180	181	182	183	184
<b>Uue</b> Ununennium	<b>Uub</b> Unbibium	<b>Uut</b> Ununtrium	<b>Uuq</b> Ununquadium	<b>Uup</b> Ununpentium	<b>Uuq</b> Ununhexium	<b>Uus</b> Ununseptium	<b>Uuq</b> Ununoctium	<b>Uuh</b> Ununhennium	<b>Uuu</b> Ununium	<b>Uuq</b> Ununquadrum	<b>Uup</b> Ununpentium	<b>Uus</b> Ununseptium	<b>Uuq</b> Ununoctium

\*58-71 Lanthanoid series  
†90-103 Actinoid series

Key  

a	<b>X</b>
b	

  
a = relative atomic mass  
X = atomic symbol  
b = proton (atomic) number

The volume of one mole of any gas is 24 dm<sup>3</sup> at room temperature and pressure (r.t.p.).

Permission to reproduce items where third-party owned material protected by copyright is included has been sought and cleared where possible. Every reasonable effort has been made by the publisher (UCLES) to trace copyright holders, but if any items requiring clearance have unwittingly been included, the publisher will be pleased to make amends at the earliest possible opportunity.

University of Cambridge International Examinations is part of the Cambridge Assessment Group. Cambridge Assessment is the brand name of University of Cambridge Local Examinations Syndicate (UCLES), which is itself a department of the University of Cambridge.