

CANDIDATE
NAME

CENTRE
NUMBER

| | | | | | |
|--|--|--|--|--|--|
| | | | | | |
|--|--|--|--|--|--|

CANDIDATE
NUMBER

| | | | | |
|--|--|--|--|--|
| | | | | |
|--|--|--|--|--|



TRAVEL AND TOURISM

0471/01

Core Module

May/June 2015

2 hours

Candidates answer on the Question Paper.

No Additional Materials are required.

READ THESE INSTRUCTIONS FIRST

Write your Centre number, candidate number and name on all the work you hand in.

Write in dark blue or black pen.

You may use an HB pencil for any diagrams or graphs.

Do not use staples, paper clips, glue or correction fluid.

DO NOT WRITE IN ANY BARCODES.

Answer **all** questions.

All the Figures referred to in the questions are contained in the Insert.

At the end of the examination, fasten all your work securely together.

The number of marks is given in brackets [] at the end of each question or part question.

This document consists of **14** printed pages, **2** blank pages and **1** insert.

Question 1

Refer to Fig. 1 (Insert), a map showing some of the world's major features and selected destinations.

(a) Using Fig. 1 (Insert), complete the following table by naming each feature.

| Feature | Name |
|-------------|------|
| Continent A | |
| Continent B | |
| Ocean C | |

[3]

(b) State the following:

- the term that best describes the climatic conditions in Egypt along the course of the River Nile

.....

- whether July in Cape Town is high or low season

.....

- whether local time in Dubai is in advance of or behind local time in Beijing

.....

- whether Los Angeles is east or west of the International Date Line

.....[4]



(c) Tourism in many areas of the world is at risk from natural hazards. Explain how the following can influence tourism:

- hurricanes

.....

.....

.....

.....

- volcanic eruptions

.....

.....

.....

.....

- climate change

.....

.....

.....

.....[6]

(d) Many rivers, such as the River Nile in Egypt, are used by river cruise operators.

Explain **three** ways in which river cruises appeal to leisure tourists.

- 1
.....
.....
.....


 - 2
.....
.....
.....

 - 3
.....
.....
-[6]

(e) Discuss the ways in which **one** area of inland water with which you are familiar has been developed for tourism purposes.

Chosen area of inland water
.....
.....
.....
.....
.....
.....
.....
.....
.....
.....
.....
.....
.....
.....
.....
.....
.....
.....
.....
.....[6]

[Total: 25]



Question 2

Refer to Fig. 2 (Insert), a review of world tourism in 2012.

(a) Identify from Fig. 2 (Insert) the **three** purposes of travel that accounted for 27% of overnight tourism visits in 2012.

- 1
- 2
- 3[3]

(b) With reference to Fig. 2 (Insert), describe the relationship ‘between the two key indicators used in monitoring international tourism trends’.

.....

.....

.....

.....

.....

.....

.....

.....

.....[4]



(c) France was the most visited destination in 2012.

Explain how **each** of the following might account for the large number of visitors:

- France's central position in Western Europe

.....
.....
.....
.....

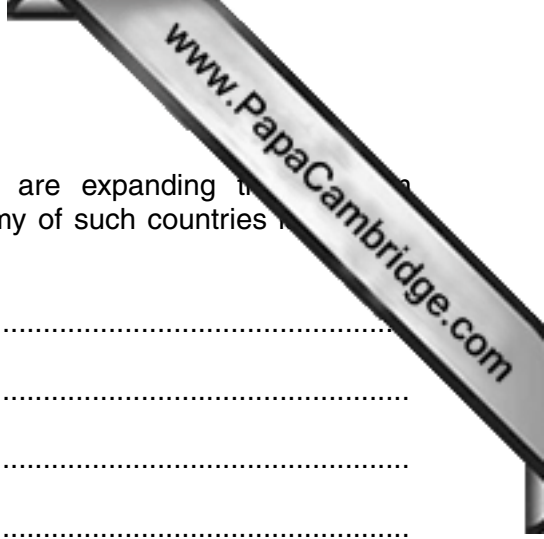
- the expansion of low-cost budget air routes

.....
.....
.....
.....

- the Euro being the main currency throughout Europe

.....
.....
.....
.....

[6]



(d) Many Less Economically Developed Countries (LEDCs) are expanding their primary industries. Explain **three** ways in which the national economy of such countries might benefit from the development of tourism.

1

.....

.....

.....

2

.....

.....

.....

3

.....

.....

.....

.....[6]

(e) With reference to **one** destination with which you are familiar, assess the main threats to the future development of tourism.

Chosen destination

.....

.....

.....

.....

.....

.....

.....

.....

.....

.....

.....

.....

.....

.....

.....

.....

.....

.....[6]

[Total: 25]

[Turn over



Question 3

Refer to Photographs A and B (Insert), taken at international airports.

- (a) Photograph A (Insert), shows passengers checking in for their flight. Describe briefly the checking in process.

.....

.....

.....

.....

.....

.....

.....

.....

.....[3]

- (b) Explain the purpose of **two** security checks that passengers are likely to experience **after** they have checked in for their flight.

1

.....

.....

.....

.....

2

.....

.....

.....

.....

.....

.....[4]

(c) Some passengers will use the currency exchange facility shown in Photograph B


Explain the purpose served by **each** of the following:

- the display screen

.....
.....
.....
.....

- the reduced height service counter

.....
.....
.....
.....[4]





(d) Other than currency exchange, state **four** services provided by major airports how **each** meets the needs of **outbound** international travellers.

1

.....

.....

.....

2

.....

.....

.....

3

.....

.....

.....


4

.....

.....

.....

[8]



Question 4

Refer to Fig. 3 (Insert), information for staff working for Carnival UK, a cruise company based in the UK.

(a) Identify from Fig. 3 (Insert) the following:

- the **two** cruise lines operated by Carnival UK

1

2

- the organisation Carnival UK worked with when developing its recruitment process

.....[3]

(b) Explain **two** benefits to Carnival UK's customers of the company making all employment offers 'subject to the disclosure of criminal records and vetting checks'.

1

.....

.....

.....

2

.....

.....

.....[4]



(c) Carnival UK’s various cruise staff will be given training so that the company ‘world-class customer experiences’.

For **each** of the following members of staff, suggest a type of training that will be appropriate and give a reason for your choice:

- **swimming pool lifeguard**

type of training

reason

.....

- **kitchen assistant**

type of training

reason

.....

- **babysitter**

type of training

reason

.....[6]

Permission to reproduce items where third-party owned material protected by copyright is included has been sought and cleared where possible. Every reasonable effort has been made by the publisher (UCLES) to trace copyright holders, but if any items requiring clearance have unwittingly been included, the publisher will be pleased to make amends at the earliest possible opportunity.

To avoid the issue of disclosure of answer-related information to candidates, all copyright acknowledgements are reproduced online in the Cambridge International Examinations Copyright Acknowledgements Booklet. This is produced for each series of examinations and is freely available to download at www.cie.org.uk after the live examination series.

Cambridge International Examinations is part of the Cambridge Assessment Group. Cambridge Assessment is the brand name of University of Cambridge Local Examinations Syndicate (UCLES), which is itself a department of the University of Cambridge.