

**OXFORD CAMBRIDGE AND RSA EXAMINATIONS
GCSE
B742/02**

**GATEWAY SCIENCE
CHEMISTRY B**

**Chemistry modules C4, C5, C6
(Higher Tier)**

MONDAY 15 JUNE 2015: Morning

**DURATION: 1 hour 30 minutes
plus your additional time allowance
MODIFIED ENLARGED 24pt**

| | | | | | | | | | | |
|-------------------------------|--|--|--|--|--|------------------------------|--|--|--|--|
| Candidate forename | | | | | | Candidate surname | | | | |
| Centre number | | | | | | Candidate number | | | | |

**Candidates answer on the Question Paper.
A calculator may be used for this paper.**

**OCR SUPPLIED MATERIALS:
A copy of the Periodic Table**

**OTHER MATERIALS REQUIRED:
Pencil
Ruler (cm/mm)**

READ INSTRUCTIONS OVERLEAF

INSTRUCTIONS TO CANDIDATES

Write your name, centre number and candidate number in the boxes on the first page. Please write clearly and in capital letters.

Use black ink. HB pencil may be used for graphs and diagrams only.

Answer ALL the questions.

Read each question carefully. Make sure you know what you have to do before starting your answer.

Write your answer to each question in the space provided. Additional paper may be used if necessary but you must clearly show your candidate number, centre number and question number(s).

INFORMATION FOR CANDIDATES

Your quality of written communication is assessed in questions marked with a pencil (.

The number of marks is given in brackets [] at the end of each question or part question.

The total number of marks for this paper is 85.

Any blank pages are indicated.

BLANK PAGE

Answer ALL the questions.

SECTION A – Module C4

1 Look at the electronic structures of some atoms.

| Atom | Electronic structure |
|-------------|-----------------------------|
| W | 2.8.1 |
| X | 2.8.4 |
| Y | 2.8.7 |
| Z | 2.8.8 |

(a) (i) One of the atoms is a metal which makes a positive ion.

Which one? Choose from the table.

answer _____ [1]

(ii) One of the atoms has a stable electronic structure and is unreactive.

Which one? Choose from the table.

answer _____ [1]

(iii) Two of the atoms can combine together by TRANSFERRING electrons to form an IONIC bond.

Which two? Choose from the table.

_____ and _____ [1]

(b) Ammonia has the formula, NH_3 .

The electronic structure of nitrogen is 2.5.

The electronic structure of hydrogen is 1.

Draw a 'dot and cross' diagram to show the COVALENT bonding in ammonia.

Show all the electrons.

[2]

(c) Sodium chloride is an IONIC compound.

Sodium chloride

will not conduct electricity when it is a solid

will conduct electricity when it is dissolved in water.

Explain these two observations in terms of structure and bonding.

[2]

2 Look at the information about a chlorine atom and an oxide ion.



(a) Complete the table to show the number of protons, neutrons and electrons in each particle.

Two have been done for you.

| | Chlorine atom, Cl | Oxide ion, O ²⁻ |
|---------------------|-------------------|----------------------------|
| Number of protons | | 8 |
| Number of neutrons | | |
| Number of electrons | 17 | |

[3]

(b) Many scientists have helped in the development of the theory of atomic structure.

Two of these scientists were J. J. Thomson and Niels Bohr.

Describe what J. J. Thomson and Niels Bohr contributed to the theory of atomic structure.

J. J. Thomson _____

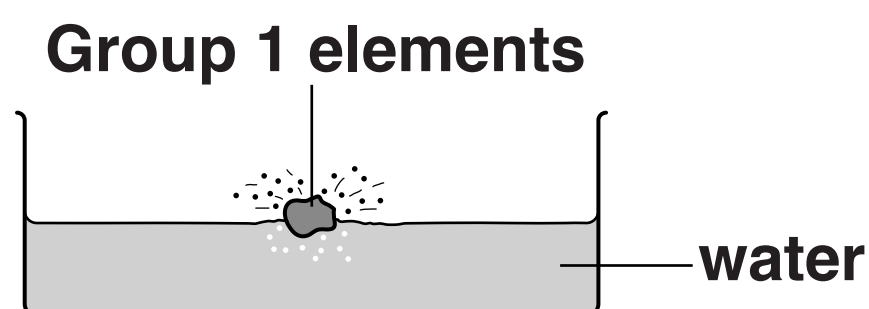
Niels Bohr _____

[2]

3 This question is about the reaction of Group 1 elements with water.

Lithium, sodium and potassium are Group 1 elements.

They all react with water.



Look at the table.

| Group 1 element | Time for 0.5 g of metal to react in seconds | Observations |
|------------------------|--|---|
| sodium | 15 | melts moves across surface of water makes a gas which burns with a 'pop' makes an alkaline solution |
| potassium | 7 | melts and catches fire moves quickly across surface of water makes a gas which burns with a 'pop' makes an alkaline solution |
| lithium | 25 | moves slowly across surface of water makes a gas which burns with a 'pop' makes an alkaline solution |

4 This question is about substances that are found in different types of water.

(a) River water contains dissolved substances.

River water has to be purified before it can be drunk.

The water purification process has three stages.

These are

filtration

sedimentation

chlorination.

Pollutants such as fertilisers are still in the water after this purification.

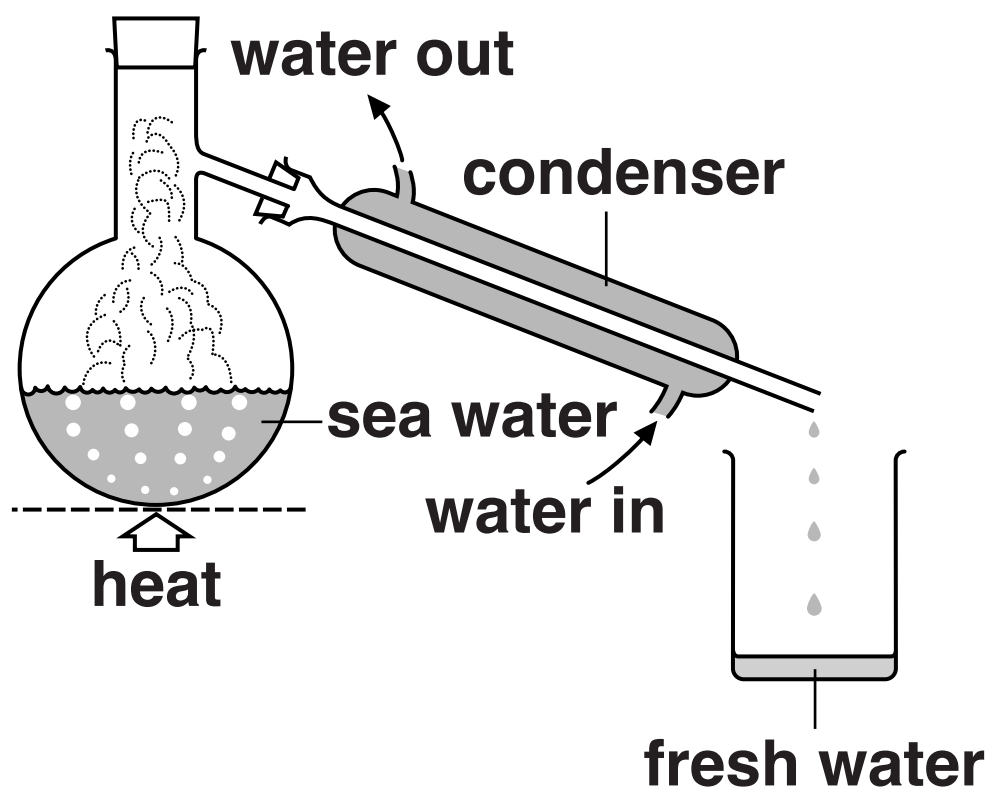
Explain why.

[1]

(b) Sea water can be made into drinking water.

One way this can be done is by DISTILLATION.

Look at the diagram. It shows the apparatus used to distil water in the laboratory.



Explain the DISADVANTAGES of using distillation to make LARGE AMOUNTS of drinking water.

[2]

(c) Pete analyses two samples.

Look at Pete's results.

| Sample | Addition of sodium hydroxide solution | Addition of barium chloride solution |
|---------------|--|---|
| A | blue solid made | white solid made |
| B | brown solid made | no reaction |

Pete thinks that sample A is copper sulfate.

He thinks that sample B is iron(III) sulfate.

Is Pete right about EACH sample?

Explain your answer.

[4]

SECTION B – Module C5

5 Space probes have been sent to Mars to analyse the soil.

One compound analysed has the formula $\text{Ca}(\text{ClO}_4)_2$.

(a) Calculate the molar mass of $\text{Ca}(\text{ClO}_4)_2$.

The relative atomic mass, A_r , of O = 16,
of Cl = 35.5 and of Ca = 40.

molar mass _____ g/mol [1]

(b) A compound with the formula K_2FeO_4 has also been discovered on Mars.

A sample of K_2FeO_4 is analysed.

The 1.00 g sample contains 0.39 g of potassium and 0.28 g of iron.

Calculate the percentage by mass of oxygen in this sample of K_2FeO_4 .

percentage by mass = _____ % [2]

- (c) Another compound found on Mars has the molecular formula C_4H_{10} .

What is the EMPIRICAL formula for this compound?

[1]

- (d) Another compound found on Mars contains iron and oxygen.

The compound contains 70% by mass of iron and 30% by mass of oxygen.

Calculate the empirical formula of this compound.

The relative atomic mass, A_r , of O = 16
and of Fe = 56.

empirical formula is _____

[3]

6 This question is about acids.

**Nitric acid, HNO_3 , is a strong acid
and propanoic acid, $\text{C}_2\text{H}_5\text{COOH}$, is a weak acid.**

**David investigates the reaction of both of these acids with
calcium carbonate.**

David does two experiments

the first with nitric acid

the second with propanoic acid.

**Each time he puts 50 cm^3 of 2.0 mol/dm^3 acid into a
conical flask.**

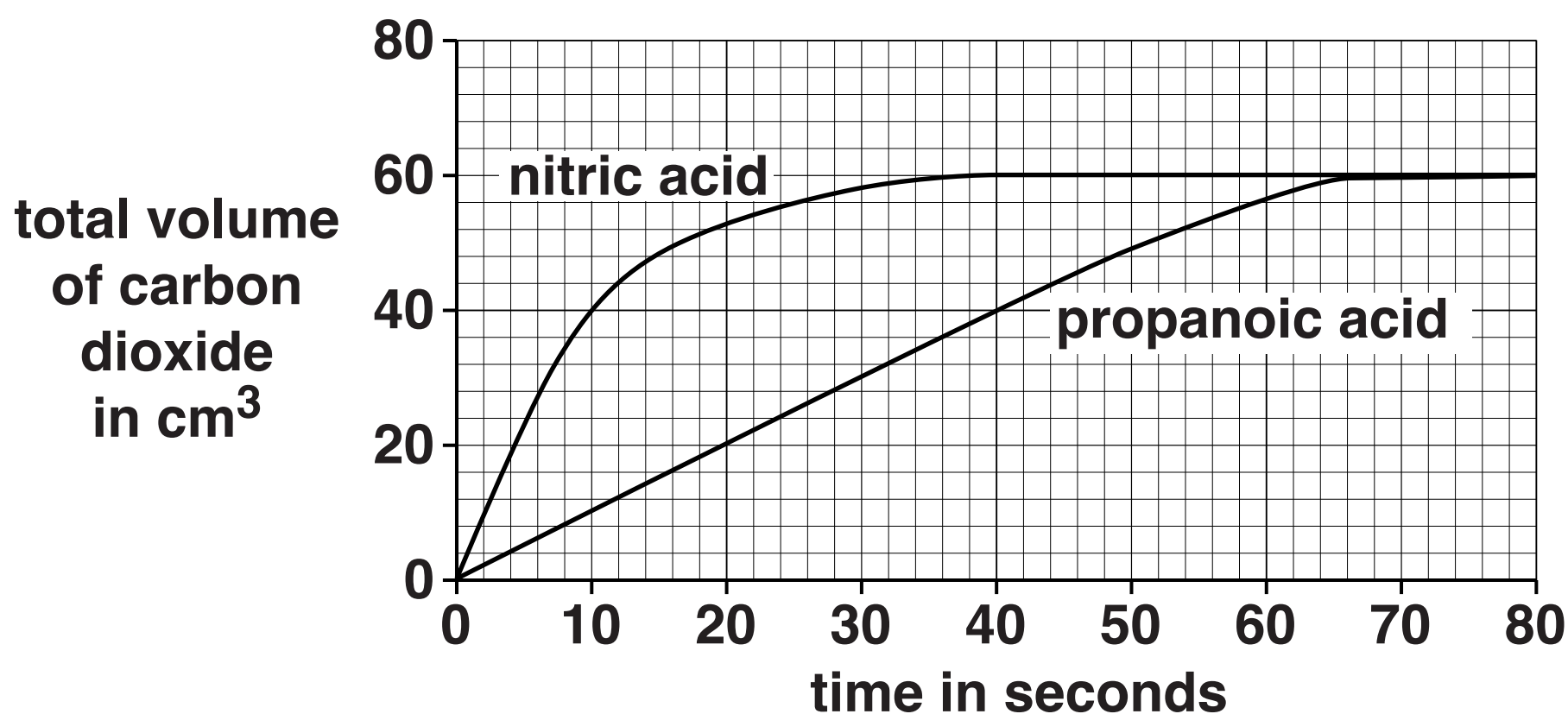
**He then adds the same mass of calcium carbonate to
each acid.**

**David measures the total volume of carbon dioxide made
every 10 seconds.**

**(a) Draw a labelled diagram of the apparatus David can use in
these experiments.**

[2]

(b) Look at the graph of David's results.



The two lines are different shapes because the strength of each acid is different.

Write about the difference between a strong and a weak acid and explain why the two lines are different. [6]



The quality of written communication will be assessed in your answer to this question.

- (c) Look at the balanced symbol equation for the reaction of calcium carbonate with nitric acid.



- (i) David's experiment with nitric acid makes 60 cm^3 of carbon dioxide at room temperature and pressure.

How many moles of carbon dioxide are made at the end of the reaction?

One mole of carbon dioxide has a volume of $24\,000\text{ cm}^3$ at room temperature and pressure.

moles of carbon dioxide = _____ [1]

- (ii) Calculate the mass of calcium carbonate needed to make this amount of carbon dioxide.

The relative formula mass, M_r , of calcium carbonate, CaCO_3 , is 100.

mass of calcium carbonate = _____ g [1]

7 In a closed system a reversible reaction will form an equilibrium mixture.

(a) Which of the following statements are true for a reversible reaction at EQUILIBRIUM?

Tick (✓) the TWO correct answers.

The rate of the forward reaction is faster than the rate of the backward reaction.

☐

The position of equilibrium will not change if more product is added.

☐

The concentration of the reactants does not change.

☐

The rate of the forward reaction is the same as the rate of the backward reaction.

☐

The concentration of the reactants is the same as the concentration of the products.

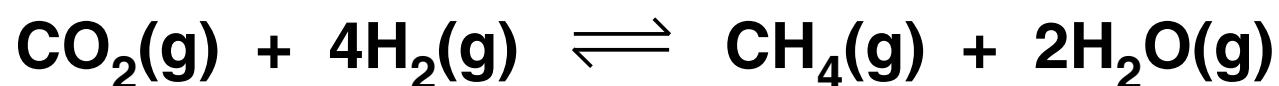
☐

The position of equilibrium moves to the left when product is removed from the equilibrium.

☐

[2]

(b) Methane is a fuel that can be made by the reaction between carbon dioxide and hydrogen.

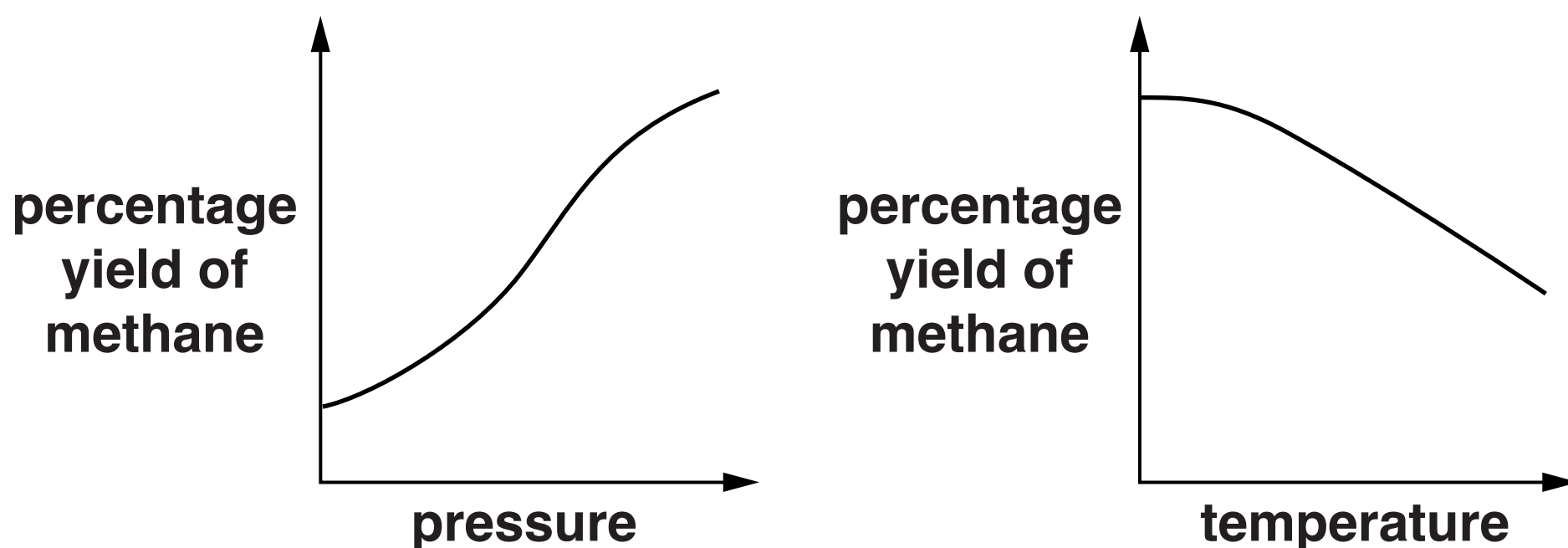


Paul predicts that

the reaction is exothermic

there are more moles of gas on the right-hand side of the equation.

Look at the two graphs.



Do the graphs support Paul's predictions?

Explain your answer.

[2]

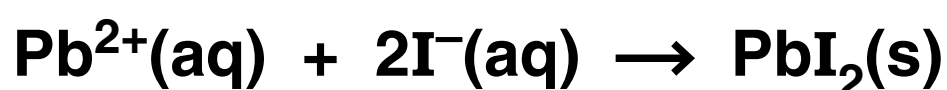
8 Sam researches different ways of making insoluble salts such as lead iodide.

In one reaction she adds potassium iodide solution to lead nitrate solution.

Potassium iodide solution contains $\text{K}^+(\text{aq})$ and $\text{I}^-(\text{aq})$.

Lead nitrate solution contains $\text{Pb}^{2+}(\text{aq})$ and $\text{NO}_3^-(\text{aq})$.

Look at the balanced ionic equation for the precipitation reaction.



(a) Explain why this precipitation reaction is extremely fast.

[1]

(b) In this reaction the $\text{K}^+(\text{aq})$ and the $\text{NO}_3^-(\text{aq})$ are called SPECTATOR IONS.

What is meant by a spectator ion?

[1]

(c) Sam publishes her results in a scientific journal.

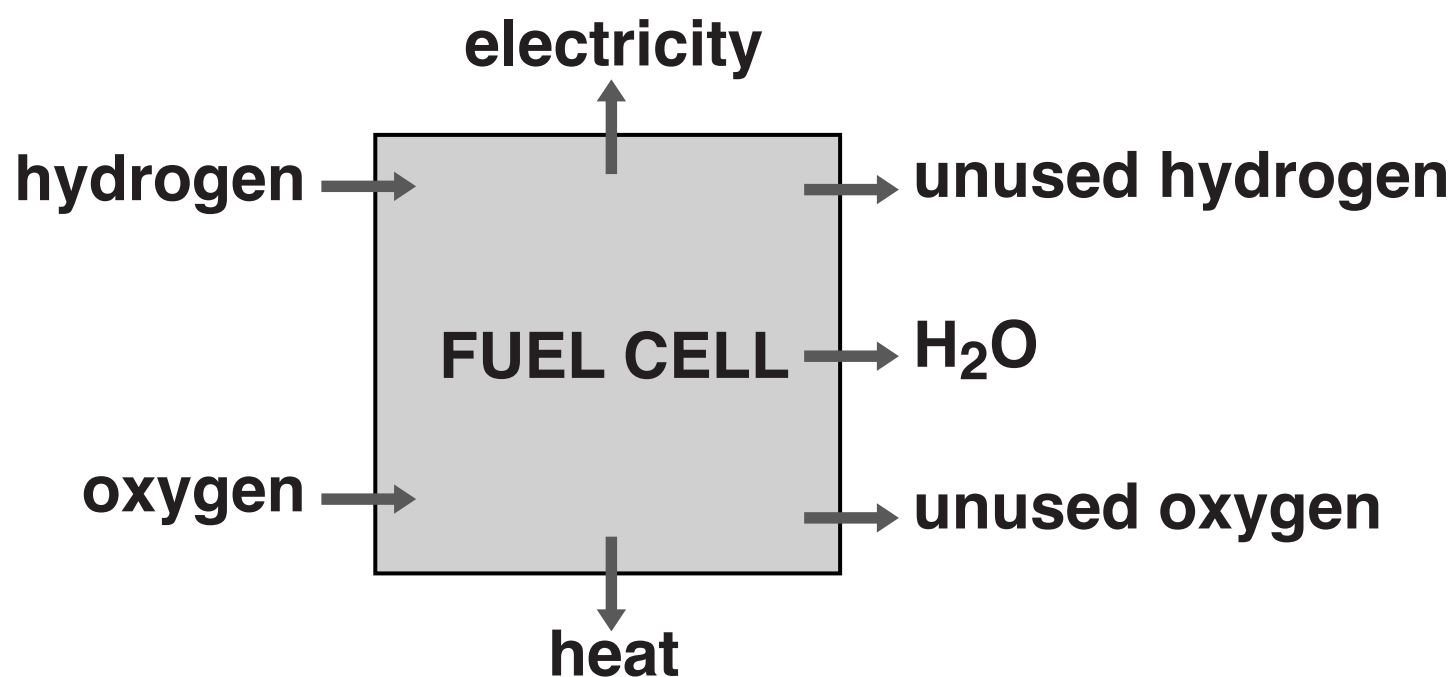
Explain how this can help her research.

[2]

SECTION C – Module C6

9 Fuel cells are used to make electricity.

Look at the diagram. It shows what happens in a fuel cell.



(a) In this fuel cell, hydrogen, H₂, reacts with oxygen, O₂.

Water, H₂O, is made.

Write a **BALANCED SYMBOL** equation for this reaction.

_____ [2]

(b) The reaction between hydrogen and oxygen is EXOTHERMIC.

Draw and label an energy level diagram for the reaction between hydrogen and oxygen.



[2]

(c) Fuel cells are used to provide electrical energy in spacecraft.

Write down one OTHER ADVANTAGE of using fuel cells in spacecraft.

_____ **[1]**

(d) Hydrogen-oxygen fuel cells produce water.

Water is not a pollutant.

Fuel cells still cause pollution.

Write down two ways that fuel cells can cause pollution.

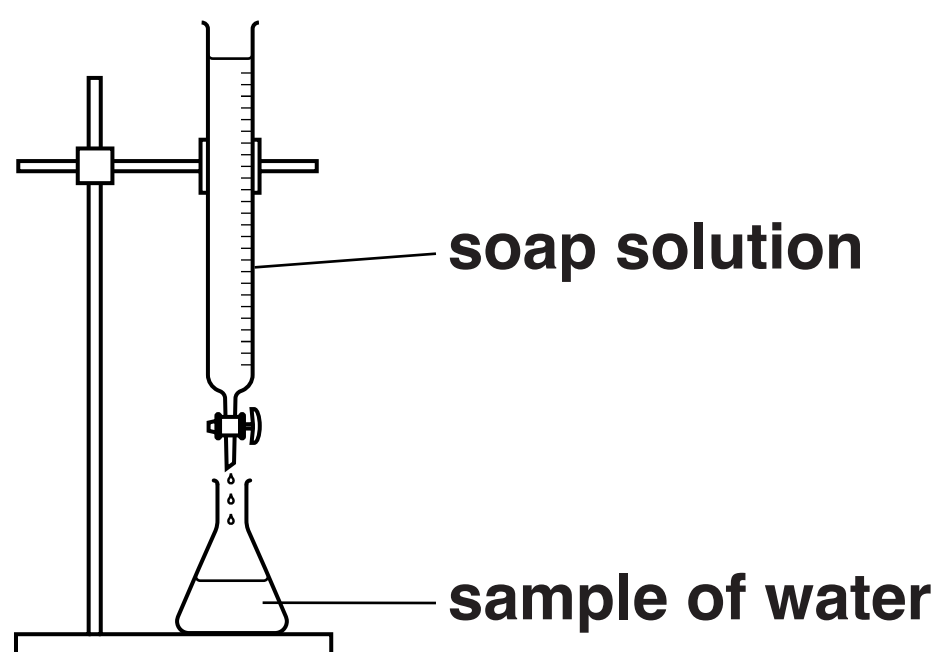
1 _____

2 _____
_____ **[2]**

BLANK PAGE

10 Kate is testing some samples of water with soap solution.

Look at the diagram. It shows the apparatus she uses.



Kate adds soap solution to each sample of water and shakes it.

She keeps adding soap solution until a lather remains.

Look at the table. It shows her results.

| SAMPLE | | VOLUME OF SOAP SOLUTION ADDED IN cm ³ |
|-----------------|----------------|--|
| distilled water | | 5.0 |
| X | before boiling | 15.0 |
| | after boiling | 5.0 |
| Y | before boiling | 20.0 |
| | after boiling | 20.0 |
| Z | before boiling | 14.0 |
| | after boiling | 10.0 |

(a) There are two types of water hardness.

These are permanent hardness and temporary hardness.

What types of hardness are present in each water sample?

X _____

Y _____

Z _____

Explain your answers.

[4]

(b) Washing soda (sodium carbonate) can be used to soften hard water.

Explain how washing soda softens hard water.

[2]

11 Nick is investigating ways of preventing iron from rusting.

He wants to protect the bottom of a ship.

The bottom of the ship is made from iron.

He treats samples of iron in different ways.

He leaves them in a damp place and sees how long it takes for the first signs of rust to appear.

Look at Nick's results.

| Type of treatment | Time for rust to appear in days | Cost of treatment in £ per tonne of iron |
|---|--|---|
| untreated iron (no treatment) | 1 | |
| painted iron | 10 | 100 |
| iron mixed with chromium (alloying) | 120 | 1000 |
| iron with blocks of magnesium attached | 50 | 500 |

Evaluate the ADVANTAGES and DISADVANTAGES of each type of treatment for protecting the bottom of the ship from rusting.

Explain how attaching blocks of magnesium helps to prevent rusting.

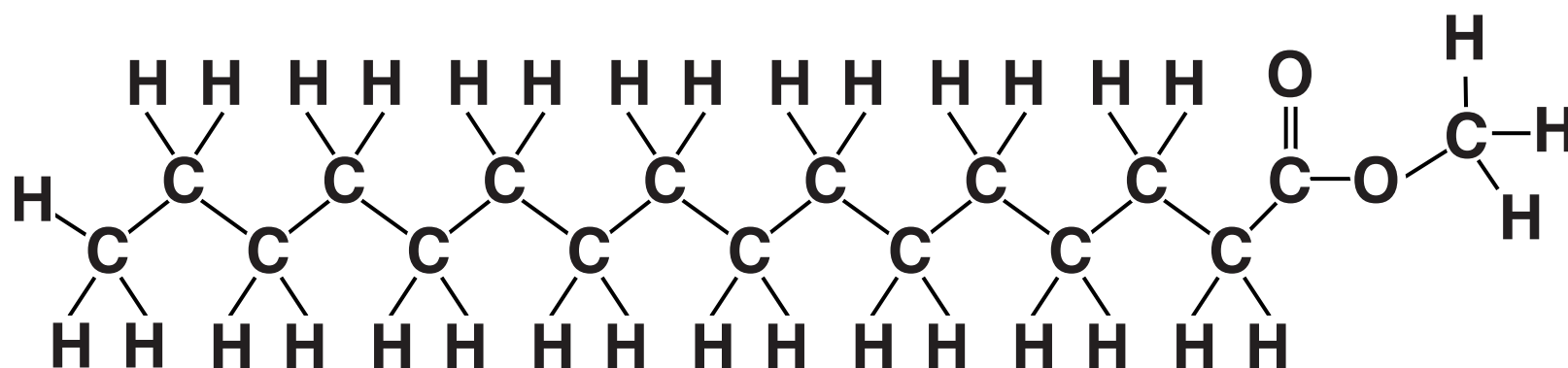


 **The quality of written communication will be assessed in your answer to this question.**

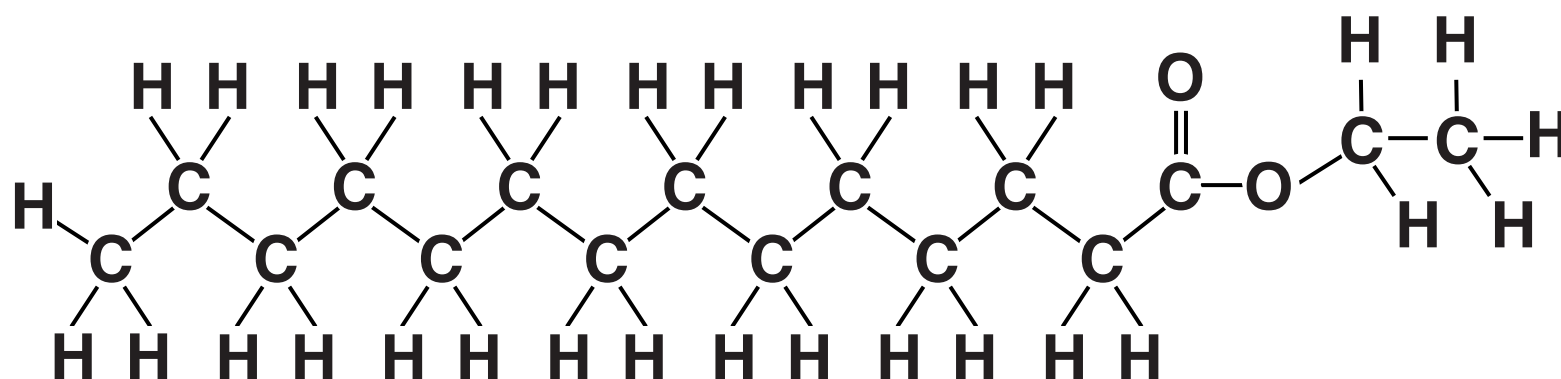
[illegible]

12 Look at the diagrams. They show the displayed formulas of some fats and oils.

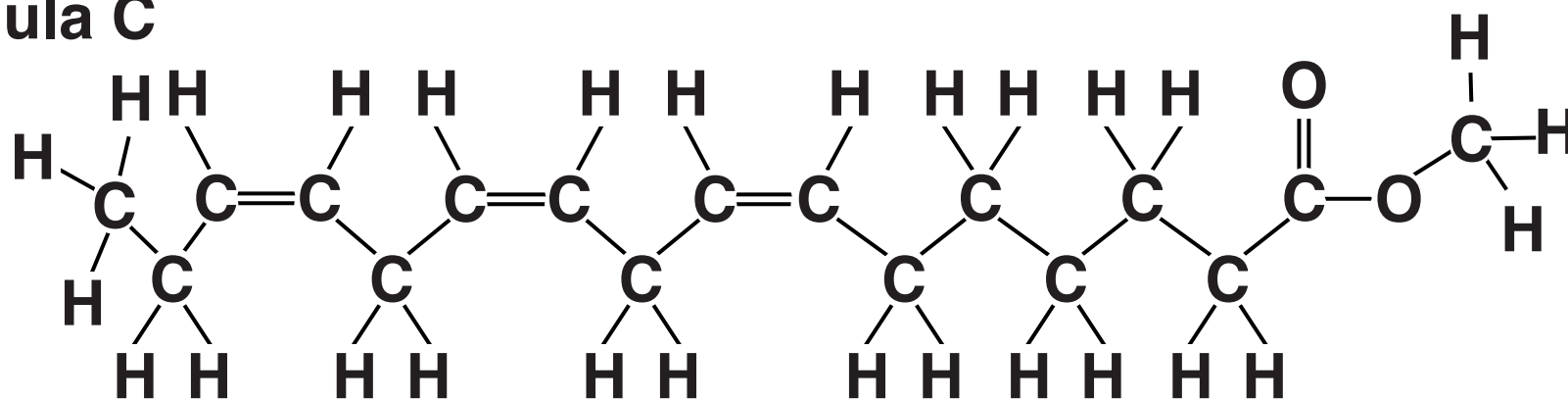
Formula A



Formula B



Formula C



(a) Which formula is UNSATURATED?

Explain your answer.

[2]

(b) Fats and oils can be split up by SAPONIFICATION.

Explain what happens during saponification.

[2]

(c) Look at the diagram of a detergent molecule.



Explain, using its structure, how a detergent molecule removes fat and oil stains from clothes.

[2]

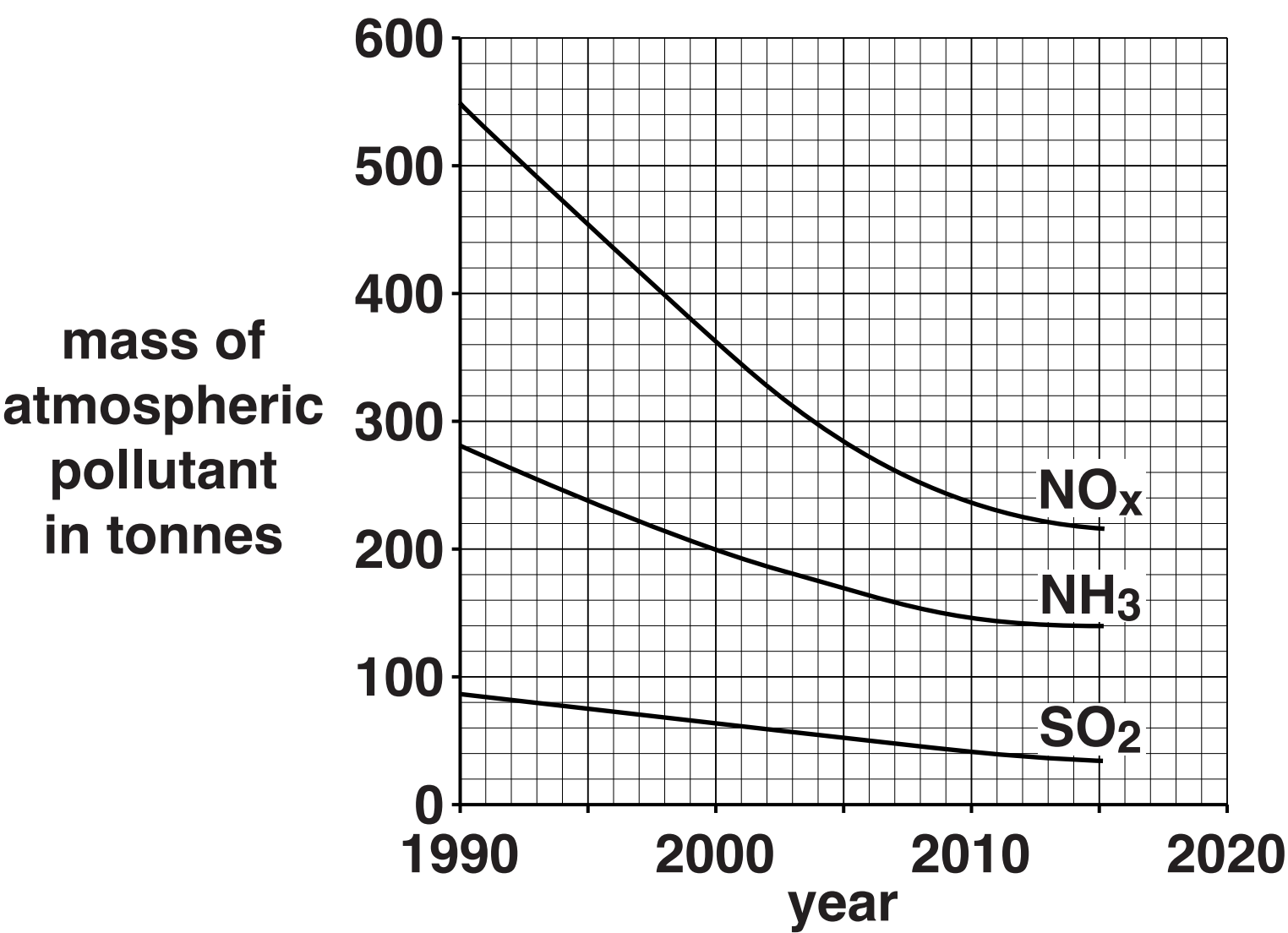
SECTION D

13 This question is about air pollution.

Three atmospheric pollutants are ammonia, NH_3 , oxides of nitrogen, NO_x , and sulfur dioxide, SO_2 .

(a) Look at the graph.

It shows how the masses of atmospheric pollutants have changed in a city since 1990.



Which atmospheric pollutant showed the **GREATEST** change in mass between 1990 and 2000?

Explain your answer.

[2]

- (b) The table shows information about atmospheric pollutants in some countries of the European Union.

| COUNTRY | POPULATION IN MILLIONS | MASS OF POLLUTANT MADE IN KILOTONNES | | |
|----------------|---------------------------|---|-----------------|-----------------|
| | | NO _x | SO ₂ | NH ₃ |
| Estonia | 1.3 | 38 | 83 | 10 |
| Germany | 80 | 1323 | 449 | 548 |
| Poland | 39 | 867 | 974 | 271 |
| Slovakia | 5.4 | 89 | 69 | 24 |
| Sweden | 9.6 | 161 | 34 | 52 |
| United Kingdom | 64 | 1106 | 406 | 284 |

| | | | | |
|-------------------------|-----|------|------|------|
| Whole of European Union | 508 | 9200 | 4600 | 3600 |
|-------------------------|-----|------|------|------|

- (i) What percentage of the total mass of NH₃ made by the European Union comes from Sweden?

percentage = _____ %

[2]

- (ii) The population of Sweden is 1.9% of the population of the European Union.

Compare this percentage with your answer in part (i).

What conclusion can you make from these results?

[1]

- (iii) Across the whole of the European Union an average of 9.1 kilotonnes of SO_2 is made for every million people.

In Poland how many kilotonnes of SO_2 are made for every million people?

Give your answer to TWO SIGNIFICANT FIGURES.

answer = _____ kilotonnes [2]

- (iv) What conclusion can you make from your answer?

[1]

(v) Ann concludes that the amount of atmospheric pollutant made by a country is linked only to its population.

Nick thinks there are OTHER factors involved as well.

Evaluate the evidence in the table in terms of both of these conclusions.

[2]

END OF QUESTION PAPER

Copyright Information

OCR is committed to seeking permission to reproduce all third-party content that it uses in its assessment materials. OCR has attempted to identify and contact all copyright holders whose work is used in this paper. To avoid the issue of disclosure of answer-related information to candidates, all copyright acknowledgements are reproduced in the OCR Copyright Acknowledgements Booklet. This is produced for each series of examinations and is freely available to download from our public website (www.ocr.org.uk) after the live examination series.

If OCR has unwittingly failed to correctly acknowledge or clear any third-party content in this assessment material, OCR will be happy to correct its mistake at the earliest possible opportunity.

For queries or further information please contact the Copyright Team, First Floor, 9 Hills Road, Cambridge CB2 1GE.

OCR is part of the Cambridge Assessment Group; Cambridge Assessment is the brand name of University of Cambridge Local Examinations Syndicate (UCLES), which is itself a department of the University of Cambridge.

