

**OXFORD CAMBRIDGE AND RSA EXAMINATIONS
GCSE**

B013/01

HOME ECONOMICS

Child Development

Principles of Child Development

TUESDAY 9 JUNE 2015: Morning

**DURATION: 1 hour 30 minutes
plus your additional time allowance**

MODIFIED ENLARGED 24pt

Candidate forename		Candidate surname	
-------------------------------	--	------------------------------	--

Centre number						Candidate number				
--------------------------	--	--	--	--	--	-----------------------------	--	--	--	--

Candidates answer on the Question Paper.

**OCR SUPPLIED MATERIALS:
None**

**OTHER MATERIALS REQUIRED:
None**

READ INSTRUCTIONS OVERLEAF

INSTRUCTIONS TO CANDIDATES

Write your name, centre number and candidate number in the boxes on the first page. Please write clearly and in capital letters.

Use black ink. HB pencil may be used for graphs and diagrams only.

Answer ALL the questions.

Read each question carefully. Make sure you know what you have to do before starting your answer.

Write your answer to each question in the space provided. If additional space is required, you should use the lined pages at the end of this booklet. The question number(s) must be clearly shown.

INFORMATION FOR CANDIDATES

The number of marks is given in brackets [] at the end of each question or part question.

The total number of marks for this paper is 80.

Your quality of written communication is assessed in the question marked with an asterisk (*).

Any blank pages are indicated.

BLANK PAGE







1 Toys help a child's development.

(a) Look at the list below.

Emotional	Intellectual	Creative
Physical	Social	Imaginative

Choose ONE different type of development for each of the following toys.

Use each word only once. The first one has been done for you.

	TOY	TYPE OF DEVELOPMENT
	Snap card game	Social
	Soft toy	
	Book	
	Slide	
	Dressing up clothes	
	Paints	

(b) State what is meant by the following terms.

(i) Cognitive skills

_____ **[1]**

(ii) A concept

_____ **[1]**

(iii) Self-esteem

_____ **[1]**

(iv) Siblings

_____ **[1]**

(c) Temper tantrums are expressions of children’s feelings.

(i) Give THREE reasons why a young child may have a temper tantrum.

1 _____

2 _____

3 _____

[3]

(ii) Identify THREE ways a parent/carer should deal with a temper tantrum in a young child.

1 _____

2 _____

3 _____

[3]

[TOTAL: 15]

2 A family is a basic unit of society.

(a) Describe THREE different types of family structure.

1

2

3

[6]

(b) The safety of children is one responsibility of a family.

(i) Give TWO ways a parent/carer could help prevent a child from choking or suffocating.

1

2

[2]

(ii) State TWO safety rules for storing medicines in the home.

1

2

[2]

- (c) Accident statistics show the types and numbers of accidents that happen.

The table below shows the number of accidents to children under five years of age.

ACCIDENT	NUMBER OF ACCIDENTS	PERCENTAGE
Falls	230 000	48
Struck by an object	111 000	23
Poisoning	68 000	15
Thermal/burns	31 000	6
Cuts	26 000	5
Bites and stings	12 000	3

- (i) Identify the most common accident to children.

_____ [1]

- (ii) What percentage of accidents are recorded as bites and stings?


_____ [1]

- (iii) What number of accidents are recorded as cuts?

_____ [1]

(d) All toys sold in the U.K. have to be tested for safety.

(i) Identify the safety label below.



_____ [1]

(ii) Give ONE other safety label that can be found on toys.

_____ [1]

[TOTAL: 15]

3* Different types of day care provision are available for children under five years old.

Describe the different types of day care provision available for children.

Explain why parents/carers may use day care provision for their child.

[15]



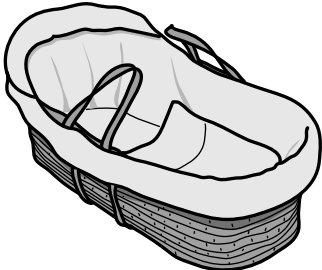
This image shows a blank sheet of white paper with horizontal ruling lines. The lines are evenly spaced and run across the width of the page. There are no margins, text, or other markings on the paper.

[illegible]

This image shows a blank sheet of white paper with horizontal ruling lines. The lines are evenly spaced and run across the width of the page. There are no margins, text, or other markings on the paper.

4 Parents/carers need to be well prepared for a new baby.

(a) Complete the table below with the approximate age a baby could begin to use each item of equipment.

	APPROXIMATE AGE
<div>Baby bouncer</div> <div></div>	<div>(i) _____</div>
<div>High chair</div> <div></div>	<div>(ii) _____</div>
<div>Moses basket</div> <div></div>	<div>(iii) _____</div>

[3]

(b) Explain FOUR points to consider when buying a high chair.

1 _____

2 _____

3 _____

4 _____

[8]

(c) All babies need clothing.

(i) What name is given to the first set of clothes for a new born baby?

_____ **[1]**

(ii) Give THREE advantages of using disposable nappies.

1 _____

2 _____

3 _____

[3]

(d) A doctor will examine a baby the day after it is born.

State FOUR checks the doctor will carry out on the baby.

1 _____

2 _____

3 _____

4 _____

[4]

(e) What term refers to the first few weeks following the birth of a baby?

_____ **[1]**

[TOTAL: 20]

5 (a) Children can be vaccinated to help prevent some diseases.

(i) State the THREE diseases the DTaP vaccine helps to prevent.

1 _____

2 _____

3 _____

[3]

(ii) Give TWO other diseases children are usually vaccinated against before school age.

1 _____

2 _____

[2]

(iii) What is an “oral vaccine”?

_____ [1]

(b) Below is a list of terms for the ways infectious diseases are spread.

Ingestion Droplet Contact

Complete the table below to match each example to the correct term.

EXAMPLE	TERM
Holding hands	
Eating a sandwich	
Sneezing	

[3]

(c) Children need a balanced diet to remain healthy.

(i) State why a child's diet should provide the following nutrients.

Calcium _____

Protein _____

[2]

(ii) Identify TWO good sources of animal protein.

1 _____

2 _____

[2]

(iii) Identify TWO good sources of vegetable protein.

1 _____

2 _____

[2]

[TOTAL: 15]

END OF QUESTION PAPER

ADDITIONAL ANSWER SPACE

If additional answer space is required, you should use the following lined page(s). The question number(s) must be clearly shown in the margins.

[illegible]

Copyright Information

OCR is committed to seeking permission to reproduce all third-party content that it uses in its assessment materials. OCR has attempted to identify and contact all copyright holders whose work is used in this paper. To avoid the issue of disclosure of answer-related information to candidates, all copyright acknowledgements are reproduced in the OCR Copyright Acknowledgements Booklet. This is produced for each series of examinations and is freely available to download from our public website (www.ocr.org.uk) after the live examination series.

If OCR has unwittingly failed to correctly acknowledge or clear any third-party content in this assessment material, OCR will be happy to correct its mistake at the earliest possible opportunity.

For queries or further information please contact the Copyright Team, First Floor, 9 Hills Road, Cambridge CB2 1GE.

OCR is part of the Cambridge Assessment Group; Cambridge Assessment is the brand name of University of Cambridge Local Examinations Syndicate (UCLES), which is itself a department of the University of Cambridge.

